

SSC CGL 2017 EXAM PAPER : Held on 19-AUG-2017 Shift-2

(Reasoning)

QID : 101 - Select the related word from the given alternatives.

Swim : Water :: Fly : ?

Options:

- 1) Bird
- 2) Air
- 3) Wings
- 4) Plane

Correct Answer: Air

QID : 102 - Select the related letters from the given alternatives.

G I K : P R T :: D F H : ?

Options:

- 1) L N P
- 2) M O Q
- 3) R P N
- 4) J L N

Correct Answer: M O Q

QID : 103 - Select the related number from the given alternatives.

55 : 11 :: 125 : ?

Options:

- 1) 22
- 2) 5
- 3) 25
- 4) 101

Correct Answer: 25

QID : 104 - Select the odd word from the given alternatives.

Options:

- 1) Football
- 2) Basketball

- 3) Cricket ball
- 4) Volleyball

Correct Answer: Cricket ball

QID : 105 - Select the odd letters from the given alternatives.

Options:

- 1) USQ
- 2) OMK
- 3) IGE
- 4) VUT

Correct Answer: VUT

QID : 106 - Select the odd number from the given alternatives.

Options:

- 1) 110
- 2) 140
- 3) 154
- 4) 198

Correct Answer: 140

QID : 107 - A series is given, with one word missing. Choose the correct alternative from the given ones that will complete the series.

cry, dome, super, random, ?

Options:

- 1) reflex
- 2) done
- 3) formula
- 4) classify

Correct Answer: formula

QID : 108 - A series is given, with one term missing. Choose the correct alternative from the given ones that will complete the series.

OXXXXX, XXXXO, OXXX, XXO, OX, ?

Options:

- 1) X
- 2) XO
- 3) OO
- 4) O

Correct Answer: O

QID : 109 - A series is given, with one number missing. Choose the correct alternative from the given ones that will complete the series.

1.5, $9/4$, 3, ?, 4.5, $21/4$

Options:

- 1) $15/4$
- 2) $7/2$
- 3) 8
- 4) 9

Correct Answer: $15/4$

QID : 110 - Divyansh's birthday is on Sunday 16th July. On what day of the week will be Shaan's Birthday in the same year if Shaan was born on 1st August?

Options:

- 1) Tuesday
- 2) Monday
- 3) Wednesday
- 4) Wednesday

Correct Answer: Tuesday

QID : 111 - The weights of 4 boxes are 30, 20, 50 and 90 kilograms. Which of the following cannot be the total weight, in kilograms, of any combination of these boxes and in a combination a box can be used only once?

Options:

- 1) 200
- 2) 190
- 3) 140
- 4) 160

Correct Answer: 200

QID : 112 - From the given words, select the word which cannot be formed using the letters of the given word.

SCALDING

Options:

- 1) DICES
- 2) SNAIL
- 3) ALIGN
- 4) CLANG

Correct Answer: DICES

QID : 113 - If OUTLINE is coded as QWVNKPG, then how will MAN be coded as?

Options:

- 1) FVQ
- 2) RNE
- 3) OCP
- 4) RKX

Correct Answer: OCP

QID : 114 - In a certain code language, '+' represents 'x', '-' represents '+', 'x' represents '÷' and '÷' represents '-'. What is the answer to the following question?

$$50 + 3 \div 125 \times 5 - 25 = ?$$

Options:

- 1) 31
- 2) 17
- 3) 150
- 4) 55

Correct Answer: 150

QID : 115 - If $26\#14=80$; $5\#3=16$; $6\#5=22$; then what is the value of $14\#5=?$

Options:

- 1) 17
- 2) 38
- 3) 4
- 4) 9

Correct Answer: 38

QID : 116 -

Select the missing number from the given responses

दिए गए विकल्पों में से लुप्त संख्या चुनिए।

117	28	145
35	?	111
211	11	222

Options:

- 1) 39
- 2) 76
- 3) 146
- 4) 333

Correct Answer: 76

QID : 117 - A and B start from the same point. A cycles 8 km South, then turns to her right and cycles 5 km. B cycles 3 km North, then turns West and cycles 5 km, then turns to her left and cycles 4 km. Where is B with respect to A now?

Options:

- 1) 7 km North
- 2) 7 km South
- 3) 15 km North
- 4) 15 km South

Correct Answer: 7 km North

QID : 118 - In the question a statement is given, followed by two arguments, I and II. You have to consider the statement to be true even if it seems to be at variance from commonly known facts. You have to decide which of the given arguments, if any, is a strong argument.

Statement : Should Chinese crackers be banned?

Argument I : No, China will be hurt by this decision.

Argument II : Yes, crackers kill insects.

Options:

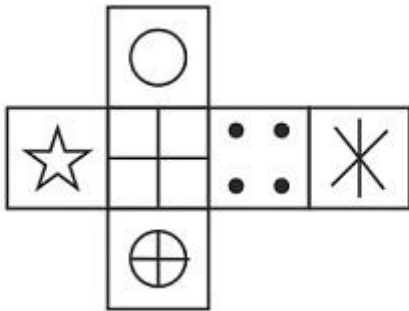
- 1) if only argument I is strong.
- 2) if only argument II is strong.
- 3) if both I and II are strong.
- 4) if neither I nor II is strong.

Correct Answer: if neither I nor II is strong.

QID : 119 -

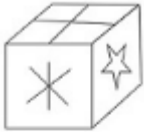
Which of the following cube in the answer figure cannot be made based on the unfolded cube in the question figure?

निम्नलिखित उत्तर आकृति में से कौन सा घन दिए गए प्रश्न आकृति में से खुले घन से बनाया नहीं जा सकता?



Options:

1)



2)



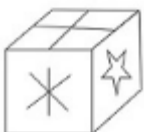
3)



4)



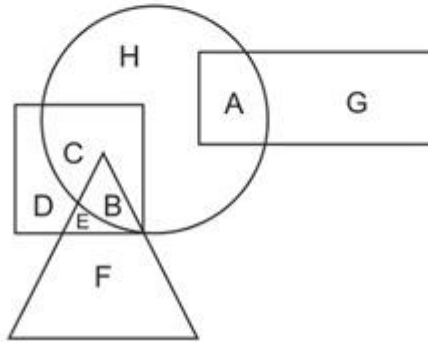
Correct Answer:



QID : 120 -

In the following figure, square represents Pharmacists, triangle represents Dancers, circle represents Gynaecologists and rectangle represents Women. Which set of letters represents Gynaecologists who are neither Women nor Dancers?

निम्नलिखित आकृति में, वर्ग औषध विक्रेताओं को दर्शाता है, त्रिभुज नृतकियों को दर्शाता है, वृत्त स्त्रीरोग विशेषज्ञों को दर्शाता है और आयत महिलाओं को दर्शाता है। अक्षरों का कौन सा समूह स्त्रीरोग विशेषज्ञों को दर्शाता है जो न तो महिला हैं और न ही नृतक हैं?



Options:

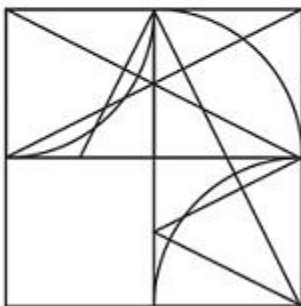
- 1) F,B,H
- 2) B,D,H
- 3) D,E,A
- 4) C,H

Correct Answer: C,H

QID : 121 -

Which answer figure will complete the pattern in the question figure?

निम्नलिखित में से कौन-सी उत्तर आकृति प्रश्न आकृति के प्रतिरूप को पूरा करेगी?



Options:

1)



2)



3)



4)



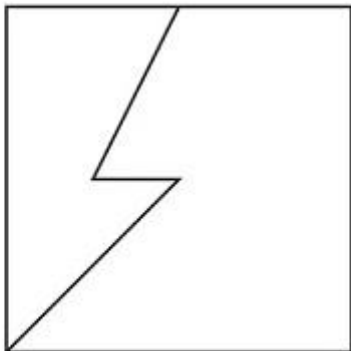
Correct Answer:



QID : 122 -

From the given answer figures, select the one in which the question figure is hidden/embedded.

दी गई उत्तर आकृतियों में से उस आकृति को चुनिए जिसमें प्रश्न आकृति निहित है।



Options:

1)



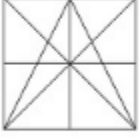
2)



3)



4)



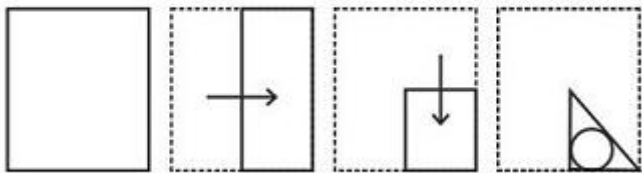
Correct Answer:



QID : 123 -

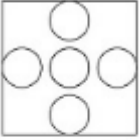
A piece of paper is folded and punched as shown below in the question figures. From the given answer figures, indicate how it will appear when opened.

प्रश्न आकृतियों में दिखाए अनुसार कागज को मोड़कर उसमें छेद करने तथा खोलने के बाद वह किस उत्तर आकृति जैसा दिखाई देगा?

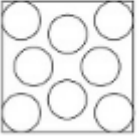


Options:

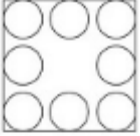
1)



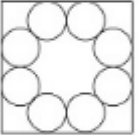
2)



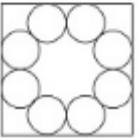
3)



4)



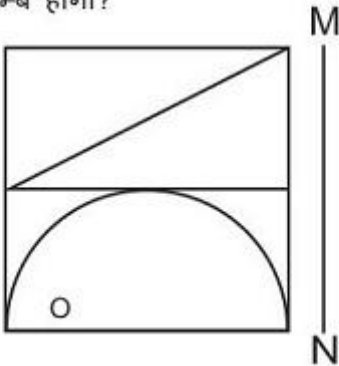
Correct Answer:



QID : 124 -

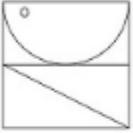
If a mirror is placed on the line MN, then which of the answer figures is the right image of the given figure?

यदि एक दर्पण को MN रेखा पर रखा जाए तो दी गई उत्तर आकृतियों में से कौन-सी आकृति प्रश्न आकृति का सही प्रतिबिम्ब होगी?

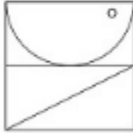


Options:

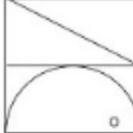
1)



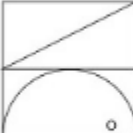
2)



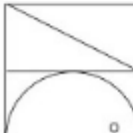
3)



4)



Correct Answer:



QID : 125 -

PACE ACADEMY

A word is represented by only one set of numbers as given in any one of the alternatives. The sets of numbers given in the alternatives are represented by two classes of alphabets as shown in the given two matrices. The columns and rows of Matrix-I are numbered from 0 to 4 and that of Matrix-II are numbered from 5 to 9. A letter from these matrices can be represented first by its row and next by its column, for example 'K' can be represented by 42, 34 etc and 'Z' can be represented by 97, 69 etc. Similarly, you have to identify the set for the word 'ROPE'.

एक शब्द केवल एक संख्या-समूह द्वारा दर्शाया गया है, जैसा कि विकल्पों में से किसी एक में दिया गया है। विकल्पों में दिए गए संख्या-समूह अक्षरों के दो वर्गों द्वारा दर्शाए गए हैं, जैसा कि दिए गए दो आव्यूहों में है। आव्यूह-I के स्तम्भ और पंक्ति की संख्या 0 से 4 और आव्यूह-II की 5 से 9 है। इन आव्यूहों से एक अक्षर को पहले उसकी पंक्ति और बाद में स्तम्भ संख्या द्वारा दर्शाया जा सकता है। उदाहरण के लिए 'K' को 42, 34 आदि द्वारा दर्शाया जा सकता है तथा 'Z' को 97, 69 आदि द्वारा दर्शाया जा सकता है। इसी तरह से आपको प्रश्न में दिए शब्द 'ROPE' के लिए समूह को पहचानना है।

Matrix I		आव्यूह - I			
	0	1	2	3	4
0	F	F	I	H	E
1	H	G	B	K	E
2	E	D	M	I	H
3	B	A	A	E	K
4	J	K	K	C	G

Matrix II		आव्यूह - II			
	5	6	7	8	9
5	V	Y	W	W	T
6	T	X	N	R	Z
7	U	U	U	T	X
8	R	T	X	P	O
9	V	S	Z	Y	N

Options:

- 1) 10,24,56,69
- 2) 03,02,58,79
- 3) 85,89,88,20
- 4) 04,32,97,65

Correct Answer: 85,89,88,20

QID : 126 - In India the reform policies were first introduced in which year?

Options:

- 1) 1951
- 2) 1971
- 3) 1991
- 4) 2001

Correct Answer: 1991

(General Awareness)

QID : 127 - The _____ of a firm is a relationship between inputs used and output produced by the firm.

Options:

- 1) Marginal product
- 2) Production function
- 3) Total product
- 4) Average product

Correct Answer: Production function

QID : 128 - _____ means that the President of India can refer any matter that is of public importance or that which involves interpretation of Constitution to Supreme Court for advice.

Options:

- 1) Original Jurisdiction
- 2) Writ Jurisdiction
- 3) Appellate Jurisdiction
- 4) Advisory Jurisdiction

Correct Answer: Advisory Jurisdiction

QID : 129 - There are total _____ parliamentary seats (Rajya Sabha constituency) in Tripura.

Options:

- 1) 7
- 2) 1
- 3) 18
- 4) 10

Correct Answer: 1

QID : 130 - During their rule the British persuaded or forced cultivators in Assam to grow _____.

Options:

- 1) Jute
- 2) Tea
- 3) Sugarcane
- 4) Wheat

Correct Answer: Tea

QID : 131 - The Chola kingdom mostly ruled which region of India?

Options:

- 1) East
- 2) West

- 3) North
- 4) South

Correct Answer: South

QID : 132 - In due course of time the meander loop cuts off from the river and forms a cut-off lake, also called an _____ lake.

Options:

- 1) ox-bow
- 2) oasis
- 3) lagoon
- 4) tectonic

Correct Answer: ox-bow

QID : 133 - The oceanic crust mainly consists of silica and _____.

Options:

- 1) magnesium
- 2) iron
- 3) manganese
- 4) sulphur

Correct Answer: magnesium

QID : 134 - Order Primata comprising monkey, gorilla and gibbon is placed in class Mammalia along with order Carnivora that includes?

Options:

- 1) Giraffe, Camels and Elephants
- 2) Crocodile, Lizard and Snake
- 3) Lion, Leopard and Tiger
- 4) Tiger, Cats and Dogs

Correct Answer: Tiger, Cats and Dogs

QID : 135 - In roots, the protoxylem lies towards periphery and metaxylem lies towards the centre. Such arrangement of primary xylem is called _____.

Options:

- 1) Xylem fibres
- 2) Xylem parenchyma
- 3) Exarch
- 4) Endarch

Correct Answer: Exarch

QID : 136 - Which is the only one example of Mollusca Phylum?

Options:

- 1) Locust
- 2) Butterfly
- 3) Scorpion
- 4) Octopus

Correct Answer: Octopus

QID : 137 - If the speed of an object moving along a straight line keeps changing, its motion is said to be _____.

Options:

- 1) Uniform
- 2) Periodic
- 3) Circular
- 4) Non-uniform

Correct Answer: Non-uniform

QID : 138 - The substances which reduce friction are called _____.

Options:

- 1) irregularities
- 2) lubricants
- 3) adhesives
- 4) viscous

Correct Answer: lubricants

QID : 139 - Notepad' is a text editor in which of the following operating systems?

Options:

- 1) Windows
- 2) Google Chrome
- 3) Mozilla Firefox
- 4) Macintosh

Correct Answer: Windows

QID : 140 - Magnesium oxide (MgO) + Water (H₂O) = ?

Options:

- 1) [Mg(OH)]
- 2) [Mg₂(OH)]
- 3) [Mg(O₂H)₂]
- 4) [Mg(OH)₂]

Correct Answer: [Mg(OH)₂]

QID : 141 - What is the unit of calorific value?

Options:

- 1) kN/kg
- 2) kJ/kg
- 3) kW/sec
- 4) kCal/sec

Correct Answer: kJ/kg

QID : 142 - According to Central Pollution Control Board (CPCB), particulate size _____ micrometers or less in diameter are responsible for causing the greatest harm to human health.

Options:

- 1) 0.5
- 2) 2.5
- 3) 5
- 4) 10

Correct Answer: 2.5

QID : 143 - _____ scheme launched by the Central Government is a special social security scheme which includes Pension and Life Insurance.

Options:

- 1) Deen Dayal Upadhyaya Grameen Kaushalya Yojana
- 2) Deendayal Upadhyaya Gram Jyoti Yojana
- 3) Mahatma Gandhi Pravasi Suraksha Yojana
- 4) Indradanush Scheme

Correct Answer: Mahatma Gandhi Pravasi Suraksha Yojana

QID : 144 - Who invented Space Pen?

Options:

- 1) Paul C. Fisher
- 2) Rudolf Diesel
- 3) Wright Brothers
- 4) Alexander Fleming

Correct Answer: Paul C. Fisher

QID : 145 - Who was the 2015 Men's Rugby World Cup Runner-Up?

Options:

- 1) New Zealand
- 2) South Africa

- 3) Australia
- 4) England

Correct Answer: Australia

QID : 146 - Group of Monuments at Hampi was built by?

Options:

- 1) Harihara and Bukka
- 2) Udayin and Shishunaga
- 3) Devavarman and Vainya
- 4) Maravarman and Sirmara

Correct Answer: Harihara and Bukka

QID : 147 - Which of the following won the Best Feature Film Award at the 64th National Film Awards held in the year 2017?

Options:

- 1) Rustom
- 2) Kaasav
- 3) Dangal
- 4) Airlift

Correct Answer: Kaasav

QID : 148 - Which of the statements given below are correct?

1. The author of the novel 'Fellside' is Victor LaValle.
2. The author of the novel 'A Head Full of Ghosts' is M.R Carey.
3. The author of the novel 'Brave New World' is Aldous Huxley.

Options:

- 1) 1 and 2
- 2) 2 and 3
- 3) 1 and 3
- 4) 1, 2 and 3

Correct Answer: 1 and 2

QID : 149 - Which county was in the first rank in the 2016 Human Development Index published by the United Nations Development Programme?

Options:

- 1) Norway
- 2) Australia
- 3) Germany
- 4) Denmark

Correct Answer: Norway

QID : 150 - Name the estuary on the border of India and Pakistan?

Options:

- 1) Daman Creek
- 2) Sir Creek
- 3) Karwar Creek
- 4) Mandovi Creek

Correct Answer: Sir Creek

QID : 151 - Select the correct option:

Convert decimal 101 to binary .

Options:

- 1) 1101001
- 2) 1100111
- 3) 1101011
- 4) 1100101

Correct Answer: 1100101

QID : 152 - A can paint a house in 42 days and B can do it in 21 days. Along with C, they can finish the job in 7 days only. C alone can do the painting job in how many days, ?

Options:

- 1) 9
- 2) 12
- 3) 14
- 4) 15

Correct Answer: 14

QID : 153 - What is the area (in sq cm) of a circle whose circumference is 26.4 cm?

Options:

- 1) 55.44
- 2) 44.55
- 3) 33.44
- 4) 44.33

Correct Answer: 55.44

QID : 154 - The cost price of an article is x. It is marked up by 120%. It is sold at Rs 8800 after giving 20% discount. What is the value (in Rs) of x?

Options:

- 1) 7680
- 2) 6000
- 3) 6680
- 4) 5000

Correct Answer: 5000

QID : 155 - A bag has Rs 43 in the form of 5-rupee, 50-paise and 10-paise coins in the ratio of 1:5:11. What is the total number of 50-paise coins?

Options:

- 1) 5
- 2) 25
- 3) 55
- 4) 50

Correct Answer: 25

QID : 156 - In the first 45 overs of a 50 over innings, the run rate was 5.8 runs per over. What is the required run rate in the remaining overs to reach the target of 295 runs?

Options:

- 1) 6.9
- 2) 6.8
- 3) 6.7
- 4) 6.6

Correct Answer: 6.8

(Mathematics)

QID : 157 - A milkman buys milk at Rs 24 per litre. He adds $\frac{1}{5}$ of water to it and sells the mixture at Rs 32 per litre. What will be his gain (in %)?

Options:

- 1) 50
- 2) 40
- 3) 30
- 4) 60

Correct Answer: 60

QID : 158 - When a number is increased by 105, it becomes 135% of itself. What is the number?

Options:

- 1) 450
- 2) 300

- 3) 600
- 4) 400

Correct Answer: 300

QID : 159 - Two cyclists P and Q cycle at 20 km/hr and 16 km/hr towards each other respectively. What was the distance (in kms) between them when they started if they met after 40 minutes?

Options:

- 1) 36
- 2) 30
- 3) 25
- 4) 24

Correct Answer: 24

QID : 160 - If the amount received at 10% per annum Compound interest after 3 yrs is Rs 19965, then what will have been the principal (in Rs) amount?

Options:

- 1) 16000
- 2) 15000
- 3) 17000
- 4) 18000

Correct Answer: 15000

QID : 161 - If $8x/3 + [7(5 - 2x/3)]/2 = 1/2$, then what is the value of x?

Options:

- 1) -17
- 2) 51
- 3) -51
- 4) 17

Correct Answer: -51

QID : 162 - If $a - b = -1$ and $ab = 6$, then what is the value of $a^3 - b^3$?

Options:

- 1) 33
- 2) -19
- 3) 18
- 4) 35

Correct Answer: -19

QID : 163 - The sum of a fraction and 3 times its reciprocal is $31/6$. What is the fraction?

Options:

- 1) $2/9$
- 2) $9/2$
- 3) $5/4$
- 4) $4/5$

Correct Answer: $9/2$

QID : 164 - The 2nd and 8th term of an arithmetic progression are 17 and -1 respectively. What is the 14th term?

Options:

- 1) -22
- 2) -25
- 3) -19
- 4) -28

Correct Answer: -19

QID : 165 - What is the reflection of the point (2, 3) in the line $y = 4$?

Options:

- 1) (2, 5)
- 2) (2, -5)
- 3) (-2, -5)
- 4) (-2, 5)

Correct Answer: (2, 5)

QID : 166 - Point P (-2, 5) is the midpoint of segment AB. Co-ordinates of A are (-5, y) and B are (x, 3). What is the value of x?

Options:

- 1) 1
- 2) -1
- 3) 2
- 4) -2

Correct Answer: 1

QID : 167 - What is the equation of a line having a slope $-1/3$ and y-intercept equal to 6?

Options:

- 1) $x + 3y = 18$
- 2) $x - 3y = 6$
- 3) $x + 3y = -18$
- 4) $x - 3y = -6$

Correct Answer: $x + 3y = 18$

QID : 168 - ΔABC is right angled at B. BD is its altitude. AD = 4 cm and DC = 12 cm. What is the value of AB (in cm)?

Options:

- 1) 9
- 2) 10
- 3) 6
- 4) 8

Correct Answer: 8

QID : 169 - What is the value of $\sin 60^\circ + \frac{1}{2}\operatorname{Cosec} 45^\circ$?

Options:

- 1) $(\sqrt{3} + 2)/2$
- 2) $(\sqrt{3} + \sqrt{2})/\sqrt{2}$
- 3) $(\sqrt{3} + 2)/\sqrt{2}$
- 4) $(\sqrt{3} + \sqrt{2})/2$

Correct Answer: $(\sqrt{3} + \sqrt{2})/2$

QID : 170 - ΔLMN is right angled at M. If $m\angle N = 45^\circ$. What is the length (in cm) of MN, if $NL = 6\sqrt{2}$ cm?

Options:

- 1) 3
- 2) 4
- 3) 2
- 4) 6

Correct Answer: 6

QID : 171 - If $\cos \theta = 35/37$, then what is the value of $\operatorname{Cosec} \theta$?

Options:

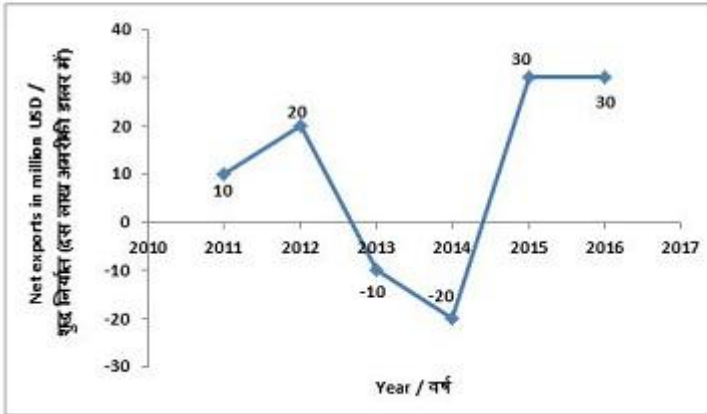
- 1) 37/12
- 2) 33/12
- 3) 35/12
- 4) 12/35

Correct Answer: 37/12

QID : 172 -

The line graph shows Net exports in million USD of a certain country (Net exports = Exports - Imports). Study the diagram and answer the following questions.

लाइन ग्राफ एक निश्चित देश का शुद्ध निर्यात (दस लाख अमरीकी डालर में) दर्शाता है। (शुद्ध निर्यात = निर्यात - आयात)। इस आरेख का अध्ययन करें और निम्नलिखित प्रश्नों का उत्तर दें।



In how many years were the net exports more than that of the previous year?

Options:

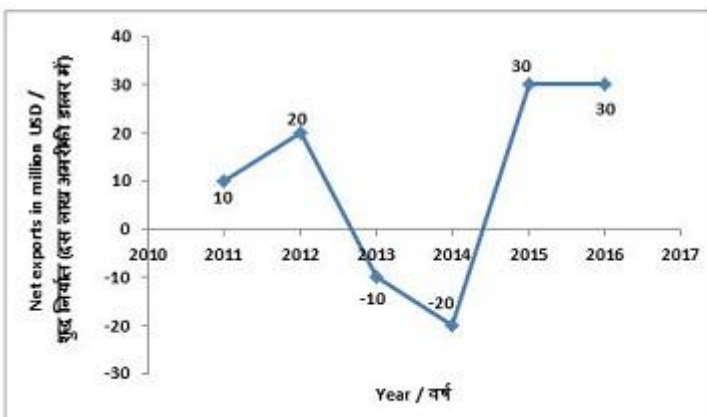
- 1) 1
- 2) 3
- 3) 4
- 4) 2

Correct Answer: 2

QID : 173 -

The line graph shows Net exports in million USD of a certain country (Net exports = Exports - Imports). Study the diagram and answer the following questions.

लाइन ग्राफ एक निश्चित देश का शुद्ध निर्यात (दस लाख अमरीकी डालर में) दर्शाता है। (शुद्ध निर्यात = निर्यात - आयात)। इस आरेख का अध्ययन करें और निम्नलिखित प्रश्नों का उत्तर दें।



If the exports in 2013 were 90 million USD then what was the imports (in million USD)?

Options:

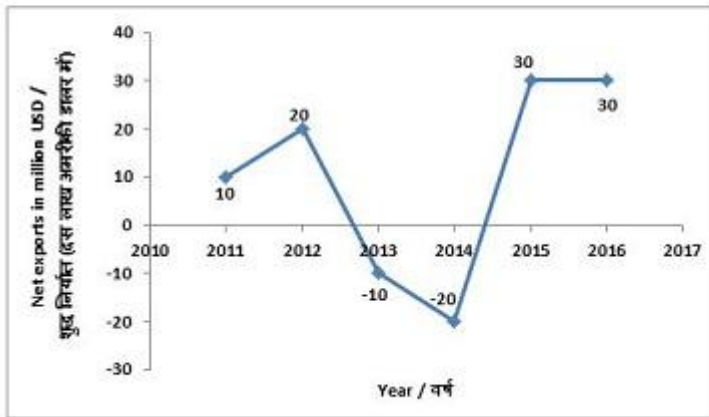
- 1) 80
- 2) 110
- 3) 70
- 4) 100

Correct Answer: 100

QID : 174 -

The line graph shows Net exports in million USD of a certain country (Net exports = Exports - Imports). Study the diagram and answer the following questions.

लाइन ग्राफ एक निश्चित देश का शुद्ध निर्यात (दस लाख अमरीकी डालर में) दर्शाता है। (शुद्ध निर्यात = निर्यात - आयात)। इस आरेख का अध्ययन करें और निम्नलिखित प्रश्नों का उत्तर दें।



What is the ratio of net exports in year 2016 to that in year 2012?

Options:

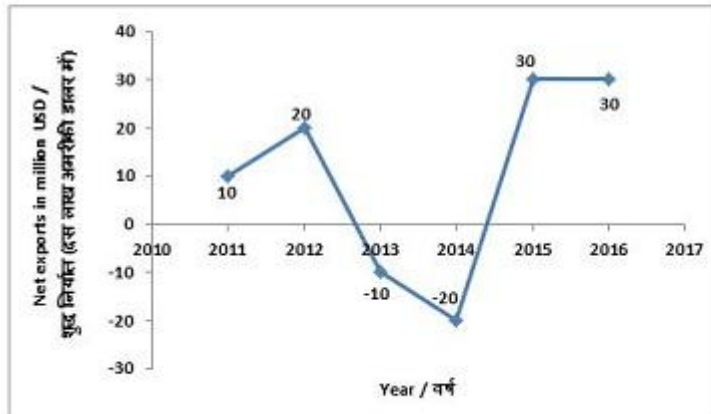
- 1) 2 : 3
- 2) 3 : 1
- 3) 1 : 3
- 4) 3 : 2

Correct Answer: 3 : 2

QID : 175 -

The line graph shows Net exports in million USD of a certain country (Net exports = Exports - Imports). Study the diagram and answer the following questions.

लाइन ग्राफ एक निश्चित देश का शुद्ध निर्यात (दस लाख अमरीकी डालर में) दर्शाता है। (शुद्ध निर्यात = निर्यात - आयात)। इस आरेख का अध्ययन करें और निम्नलिखित प्रश्नों का उत्तर दें।



Cumulative net exports (in million USD) from the beginning of 2012 to the end of 2015 was?

Options:

- 1) 80
- 2) 40
- 3) 20
- 4) 60

Correct Answer: 20

(English Comprehension)

QID : 176 - In the following question, some part of the sentence may have errors. Find out which part of the sentence has an error and select the appropriate option. If a sentence is free from error, select 'No Error'.

He was going to (1)/ like the clothes she (2)/ bought of the trip. (3)/No Error (4)

Options:

- 1) 1
- 2) 2
- 3) 3
- 4) 4

Correct Answer: 3

QID : 177 - In the following question, some part of the sentence may have errors. Find out which part of the sentence has an error and select the appropriate option. If a sentence is free from error, select 'No Error'.

"You didn't answer my (1)/ question," he said, (2)/ stepping to her. (3)/No Error (4)

Options:

- 1) 1
- 2) 2
- 3) 3
- 4) 4

Correct Answer: 3

QID : 178 - In the following question, the sentence given with blank to be filled in with an appropriate word. Select the correct alternative out of the four and indicate it by selecting the appropriate option.

After missing four days of school due to a _____ of flu, Babita struggled to make up for her missing work.

Options:

- 1) bout
- 2) about
- 3) amount
- 4) array

Correct Answer: bout

QID : 179 - In the following question, the sentence given with blank to be filled in with an appropriate word. Select the correct alternative out of the four and indicate it by selecting the appropriate option.

The company refunded the customer's money in _____ with the laws.

Options:

- 1) according
- 2) accordingly
- 3) accordance
- 4) accord

Correct Answer: accordance

QID : 180 - In the following question, out of the four alternatives, select the word similar in meaning to the word given.

Affectionate

Options:

- 1) Neglectful
- 2) Aloof
- 3) Sympathetic
- 4) suppressive

Correct Answer: Sympathetic

QID : 181 - In the following question, out of the four alternatives, select the word similar in meaning to the word given.

Consequent

Options:

- 1) Inception
- 2) Ensuing
- 3) Dawn
- 4) Creation

Correct Answer: Ensuing

QID : 182 - In the following question, out of the four alternatives, select the word opposite in meaning to the word given.

Parsimonious

Options:

- 1) Avaricious
- 2) Chintzy
- 3) Frugal
- 4) Lavish

Correct Answer: Lavish

QID : 183 - In the following question, out of the four alternatives, select the word opposite in meaning to the word given.

To filch

Options:

- 1) To smuggle
- 2) To appropriate
- 3) To encroach
- 4) To philanthropy

Correct Answer: To philanthropy

QID : 184 - In the following question, out of the four alternatives, select the alternative which best expresses the meaning of the idiom/phrase.

In black and white

Options:

- 1) Be colour blind
- 2) Not able to appreciate the finer things in life
- 3) Be excessively prejudiced against something or someone
- 4) A very clear choice that causes no confusion

Correct Answer: A very clear choice that causes no confusion

QID : 185 - In the following question, out of the four alternatives, select the alternative which best expresses the meaning of the idiom/phrase.

Out of date

Options:

- 1) Not have time; very busy
- 2) Not stick to the schedule
- 3) Fail to find a partner
- 4) Old-fashioned

Correct Answer: Old-fashioned

QID : 186 - In the following question, out of the four alternatives, select the alternative which will improve the bracketed part of the sentence. In case no improvement is needed, select "no improvement".

There's nothing wrong with (having to) a different opinion.

Options:

- 1) have to
- 2) has to
- 3) having
- 4) no improvement

Correct Answer: having

QID : 187 - In the following question, out of the four alternatives, select the alternative which will improve the bracketed part of the sentence. In case no improvement is needed, select "no improvement".

It has (being) too dangerous for too many people.

Options:

- 1) to be
- 2) become
- 3) be
- 4) no improvement

Correct Answer: become

QID : 188 - In the following question, out of the four alternatives, select the alternative which is the best substitute of the words/sentence.

Conformity to facts

Options:

- 1) Veracity
- 2) Deceit
- 3) Hypothesis
- 4) Theory

Correct Answer: Veracity

QID : 189 - In the following question, out of the four alternatives, select the alternative which is the best substitute of the words/sentence.

Search for and collect anything usable from discarded waste

Options:

- 1) Scavenge
- 2) Disperse
- 3) Dissipate
- 4) Scatter

Correct Answer: Scavenge

QID : 190 - In the following question, four words are given out of which one word is correctly spelt. Select the correctly spelt word.

Options:

- 1) Extrution
- 2) Extrusion
- 3) Extrosion
- 4) Extrotion

Correct Answer: Extrusion

QID : 191 - In the following question, four words are given out of which one word is correctly spelt. Select the correctly spelt word.

Options:

- 1) Reterate
- 2) Reiterate
- 3) Reiterete
- 4) Reterete

Correct Answer: Reiterate

QID : 192 - The question below consists of a set of labelled sentences. Out of the four options given, select the most logical order of the sentences to form a coherent paragraph.

Then the gigantic figure

X-alarming spectacle

Y-slipped off the tree and stood

Z-up before us, a truly

Options:

- 1) YZX
- 2) YXZ
- 3) XZY
- 4) XYZ

Correct Answer: YZX

QID : 193 - The question below consists of a set of labelled sentences. Out of the four options given, select the most logical order of the sentences to form a coherent paragraph.

We admit as much

X-that it is related to the body
Y-when we say that the mind
Z-is immaterial, and yet hold

Options:

- 1) YXZ
- 2) XZY
- 3) YZX
- 4) XYZ

Correct Answer: YZX

QID : 194 - In the following question, a sentence has been given in Active/Passive voice. Out of the four alternatives suggested, select the one which best expresses the same sentence in Passive/Active voice.

No one responded to my online ad.

Options:

- 1) My online ad was not responded to by anyone.
- 2) My online ad is not responded to by anyone.
- 3) Response by no one was given to my online ad.
- 4) Response by no one is given to my online ad.

Correct Answer: My online ad was not responded to by anyone.

QID : 195 - In the following question, a sentence has been given in Direct/Indirect speech. Out of the four alternatives suggested, select the one which best expresses the same sentence in Indirect/Direct speech.

Ajay said to my sister, "It's wonderful!"

Options:

- 1) Ajay tells my sister that it's wonderful.
- 2) Ajay tells to my sister that it was wonderful.

- 3) Ajay told my sister that it was wonderful.
4) Ajay told to my sister that it's being wonderful.

Correct Answer: Ajay told my sister that it was wonderful.

QID : 196 - In the following passage, some of the words have been left out. Read the passage carefully and select the correct answer for the given blank out of the four alternatives.

For a minute, dispel all the mental images and stereotypes; _____ the jargon of 'opening up,' 'flow,' 'nidra,' and 'balance'. Focus _____ what you need for your body. _____ you aren't sure, begin here — with just one asana. It's one of the basic ones _____ I lead every class with. You can do it as a stand-alone piece _____ begin with it when you're at the gym.

mental images and stereotypes; _____ the jargon of 'opening up

Options:

- 1) forgetful
2) forget
3) forgot
4) forgotten

Correct Answer: forget

QID : 197 - In the following passage, some of the words have been left out. Read the passage carefully and select the correct answer for the given blank out of the four alternatives.

For a minute, dispel all the mental images and stereotypes; _____ the jargon of 'opening up,' 'flow,' 'nidra,' and 'balance'. Focus _____ what you need for your body. _____ you aren't sure, begin here — with just one asana. It's one of the basic ones _____ I lead every class with. You can do it as a stand-alone piece _____ begin with it when you're at the gym.

Focus _____ what you need for your body.

Options:

- 1) of
2) for
3) off
4) on

Correct Answer: on

QID : 198 - In the following passage, some of the words have been left out. Read the passage carefully and select the correct answer for the given blank out of the four alternatives.

For a minute, dispel all the mental images and stereotypes; _____ the jargon of 'opening up,' 'flow,' 'nidra,' and 'balance'. Focus _____ what you need for your body. _____ you aren't sure, begin here — with just one asana. It's one of the basic ones _____ I lead every class with. You can do it as a stand-alone piece _____ begin with it when you're at the gym.

_____ you aren't sure, begin here — with just one asana.

Options:

- 1) For
- 2) But
- 3) If
- 4) Whether

Correct Answer: If

QID : 199 - In the following passage, some of the words have been left out. Read the passage carefully and select the correct answer for the given blank out of the four alternatives.

For a minute, dispel all the mental images and stereotypes; _____ the jargon of 'opening up,' 'flow,' 'nidra,' and 'balance'. Focus _____ what you need for your body. _____ you aren't sure, begin here — with just one asana. It's one of the basic ones _____ I lead every class with. You can do it as a stand-alone piece _____ begin with it when you're at the gym.

It's one of the basic ones _____ I lead every class with.

Options:

- 1) this
- 2) these
- 3) that
- 4) those

Correct Answer: that

QID : 200 - In the following passage, some of the words have been left out. Read the passage carefully and select the correct answer for the given blank out of the four alternatives.

For a minute, dispel all the mental images and stereotypes; _____ the jargon of 'opening up,' 'flow,' 'nidra,' and 'balance'. Focus _____ what you need for your body. _____ you aren't sure, begin here — with just one asana. It's one of the basic ones _____ I lead every class with. You can do it as a stand-alone piece _____ begin with it when you're at the gym.

stand-alone piece _____ begin with it when you're at the gym.

Options:

- 1) or
- 2) nor
- 3) either
- 4) neither

Correct Answer: or