

# SSC CGL 2017 EXAM PAPER : Held on 17-AUG-2017 Shift-3

## (Reasoning)

**QID : 201 - Select the related word from the given alternatives.**

**Tongue : Taste :: Nose : ?**

**Options:**

- 1) Smell
- 2) Face
- 3) Touch
- 4) Chin

**Correct Answer: Smell**

**QID : 202 - Select the related letters from the given alternatives.**

**FDH : LJN :: RPT : ?**

**Options:**

- 1) XYZ
- 2) WUY
- 3) XVZ
- 4) SUV

**Correct Answer: XVZ**

**QID : 203 - Select the related number from the given alternatives.**

**39 : 52 :: 51 : ?**

**Options:**

- 1) 53
- 2) 40
- 3) 68
- 4) 38

**Correct Answer: 68**

**QID : 204 - Select the odd word from the given alternatives.**

**Options:**

- 1) Nylon
- 2) Wool
- 3) Silk
- 4) Cotton

**Correct Answer: Nylon**

**QID : 205 - Select the odd letters from the given alternatives.**

**Options:**

- 1) ZXV
- 2) GDA
- 3) NKH
- 4) URO

**Correct Answer: ZXV**

**QID : 206 - Select the odd number from the given alternatives.**

**Options:**

- 1) 15
- 2) 20
- 3) 40
- 4) 60

**Correct Answer: 15**

**QID : 207 - A series is given, with one word missing. Choose the correct alternative from the given ones that will complete the series.**

**Pension, Aptitude, Captain, Tropical, Survive, ?**

**Options:**

- 1) Parrot
- 2) Apply
- 3) Trap
- 4) Tetrapod

**Correct Answer: Tetrapod**

**QID : 208 - A series is given, with one term missing. Choose the correct alternative from the given ones that will complete the series.**

**DEC, HIG, LMK, PQO, TUS, ?**

**Options:**

- 1) XYZ
- 2) WXY
- 3) XYW
- 4) YZA

**Correct Answer: XYW**

**QID : 209 - A series is given, with one number missing. Choose the correct alternative from the given ones that will complete the series.**

**100, -20, 4, ? , 0.16, -0.032**

**Options:**

- 1) 0.8
- 2) 1
- 3) -1
- 4) -0.8

**Correct Answer: -0.8**

**QID : 210 - Chirag's birthday is on Thursday 1st June. On what day of the week will be Reyansh's Birthday in the same year if Reyansh was born on 3rd December?**

**Options:**

- 1) Wednesday
- 2) Sunday
- 3) Friday
- 4) Saturday

**Correct Answer: Sunday**

**QID : 211 - The weights of 4 boxes are 20, 40, 50 and 30 kilograms. Which of the following cannot be the total weight, in kilograms, of any combination of these boxes and in a combination a box can be used only once**

**Options:**

- 1) 140
- 2) 130
- 3) 90
- 4) 120

**Correct Answer: 130**

**QID : 212 - From the given words, select the word which cannot be formed using the letters of the given word.**

**ORDINALS**

**Options:**

- 1) DINAR
- 2) ADORN
- 3) SALON
- 4) IDEAL

**Correct Answer: IDEAL**

**QID : 213 - If QUICKLY is coded as OSGAIJW, then how will HUE be coded as?**

**Options:**

- 1) ZMA
- 2) FSC
- 3) HZK
- 4) HNI

**Correct Answer: FSC**

**QID : 214 - In a certain code language, '+' represents 'x', '-' represents '+', 'x' represents '÷' and '÷' represents '-'. What is the answer to the following question?**

$$42 \times 7 \div 7 + 9 - 62 = ?$$

**Options:**

- 1) 5
- 2) 87
- 3) 22
- 4) 2

**Correct Answer: 5**

**QID : 215 - If  $17@1=8$ ;  $9@1=4$ ;  $6@4=1$ ; then what is the value of  $8@2=?$**

**Options:**

- 1) 3
- 2) 26
- 3) 23
- 4) 47

**Correct Answer: 3**

**QID : 216 -**

Select the missing number from the given responses

दिए गए विकल्पों में से लुप्त संख्या चुनिए।

23	114	204
45	25	36
68	89	?

**Options:**

- 1) 157
- 2) 168
- 3) 21
- 4) 15

**Correct Answer: 168**

**QID : 217 - A truck travels 36 km North, then it turns West and travels 9 km, then it turns South and travels 50 km, then it turns to its left and travels 9 km. Where is it now with reference to its starting position?**

**Options:**

- 1) 14 km North
- 2) 86 km South
- 3) 86 km North
- 4) 14 km South

**Correct Answer: 14 km South**

**QID : 218 - In the question two statements are given, followed by two conclusions, I and II. You have to consider the statements to be true even if it seems to be at variance from commonly known facts. You have to decide which of the given conclusions, if any, follows from the given statements.**

Statement 1 : Some clever are intelligent.  
Statement 2 : No intelligent is Smart.

Conclusion I : Some intelligent are clever.  
Conclusion II : Some smart are clever.

**Options:**

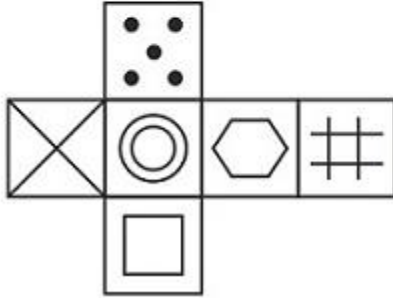
- 1) Only conclusion I follows
- 2) Only conclusion II follows
- 3) Both I and II follow
- 4) Neither I nor II follows

**Correct Answer: Only conclusion I follows**

**QID : 219 -**

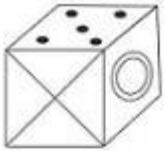
Which of the following cube in the answer figure cannot be made based on the unfolded cube in the question figure?

निम्नलिखित उत्तर आकृति में से कौन सा घन दिए गए प्रश्न आकृति में से खुले घन से बनाया नहीं जा सकता?

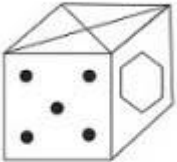


**Options:**

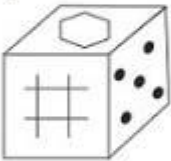
1)



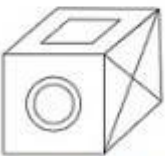
2)



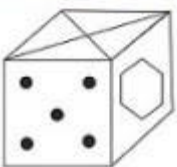
3)



4)



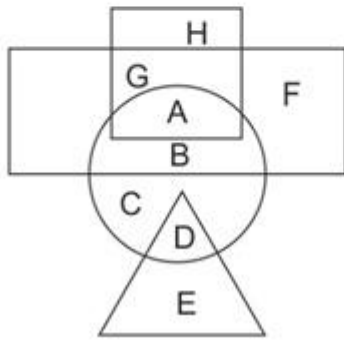
**Correct Answer:**



**QID : 220 -**

In the following figure, square represents Dietitians, triangle represents Botanists, circle represents Psychologists and rectangle represents Indians. Which set of letters represents Psychologists who are not Botanists?

निम्नलिखित आकृति में, वर्ग आहार विशेषज्ञों को दर्शाता है, त्रिभुज वनस्पतिज्ञों को दर्शाता है, वृत्त मनोवैज्ञानिकों को दर्शाता है और आयत भारतीयों को दर्शाता है। अक्षरों का कौन सा समूह मनोवैज्ञानिकों को दर्शाता है जो वनस्पतिज्ञ नहीं हैं?



**Options:**

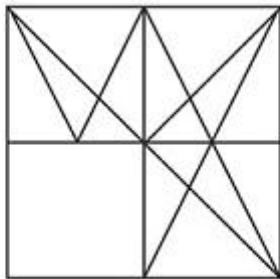
- 1) D,G,A
- 2) A,B,C
- 3) F,E,C
- 4) H,B,D

**Correct Answer: A,B,C**

**QID : 221 -**


Which answer figure will complete the pattern in the question figure?

निम्नलिखित में से कौन-सी उत्तर आकृति प्रश्न आकृति के प्रतिरूप को पूरा करेगी?




Options:

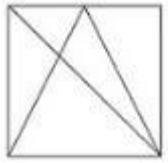
1)



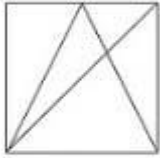
2)



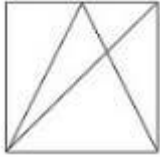
3)



4)



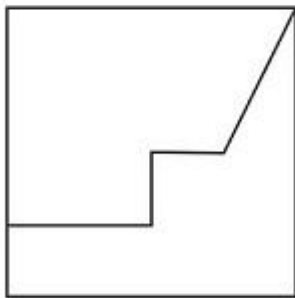
Correct Answer:



QID : 222 -

From the given answer figures, select the one in which the question figure is hidden/embedded.

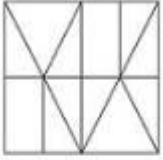
दी गई उत्तर आकृतियों में से उस आकृति को चुनिए जिसमें प्रश्न आकृति निहित है।



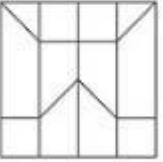


Options:

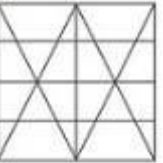
1)



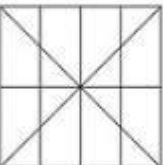
2)



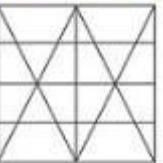
3)



4)



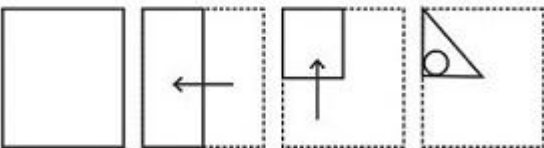
Correct Answer:



QID : 223 -

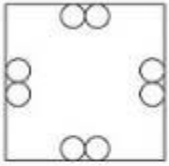
A piece of paper is folded and punched as shown below in the question figures. From the given answer figures, indicate how it will appear when opened.

प्रश्न आकृतियों में दिखाए अनुसार कागज को मोड़कर उसमें छेद करने तथा खोलने के बाद वह किस उत्तर आकृति जैसा दिखाई देगा?

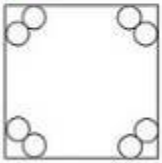


Options:

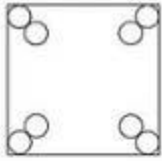
1)



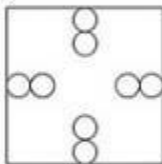
2)



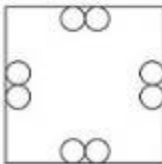
3)



4)



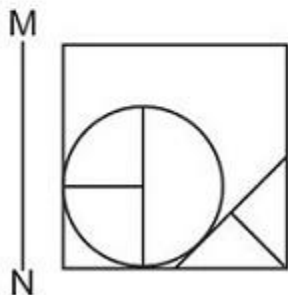
Correct Answer:



QID : 224 -

If a mirror is placed on the line MN, then which of the answer figures is the right image of the given figure?

यदि एक दर्पण को MN रेखा पर रखा जाए तो दी गई उत्तर आकृतियों में से कौन-सी आकृति प्रश्न आकृति का सही प्रतिबिम्ब होगी?



Options:

1)



2)



3)



4)



Correct Answer:



PACE ACADEMY

**QID : 225 -**

A word is represented by only one set of numbers as given in any one of the alternatives. The sets of numbers given in the alternatives are represented by two classes of alphabets as shown in the given two matrices. The columns and rows of Matrix-I are numbered from 0 to 4 and that of Matrix-II are numbered from 5 to 9. A letter from these matrices can be represented first by its row and next by its column, for example 'K' can be represented by 20, 34 etc and 'Z' can be represented by 67, 88 etc. Similarly, you have to identify the set for the word 'PURE'.

एक शब्द केवल एक संख्या-समूह द्वारा दर्शाया गया है, जैसा कि विकल्पों में से किसी एक में दिया गया है। विकल्पों में दिए गए संख्या-समूह अक्षरों के दो वर्गों द्वारा दर्शाए गए हैं, जैसा कि दिए गए दो आव्यूहों में है। आव्यूह-I के स्तम्भ और पंक्ति की संख्या 0 से 4 और आव्यूह-II की 5 से 9 है। इन आव्यूहों से एक अक्षर को पहले उसकी पंक्ति और बाद में स्तम्भ संख्या द्वारा दर्शाया जा सकता है। उदाहरण के लिए 'K' को 20, 34 आदि द्वारा दर्शाया जा सकता है तथा 'Z' को 67, 88 आदि द्वारा दर्शाया जा सकता है। इसी तरह से आपको प्रश्न में दिए शब्द 'PURE' के लिए समूह को पहचानना है।

Matrix I आव्यूह - I					
	0	1	2	3	4
0	G	K	D	D	G
1	A	J	F	E	J
2	K	F	H	F	A
3	D	G	M	C	K
4	C	L	H	J	B

Matrix II आव्यूह - II					
	5	6	7	8	9
5	O	T	V	U	R
6	Q	U	Z	Y	T
7	V	Y	X	Q	N
8	Y	R	X	Z	P
9	N	U	Y	U	O

**Options:**

- 1) 89,96,86,13
- 2) 34,34,56,79
- 3) 41,44,67,96
- 4) 01,10,79,57

**Correct Answer: 89,96,86,13**

**(General Awareness)**

**QID : 226 - In a market system, the central problems regarding how much and what to produce are solved through the coordination of economic activities brought about by \_\_\_\_\_ signals.**

**Options:**

- 1) Supply
- 2) Demand
- 3) Price
- 4) Stock Market

**Correct Answer: Price**

**QID : 227 - \_\_\_\_\_ says that the marginal product of a factor input initially rises with its employment level. But after reaching a certain level of employment, it starts falling.**

**Options:**

- 1) Law of diminishing marginal product
- 2) Law of variable proportions
- 3) The Short Run
- 4) The Long Run

**Correct Answer: Law of variable proportions**

**QID : 228 - Constituent Assembly of India was founded in the year \_\_\_\_\_.**

**Options:**

- 1) 1940
- 2) 1946
- 3) 1947
- 4) 1950

**Correct Answer: 1946**

**QID : 229 - Which Fundamental Right in the Indian Constitution allows citizens to move the court if they believe that any of their Fundamental Rights have been violated by the State?**

**Options:**

- 1) Cultural and Educational Rights
- 2) Right to Constitutional Remedies
- 3) Right against Exploitation
- 4) Right to Freedom of Religion

**Correct Answer: Right to Constitutional Remedies**

**QID : 230 - During their rule the British persuaded or forced cultivators in Punjab to grow \_\_\_\_\_.**

**Options:**

- 1) Jute
- 2) Tea
- 3) Sugarcane
- 4) Wheat

**Correct Answer: Wheat**

**QID : 231 - The Red fort in Delhi was the residence of emperors of which dynasty in the 16th century?**

**Options:**

- 1) Rajput
- 2) Khalji

- 3) Tughluq
- 4) Mughal

**Correct Answer: Mughal**

**QID : 232 - India has a land boundary of about \_\_\_\_\_ km.**

**Options:**

- 1) 5200
- 2) 10200
- 3) 15200
- 4) 20200

**Correct Answer: 15200**

**QID : 233 - The Patkai hills belong to which mountain ranges?**

**Options:**

- 1) Himachal
- 2) Purvanchal
- 3) Himgiri
- 4) Hindu Kush

**Correct Answer: Purvanchal**

**QID : 234 - RBCs are formed in the \_\_\_\_\_ in the adults.**

**Options:**

- 1) blue bone marrow
- 2) red bone marrow
- 3) white bone marrow
- 4) black bone marrow

**Correct Answer: red bone marrow**

**QID : 235 - The later (second) formed primary xylem elements are called \_\_\_\_\_.**

**Options:**

- 1) Protoxylem
- 2) Metaxylem
- 3) Xylem parenchyma
- 4) Xylem fibres

**Correct Answer: Metaxylem**

**QID : 236 - Which of the following does not hold true for Animal belonging to Phylum Chordate?**

**Options:**

- 1) Notochord present
- 2) Pharynx perforated by gill slits.
- 3) Heart is dorsal (if present)
- 4) A post-anal part (tail) is present

**Correct Answer: Heart is dorsal (if present)**

**QID : 237 - In science a push or pull of an object is called \_\_\_\_\_.**

**Options:**

- 1) Pick
- 2) Lift
- 3) Force
- 4) Shut

**Correct Answer: Force**

**QID : 238 - There are how many vocal cords in the human voice box?**

**Options:**

- 1) One
- 2) Two
- 3) Three
- 4) Four

**Correct Answer: Two**

**QID : 239 - The attribute \_\_\_\_\_ specifies (in pixels) the distance between two adjacent cells.**

**Options:**

- 1) Width
- 2) Height
- 3) Cellpadding
- 4) Cellspacing

**Correct Answer: Cellspacing**

**QID : 240 - What is the name of the acid in an ant's sting?**

**Options:**

- 1) Acetic acid
- 2) Citric acid
- 3) Formic acid
- 4) Lactic acid

**Correct Answer: Formic acid**

**QID : 241 - Which base is present in soap?**

**Options:**

- 1) Sodium hydroxide
- 2) Silicon dioxide
- 3) Calcium hydroxide
- 4) Ammonium hydroxide

**Correct Answer: Sodium hydroxide**

**QID : 242 - Any undesirable change in physical, chemical or biological characteristics of air, land, water or soil is called?**

**Options:**

- 1) Greenhouse effect
- 2) Solid wastes
- 3) Pollution
- 4) Deforestation

**Correct Answer: Pollution**

**QID : 243 - \_\_\_\_\_ scheme was launched by the Central Government to create awareness about the cleanliness of the children.**

**Options:**

- 1) Sukanya Samridhi Yojana
- 2) Bal Swachta Mission
- 3) Pradhan Mantri Jan Dhan Yojana
- 4) Beti Bachao Beti Padhao Yojana

**Correct Answer: Bal Swachta Mission**

**QID : 244 - Who discovered the colour photography?**

**Options:**

- 1) Robert Noyce
- 2) Enrico Fermi
- 3) John Logie Baird
- 4) James Clerk Maxwell

**Correct Answer: James Clerk Maxwell**

**QID : 245 - Who was the host nation of 2014 FIFA World Cup?**

**Options:**

- 1) Argentina
- 2) Netherlands
- 3) Germany
- 4) Brazil



**Correct Answer: Brazil**

**QID : 246 - Jama Masjid of Delhi was built by?**

**Options:**

- 1) Akbar
- 2) Humayun
- 3) Babar
- 4) Shah Jahan

**Correct Answer: Shah Jahan**

**QID : 247 - Which of the following won the Oscars 2017 Best Picture?**

**Options:**

- 1) La La Land
- 2) Moonlight
- 3) Arrival
- 4) Fences

**Correct Answer: Moonlight**

**QID : 248 - Which of the statements given below are correct?**

1. The author of the novel 'Half of a Yellow Sun' is Chimamanda Ngozi Adichie.
2. The author of the novel 'Middlesex' is Jeffrey Eugenides.
3. The author of the novel 'Missile Gap' is China Mieville.

**Options:**

- 1) 1 and 2
- 2) 2 and 3
- 3) 1 and 3
- 4) 1, 2 and 3

**Correct Answer: 1 and 2**

**QID : 249 - Which company acquired LinkedIn For \$26.2 Billion?**

**Options:**

- 1) Apple
- 2) Facebook
- 3) Microsoft
- 4) IBM

**Correct Answer: Microsoft**

**QID : 250 - Which of the following rivers flows from India to Pakistan?**

**Options:**

- 1) Satluj
- 2) Ghaghra
- 3) Betwa
- 4) Tapi

**Correct Answer: Satluj**

## (Mathematics)

**QID : 251 - What least number must be added to 4131, so that the sum is completely divisible by 19?**

**Options:**

- 1) 10
- 2) 11
- 3) 9
- 4) 12

**Correct Answer: 11**

**QID : 252 - A, B and C can finish a job working alone in 12, 8 and 24 days respectively. In how many days they can finish the job if they worked together?**

**Options:**

- 1) 5
- 2) 6
- 3) 4
- 4) 3

**Correct Answer: 4**

**QID : 253 - What is the area (in sq cm) of an equilateral triangle of side 14 cm?**

**Options:**

- 1)  $49\sqrt{3}$
- 2)  $98\sqrt{3}$
- 3)  $(49/2)\sqrt{3}$
- 4)  $(49/4)\sqrt{3}$

**Correct Answer:  $49\sqrt{3}$**

**QID : 254 - What is the effective discount (in %) on two successive discounts of 20% and 10%?**

**Options:**

- 1) 30
- 2) 32
- 3) 35
- 4) 28

**Correct Answer: 28**

**QID : 255 - Profit of Rs 1,03,500 has to be divided between three partners A, B and C in the ratio 11:7:5. How much amount (in Rs) does B get?**

**Options:**

- 1) 22,500
- 2) 49,500
- 3) 50,500
- 4) 31,500

**Correct Answer: 31,500**

**QID : 256 - The average weight of P, Q and R is 45 kg. If the average weight of P and Q be 36.5 kg and that of Q and R be 52 kg, then what is the weight (in kgs) of Q?**

**Options:**

- 1) 42
- 2) 44
- 3) 46
- 4) 48

**Correct Answer: 42**

**QID : 257 - A shopkeeper by selling 21 items earns a profit equal to the selling price of 1 item. What is his profit percentage?**

**Options:**

- 1) 5.5
- 2) 2.2
- 3) 2
- 4) 5

**Correct Answer: 5**

**QID : 258 - What is the value of 10% of 150% of 400?**

**Options:**

- 1) 600
- 2) 50
- 3) 500
- 4) 60

**Correct Answer: 60**

**QID : 259 - To cover a distance of 144 km in 3.2 hours what should be the average speed of the car in meters/second?**

**Options:**

- 1) 12.5
- 2) 10
- 3) 7.5
- 4) 15

**Correct Answer: 12.5**

**QID : 260 - If in 2 years at simple interest the principal increases by 18%, what will be the compound interest (in Rs) earned on Rs 7000 in 3 years at the same rate?**

**Options:**

- 1) 1865.2
- 2) 2065.2
- 3) 1965.2
- 4) 1765.2

**Correct Answer: 2065.2**

**QID : 261 - If  $x/3 - [5(7x/5 - 4/3)]/2 = -x/6$ , then what is the value of x?**

**Options:**

- 1) 10/9
- 2) -10/9
- 3) -9/10
- 4) 9/10

**Correct Answer: 10/9**

**QID : 262 - If  $a^3 + b^3 = 19$  and  $a + b = 1$ , then what is the value of  $ab$ ?**

**Options:**

- 1) 5
- 2) -6
- 3) 7
- 4) -9

**Correct Answer: -6**

**QID : 263 - A fraction is greater than its reciprocal by  $(72)/(77)$ . What is the fraction?**

**Options:**

- 1) 7/11
- 2) 11/7
- 3) 4/7
- 4) 7/4

**Correct Answer: 11/7**

**QID : 264 - What is the sum of the first 12 terms of an arithmetic progression if the first term is -19 and last term is 36?**

**Options:**

- 1) 192
- 2) 230
- 3) 102
- 4) 214

**Correct Answer: 102**

**QID : 265 - What is the reflection of the point (-2, 5) in the line  $x = -1$ ?**

**Options:**

- 1) (-2 , -7)
- 2) (0 , 5)
- 3) (2 , 5)
- 4) (-2 , 7)

**Correct Answer: (0 , 5)**

**QID : 266 - Point P is the midpoint of segment AB. Co-ordinates of P are (3 , 1) and B are (5, -4). What are the co-ordinates of point A?**

**Options:**

- 1) (-1 , 7)
- 2) (1 , -7)
- 3) (1 , 6)
- 4) (-1 , -7)

**Correct Answer: (1 , 6)**

**QID : 267 - What is the slope of the line perpendicular to the line passing through the points (-5 , 1) and (-2 , 0)?**

**Options:**

- 1) -3
- 2) 3
- 3) -1/3
- 4) 1/3

**Correct Answer: -1/3**

**QID : 268 -  $\Delta ABC$  is similar to  $\Delta PQR$ . If ratio of perimeter of  $\Delta ABC$  : perimeter of  $\Delta PQR$  is 5:9 and if  $PQ = 45$  cm, then the length of AB (in cm) is?**

**Options:**

- 1) 15
- 2) 20
- 3) 25
- 4) 16

**Correct Answer: 25**

**QID : 269 - What is the value of  $(1/\sqrt{2}) \cot 45^\circ + (1/\sqrt{3}) \operatorname{Cosec} 60^\circ$ ?**

**Options:**

- 1)  $(\sqrt{6} + 1)/\sqrt{3}$
- 2)  $\sqrt{3}$
- 3)  $(1 + 3\sqrt{2})/\sqrt{3}$
- 4)  $(3 + 2\sqrt{2})/3\sqrt{2}$

**Correct Answer:  $(3 + 2\sqrt{2})/3\sqrt{2}$**

**QID : 270 -  $\Delta ABC$  is right angled at B. If  $m\angle A = 60^\circ$ , then what is the value of  $\sec C \cdot \sin A$ ?**

**Options:**

- 1)  $2/\sqrt{3}$
- 2)  $\sqrt{3}/2$
- 3)  $2/3$
- 4) 1

**Correct Answer: 1**

**QID : 271 - If  $\tan \theta = 7/24$ , then what is the value of  $\sec \theta$ ?**

**Options:**

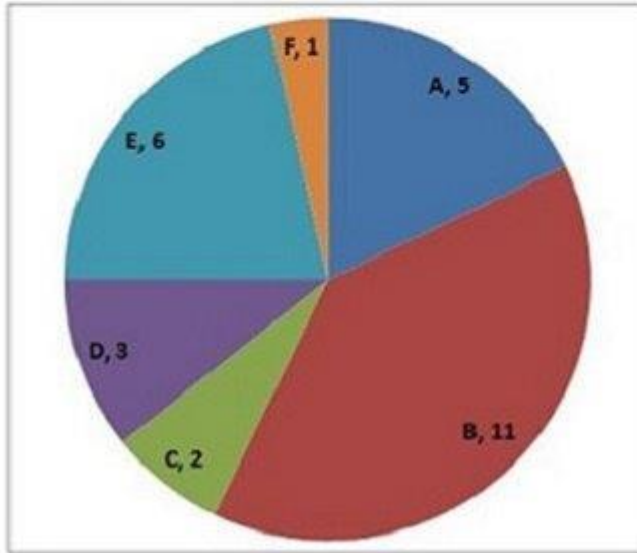
- 1)  $24/25$
- 2)  $24/7$
- 3)  $25/7$
- 4)  $25/24$

**Correct Answer:  $25/24$**

**QID : 272 -**

The pie chart shows tickets sold (in 1000s) per month by six different airlines (A, B, C, D, E, F). Study the diagram and answer the following questions.

पाई चार्ट छह भिन्न-भिन्न एयरलाइन्स (A, B, C, D, E, F) द्वारा प्रति माह बेचे जाने वाली टिकट (हज़ारों में) दर्शाता है। इस आरेख का अध्ययन करें और निम्नलिखित प्रश्नों का उत्तर दें।



**Which airline sold the second highest number of tickets?**

**Options:**

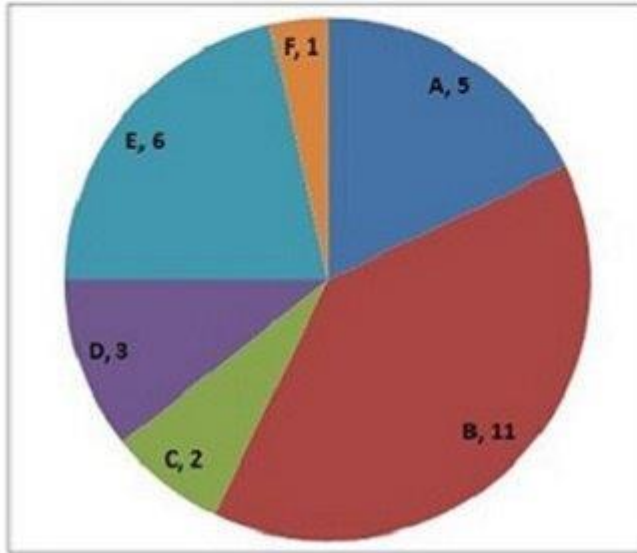
- 1) E
- 2) A
- 3) B
- 4) D

**Correct Answer: E**

**QID : 273 -**

The pie chart shows tickets sold (in 1000s) per month by six different airlines (A, B, C, D, E, F). Study the diagram and answer the following questions.

पाई चार्ट छह भिन्न-भिन्न एयरलाइन्स (A, B, C, D, E, F) द्वारा प्रति माह बेचे जाने वाली टिकट (हज़ारों में) दर्शाता है। इस आरेख का अध्ययन करें और निम्नलिखित प्रश्नों का उत्तर दें।



**Airline E sold how many more tickets than Airline A?**

**Options:**

- 1) 25
- 2) 16
- 3) 20
- 4) 10

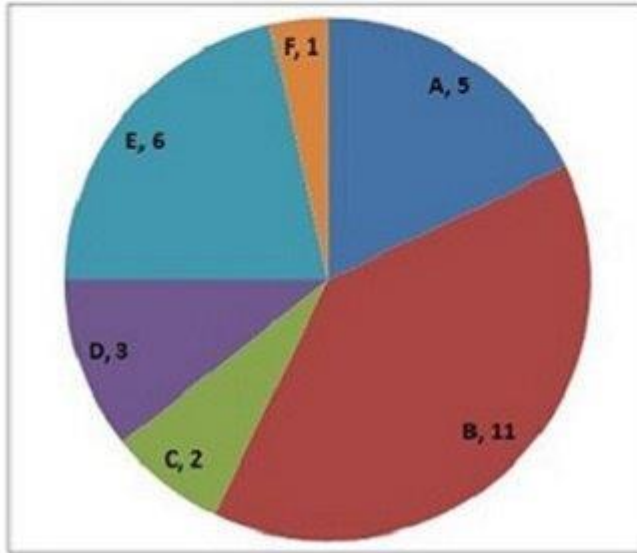
**Correct Answer: 20**



**QID : 274 -**

The pie chart shows tickets sold (in 1000s) per month by six different airlines (A, B, C, D, E, F). Study the diagram and answer the following questions.

पाई चार्ट छह भिन्न-भिन्न एयरलाइन्स (A, B, C, D, E, F) द्वारा प्रति माह बेचे जाने वाली टिकट (हज़ारों में) दर्शाता है। इस आरेख का अध्ययन करें और निम्नलिखित प्रश्नों का उत्तर दें।



The ratio of tickets sold by Airlines A and D to tickets sold by Airline E is?

**Options:**

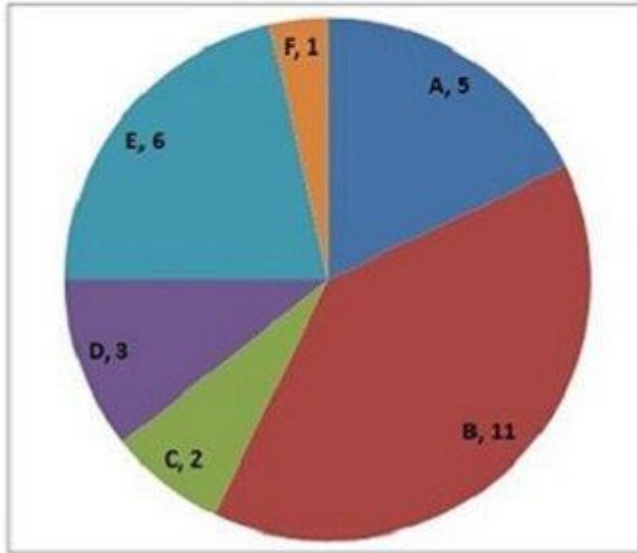
- 1) 3 : 4
- 2) 4 : 3
- 3) 2 : 3
- 4) 4 : 1

**Correct Answer: 4 : 3**

**QID : 275 -**

The pie chart shows tickets sold (in 1000s) per month by six different airlines (A, B, C, D, E, F). Study the diagram and answer the following questions.

पाई चार्ट छह भिन्न-भिन्न एयरलाइन्स (A, B, C, D, E, F) द्वारा प्रति माह बेचे जाने वाली टिकट (हज़ारों में) दर्शाता है। इस आरेख का अध्ययन करें और निम्नलिखित प्रश्नों का उत्तर दें।



If the price of an airline ticket is Rs 7000 then by what amount, monthly Revenue (in Rs. Millions) from sale of tickets of Airline B is greater than that of Airline E?

**Options:**

- 1) 77
- 2) 7
- 3) 35
- 4) 42

**Correct Answer: 35**

**(English Comprehension)**

**QID : 276 -** In the following question, some part of the sentence may have errors. Find out which part of the sentence has an error and select the appropriate option. If a sentence is free from error, select 'No Error'.

She was so (1)/ near to (2)/ achieving her goal. (3)/No Error (4)

**Options:**

- 1) 1
- 2) 2

- 3) 3
- 4) 4

**Correct Answer: 2**

**QID : 277 - In the following question, some part of the sentence may have errors. Find out which part of the sentence has an error and select the appropriate option. If a sentence is free from error, select 'No Error'.**

**He watched as fights (1)/ broke out (2)/ along the city. (3)/No Error (4)**

**Options:**

- 1) 1
- 2) 2
- 3) 3
- 4) 4

**Correct Answer: 3**

**QID : 278 - In the following question, the sentence given with blank to be filled in with an appropriate word. Select the correct alternative out of the four and indicate it by selecting the appropriate option.**

**Everyone was pleased to learn the actor would \_\_\_\_\_ his role as the captivating pirate.**

**Options:**

- 1) reprise
- 2) rescue
- 3) save
- 4) free

**Correct Answer: reprise**

**QID : 279 - In the following question, the sentence given with blank to be filled in with an appropriate word. Select the correct alternative out of the four and indicate it by selecting the appropriate option.**

**The diamond necklace was \_\_\_\_\_ too extravagant for a simple dinner party.**

**Options:**

- 1) distance
- 2) long
- 3) very much
- 4) far

**Correct Answer: far**

**QID : 280 - In the following question, out of the four alternatives, select the word similar in meaning to the word given.**

**Fallacy**

**Options:**

- 1) Conformity
- 2) Surety
- 3) Bias
- 4) Evidence

**Correct Answer: Bias**

**QID : 281 - In the following question, out of the four alternatives, select the word similar in meaning to the word given.**

**To reproach**

**Options:**

- 1) To commend
- 2) To laud
- 3) To exonerate
- 4) To admonish

**Correct Answer: To admonish**

**QID : 282 - In the following question, out of the four alternatives, select the word opposite in meaning to the word given.**

**Veneration**

**Options:**

- 1) Adoration
- 2) Contempt
- 3) Reverence
- 4) Admiration

**Correct Answer: Contempt**

**QID : 283 - In the following question, out of the four alternatives, select the word opposite in meaning to the word given.**

**Impugnable**

**Options:**

- 1) Dickey
- 2) Debatable
- 3) Indubious
- 4) Hazy

**Correct Answer: Indubious**

**QID : 284 - In the following question, out of the four alternatives, select the alternative which best expresses the meaning of the idiom/phrase.**

**To hit the nail on the head**

**Options:**

- 1) To take out frustration by beating a person
- 2) To make a wrong decision
- 3) To find exactly the right answer
- 4) To unwittingly fall into a trap]

**Correct Answer: To find exactly the right answer**

**QID : 285 - In the following question, out of the four alternatives, select the alternative which best expresses the meaning of the idiom/phrase.**

**On thin ice**

**Options:**

- 1) To keep failing after repeated efforts
- 2) To endure a harsh winter
- 3) To keep one's cool even in a tough situation
- 4) In a precarious or risky situation

**Correct Answer: In a precarious or risky situation**

**QID : 286 - In the following question, out of the four alternatives, select the alternative which will improve the bracketed part of the sentence. In case no improvement is needed, select "no improvement".**

**All (was surprising) to find that he was not with them.**

**Options:**

- 1) was surprised
- 2) were surprised
- 3) is surprised
- 4) no improvement

**Correct Answer: were surprised**

**QID : 287 - In the following question, out of the four alternatives, select the alternative which will improve the bracketed part of the sentence. In case no improvement is needed, select "no improvement".**

**Read in order (become) wise.**

**Options:**

- 1) to have to be
- 2) to have become
- 3) to become
- 4) no improvement

**Correct Answer: to become**

**QID : 288 - In the following question, out of the four alternatives, select the alternative which is the best substitute of the words/sentence.**

**Showing strong feeling**

**Options:**

- 1) Meek
- 2) Vehement
- 3) Apathetic
- 4) Impotent

**Correct Answer: Vehement**

**QID : 289 - In the following question, out of the four alternatives, select the alternative which is the best substitute of the words/sentence.**

**A sheath for the blade of a sword**

**Options:**

- 1) Scabbard
- 2) Denude
- 3) Divulge
- 4) Expose

**Correct Answer: Scabbard**

**QID : 290 - In the following question, four words are given out of which one word is correctly spelt. Select the correctly spelt word.**

**Options:**

- 1) Litegants
- 2) Litigents
- 3) Litigants
- 4) Litegents

**Correct Answer: Litigants**

**QID : 291 - In the following question, four words are given out of which one word is correctly spelt. Select the correctly spelt word.**

**Options:**

- 1) Stoically
- 2) Stoicaly
- 3) Stoecally
- 4) Stoecaly

**Correct Answer: Stoically**

**QID : 292 - The question below consists of a set of labelled sentences. Out of the four options given, select the most logical order of the sentences to form a coherent paragraph.**

**The space in front of the large**

X-hut was empty, but  
Y-placed several stools  
Z-before it were

**Options:**

- 1) XYZ
- 2) XZY
- 3) ZYX
- 4) ZXY

**Correct Answer: XZY**

**QID : 293 - The question below consists of a set of labelled sentences. Out of the four options given, select the most logical order of the sentences to form a coherent paragraph.**

**From our common experience**

X-of the relation of the  
Y-mental he starts out  
Z-physical and the

**Options:**

- 1) XYZ
- 2) XZY
- 3) ZYX
- 4) ZXY

**Correct Answer: XZY**

**QID : 294 - In the following question, a sentence has been given in Active/Passive voice. Out of the four alternatives suggested, select the one which best expresses the same sentence in Passive/Active voice.**

**The maid vacuums and dusts the house every day.**

**Options:**

- 1) Every day the house is vacuumed and dusted by the maid.
- 2) Every day the house were vacuumed and dusted by the maid.
- 3) Dusting and Vacuuming of the house every day is being done by the maid.
- 4) Dusting and Vacuuming of the house every day was being done by the maid.

**Correct Answer: Every day the house is vacuumed and dusted by the maid.**

**QID : 295 - In the following question, a sentence has been given in Direct/Indirect speech. Out of the four alternatives suggested, select the one which best expresses the same sentence in Indirect/Direct speech.**

**The spectators said, "Bravo! Good hit, Jay!"**

**Options:**

- 1) The spectators applauded Jay for his good hit.
- 2) The spectators applauded Jay saying, bravo, good hit Jay.
- 3) The spectators applaud Jay for his good hit.
- 4) The spectators applaud Jay saying, bravo, good hit Jay.

**Correct Answer: The spectators applauded Jay for his good hit.**

**QID : 296 - In the following passage, some of the words have been left out. Read the passage carefully and select the correct answer for the given blank out of the four alternatives.**

And then, a few glorious minutes \_\_\_\_\_, it was time to reluctantly head ashore. \_\_\_\_\_ time, the strokes were more fluid, the movements more relaxed. I turned back one last time \_\_\_\_\_ hello to a clown fish, the reason why I came to the Andamans. As I watched, it played hide-and-peek \_\_\_\_\_ a sea anemone, before frisking away. Suddenly, I realised a kinship with the blue waters \_\_\_\_\_ the Bay of Bengal.

**a few glorious minutes \_\_\_\_\_, it was time to reluctantly head ashore.**

**Options:**

- 1) late
- 2) later
- 3) lately
- 4) latest

**Correct Answer: later**

**QID : 297 - In the following passage, some of the words have been left out. Read the passage carefully and select the correct answer for the given blank out of the four alternatives.**

And then, a few glorious minutes \_\_\_\_\_, it was time to reluctantly head ashore. \_\_\_\_\_ time, the strokes were more fluid, the movements more relaxed. I turned back one last time \_\_\_\_\_ hello to a clown fish, the reason why I came to the Andamans. As I watched, it played hide-and-peek \_\_\_\_\_ a sea anemone, before frisking away. Suddenly, I realised a kinship with the blue waters \_\_\_\_\_ the Bay of Bengal.

\_\_\_\_\_ time, the strokes were more fluid

**Options:**

- 1) These
- 2) Those
- 3) At
- 4) This



**Correct Answer: This**

**QID : 298 - In the following passage, some of the words have been left out. Read the passage carefully and select the correct answer for the given blank out of the four alternatives.**

And then, a few glorious minutes \_\_\_\_\_, it was time to reluctantly head ashore. \_\_\_\_\_ time, the strokes were more fluid, the movements more relaxed. I turned back one last time \_\_\_\_\_ hello to a clown fish, the reason why I came to the Andamans. As I watched, it played hide-and-seek \_\_\_\_\_ a sea anemone, before frisking away. Suddenly, I realised a kinship with the blue waters \_\_\_\_\_ the Bay of Bengal.

**I turned back one last time \_\_\_\_\_ hello to a clown fish, the reason**

**Options:**

- 1) to say
- 2) said
- 3) saying
- 4) says

**Correct Answer: to say**

**QID : 299 - In the following passage, some of the words have been left out. Read the passage carefully and select the correct answer for the given blank out of the four alternatives.**

And then, a few glorious minutes \_\_\_\_\_, it was time to reluctantly head ashore. \_\_\_\_\_ time, the strokes were more fluid, the movements more relaxed. I turned back one last time \_\_\_\_\_ hello to a clown fish, the reason why I came to the Andamans. As I watched, it played hide-and-seek \_\_\_\_\_ a sea anemone, before frisking away. Suddenly, I realised a kinship with the blue waters \_\_\_\_\_ the Bay of Bengal.

**hide-and-seek \_\_\_\_\_ a sea anemone, before frisking away.**

**Options:**

- 1) to
- 2) for
- 3) from
- 4) with

**Correct Answer: with**

**QID : 300 - In the following passage, some of the words have been left out. Read the passage carefully and select the correct answer for the given blank out of the four alternatives.**

And then, a few glorious minutes \_\_\_\_\_, it was time to reluctantly head ashore. \_\_\_\_\_ time, the strokes were more fluid, the movements more relaxed. I turned back one last time \_\_\_\_\_ hello to a clown fish, the reason why I came to the Andamans. As I watched, it played hide-and-seek \_\_\_\_\_ a sea anemone, before frisking away. Suddenly, I realised a kinship with the blue waters \_\_\_\_\_ the Bay of Bengal.

**kinship with the blue waters \_\_\_\_\_ the Bay of Bengal.**

**Options:**

- 1) for
- 2) from
- 3) to
- 4) of

**Correct Answer: of**

PACE ACADEMY