

SSC CGL 2017 EXAM PAPER : Held on 17-AUG-2017 Shift-2

(Reasoning)

QID : 101 - Select the related word from the given alternatives.

Office : Colleagues :: Home : ?

Options:

- 1) Rest
- 2) Work
- 3) Friends
- 4) Family

Correct Answer: Family

QID : 102 - Select the related letters from the given alternatives.

XVT : RPN :: LJH : ?

Options:

- 1) FDB
- 2) ECA
- 3) KIG
- 4) QOM

Correct Answer: FDB

QID : 103 - Select the related number from the given alternatives.

0.04 : 0.2 :: 0.09 : ?

Options:

- 1) 0.3
- 2) 0.6
- 3) 0.9
- 4) 2

Correct Answer: 0.3

QID : 104 - Select the odd word from the given alternatives.

Options:

- 1) Chair
- 2) Bench
- 3) Bed
- 4) Sofa

Correct Answer: Bed

QID : 105 - Select the odd letters from the given alternatives.

Options:

- 1) CEG
- 2) UXZ
- 3) ORT
- 4) ILN

Correct Answer: CEG

QID : 106 - Select the odd number from the given alternatives.

Options:

- 1) 75
- 2) 65
- 3) 82
- 4) 85

Correct Answer: 82

QID : 107 - A series is given, with one word missing. Choose the correct alternative from the given ones that will complete the series.

isobar, artist, statute, teapot, otters, ?

Options:

- 1) pencil
- 2) erect
- 3) tongue
- 4) meter

Correct Answer: erect

QID : 108 - A series is given, with one term missing. Choose the correct alternative from the given ones that will complete the series.

XX, XOX, XXXX, XXOXX, XXXXXX, ?

Options:

- 1) XXXOXXXX
- 2) XXXOXXX
- 3) XXXXXXXX
- 4) XXXOXXXO

Correct Answer: XXXOXXX

QID : 109 - A series is given, with one number missing. Choose the correct alternative from the given ones that will complete the series.

3, $5/3$, $1/3$, ? , $-7/3$, $-11/3$

Options:

- 1) $-2/3$
- 2) $-4/3$
- 3) -1
- 4) -2

Correct Answer: -1

QID : 110 - Divit's birthday is on Friday 30th June. On what day of the week will be Samar's Birthday in the same year if Samar was born on 15th November?

Options:

- 1) Tuesday
- 2) Friday
- 3) Wednesday
- 4) Saturday

Correct Answer: Wednesday

QID : 111 - The weights of 4 boxes are 100, 70, 50 and 90 kilograms. Which of the following cannot be the total weight, in kilograms, of any combination of these boxes and in a combination a box can be used only once?

Options:

- 1) 310
- 2) 260
- 3) 230
- 4) 210

Correct Answer: 230

QID : 112 - From the given words, select the word which cannot be formed using the letters of the given word.

RECLINES

Options:

- 1) SINCE
- 2) RELIC
- 3) LINER
- 4) SCARE

Correct Answer: SCARE

QID : 113 - If REGAINS is coded as QDFZHMR, then how will PRY be coded as?

Options:

- 1) BJX
- 2) OQX
- 3) LFT
- 4) PSU

Correct Answer: OQX

QID : 114 - In a certain code language, '+' represents 'x', '-' represents '+', 'x' represents '÷' and '÷' represents '-'. What is the answer to the following question?

$$45 \times 5 + 2 - 20 = ?$$

Options:

- 1) 17
- 2) 81
- 3) 38
- 4) 64

Correct Answer: 38

QID : 115 - If $5@1=60$; $12@8=200$; $16@2=180$; then what is the value of $16@10=?$

Options:

- 1) 32
- 2) 11
- 3) 9
- 4) 260

Correct Answer: 260

QID : 116 -

Select the missing number from the given responses

दिए गए विकल्पों में से लुप्त संख्या चुनिए।

104	?	57
87	78	9
103	78	25

Options:

- 1) 35
- 2) 47
- 3) 54
- 4) 78

Correct Answer: 47

QID : 117 - Two women A and B are shopping in a mall. They start from the same point. A walks 150 m West, then turns to her left and walks 160 m. B walks 140 m East, then turns South and walks 160 m, then turns to her left and walks 120 m. Where is B with respect to A now?

Options:

- 1) 410 m West
- 2) 410 m East
- 3) 170 m East
- 4) 170 m West

Correct Answer: 410 m East

QID : 118 - In the question a statement is given, followed by two arguments, I and II. You have to consider the statement to be true even if it seems to be at variance from commonly known facts. You have to decide which of the given arguments, if any, is a strong argument.

Statement : Should eating paan at public places be made punishable?

Argument I : Yes, people eat pan and spit and makes public places dirty.

Argument II : No, Indians love paan.

Options:

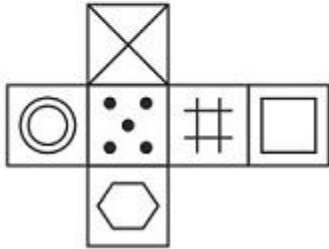
- 1) if only argument I is strong.
- 2) if only argument II is strong.
- 3) if both I and II are strong.
- 4) if neither I nor II is strong.

Correct Answer: if only argument I is strong.

QID : 119 -

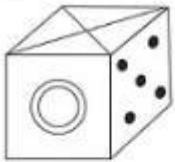
Which of the following cube in the answer figure cannot be made based on the unfolded cube in the question figure?

निम्नलिखित उत्तर आकृति में से कौन सा घन दिए गए प्रश्न आकृति में से खुले घन से बनाया नहीं जा सकता?

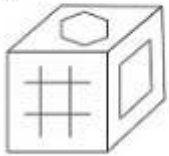


Options:

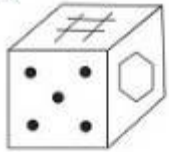
1)



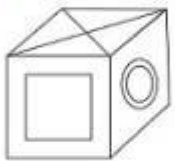
2)



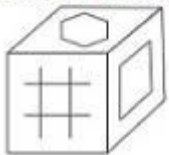
3)



4)



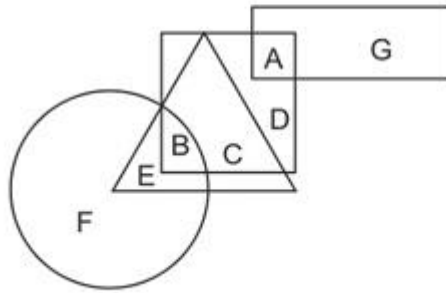
Correct Answer:



QID : 120 -

In the following figure, square represents Optometrists, triangle represents Painters, circle represents Vegetarians and rectangle represents Men. Which set of letters represents painters who are either men or vegetarians?

निम्नलिखित आकृति में, वर्ग दृष्टिमितिज्ञों को दर्शाता है, त्रिभुज चित्रकारों को दर्शाता है, वृत्त शाकाहारीयों को दर्शाता है और आयत पुरुषों को दर्शाता है। अक्षरों का कौन सा समूह चित्रकारों को दर्शाता है जो या तो पुरुष हैं या शाकाहारी हैं?



Options:

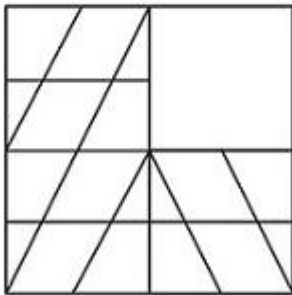
- 1) D,F
- 2) E,B
- 3) H,G,F
- 4) A,C,E

Correct Answer: E,B

QID : 121 -

Which answer figure will complete the pattern in the question figure?

निम्नलिखित में से कौन-सी उत्तर आकृति प्रश्न आकृति के प्रतिरूप को पूरा करेगी?

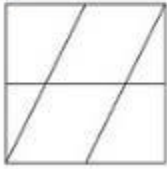


Options:

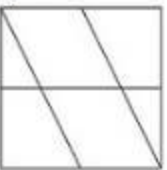
1)




2)



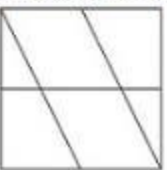
3)



4)



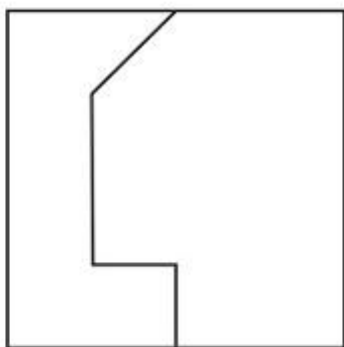
Correct Answer:



QID : 122 -

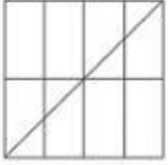
From the given answer figures, select the one in which the question figure is hidden/embedded.

दी गई उत्तर आकृतियों में से उस आकृति को चुनिए जिसमें प्रश्न आकृति निहित है।

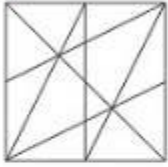


Options:

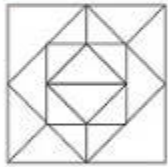
1)



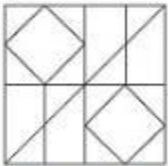
2)



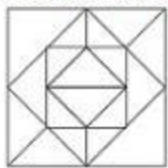
3)



4)



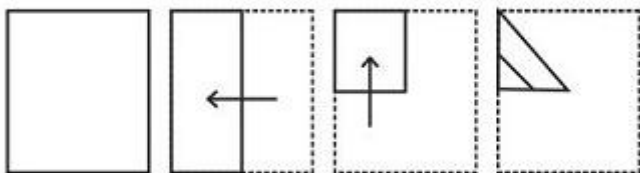
Correct Answer:



QID : 123 -

A piece of paper is folded and punched as shown below in the question figures. From the given answer figures, indicate how it will appear when opened.

प्रश्न आकृतियों में दिखाए अनुसार कागज को मोड़कर उसमें छेद करने तथा खोलने के बाद वह किस उत्तर आकृति जैसा दिखाई देगा?




Options:


1)



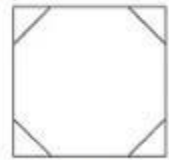
2)




3)



4)



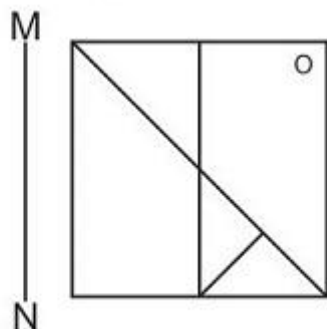
Correct Answer:



QID : 124 -

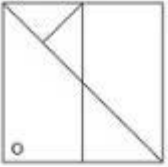
If a mirror is placed on the line MN, then which of the answer figures is the right image of the given figure?

यदि एक दर्पण को MN रेखा पर रखा जाए तो दी गई उत्तर आकृतियों में से कौन-सी आकृति प्रश्न आकृति का सही प्रतिबिम्ब होगी?

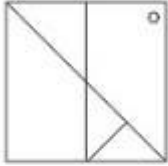


Options:

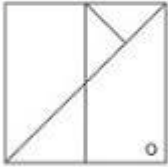
1)



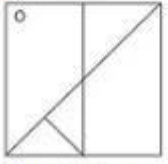
2)



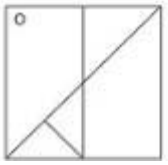
3)



4)



Correct Answer:



PACE ACADEMY

QID : 125 -

A word is represented by only one set of numbers as given in any one of the alternatives. The sets of numbers given in the alternatives are represented by two classes of alphabets as shown in the given two matrices. The columns and rows of Matrix-I are numbered from 0 to 4 and that of Matrix-II are numbered from 5 to 9. A letter from these matrices can be represented first by its row and next by its column, for example 'K' can be represented by 42, 34 etc and 'Z' can be represented by 96, 79 etc. Similarly, you have to identify the set for the word 'ROAD'.

एक शब्द केवल एक संख्या-समूह द्वारा दर्शाया गया है, जैसा कि विकल्पों में से किसी एक में दिया गया है। विकल्पों में दिए गए संख्या-समूह अक्षरों के दो वर्गों द्वारा दर्शाए गए हैं, जैसा कि दिए गए दो आव्यूहों में है। आव्यूह-I के स्तम्भ और पंक्ति की संख्या 0 से 4 और आव्यूह-II की 5 से 9 है। इन आव्यूहों से एक अक्षर को पहले उसकी पंक्ति और बाद में स्तम्भ संख्या द्वारा दर्शाया जा सकता है। उदाहरण के लिए 'K' को 42, 34 आदि द्वारा दर्शाया जा सकता है तथा 'Z' को 96, 79 आदि द्वारा दर्शाया जा सकता है। इसी तरह से आपको प्रश्न में दिए शब्द 'ROAD' के लिए समूह को पहचानना है।

Matrix I आव्यूह - I					
	0	1	2	3	4
0	L	K	A	F	H
1	K	I	I	C	D
2	J	E	E	E	F
3	M	I	A	E	K
4	M	B	K	C	G

Matrix II आव्यूह - II					
	5	6	7	8	9
5	Q	S	R	U	Z
6	S	R	O	V	T
7	O	U	V	S	Z
8	V	Y	T	Y	S
9	Y	Z	O	U	V

Options:

- 1) 24,14,67,76
- 2) 30,22,86,56
- 3) 66,67,02,14
- 4) 13,43,56,86

Correct Answer: 66,67,02,14

(General Awareness)

QID : 126 - The _____ exchange rate is the relative price of foreign goods in terms of domestic goods.

Options:

- 1) Artificial
- 2) Nominal
- 3) Fixed
- 4) Real

Correct Answer: Real

QID : 127 - _____ is an alternative way of representing the production function.

Options:

- 1) The Short Run
- 2) The Long Run
- 3) Isoquant
- 4) Average product

Correct Answer: Isoquant

QID : 128 - "United Nations Organization" is listed in the _____ list given in the Seventh Schedule in the Constitution of India.

Options:

- 1) Union
- 2) State
- 3) Global
- 4) Concurrent

Correct Answer: Union

QID : 129 - There are total _____ parliamentary seats (Rajya Sabha constituency) in Punjab.

Options:

- 1) 7
- 2) 1
- 3) 18
- 4) 10

Correct Answer: 7

QID : 130 - Big landlords or warrior chiefs in the seventh century were acknowledged as _____ by the existing kings?

Options:

- 1) Rashtrakutas
- 2) Chalukya
- 3) Samantas
- 4) Brahmanas

Correct Answer: Samantas

QID : 131 - The Agra fort was built by _____.

Options:

- 1) Shah Jahan
- 2) Akbar
- 3) Jahangir
- 4) Babur

Correct Answer: Akbar

QID : 132 - How many states does India have as of June 2017?

Options:

- 1) 26
- 2) 27
- 3) 28
- 4) 29

Correct Answer: 29

QID : 133 - The northern plain of India has been formed by the interplay of the three major river systems, namely– the Indus, the Ganga and the _____.

Options:

- 1) Brahmaputra
- 2) Krishna
- 3) Kaveri
- 4) Mahanadi

Correct Answer: Brahmaputra

QID : 134 - In the names *Mangifera indica* (mango), *Solanum tuberosum* (potato) and *Panthera leo* (lion), what does the three names, *indica*, *tuberosum* and *leo*, represent?

Options:

- 1) Binomial Nomenclature
- 2) Taxonomic Hierarchy
- 3) Identification
- 4) Specific Epithet

Correct Answer: Specific Epithet

QID : 135 - _____ are chlorophyll-bearing, simple, thalloid, autotrophic and largely aquatic (both fresh water and marine) organisms.

Options:

- 1) Pteridophytes
- 2) Bryophytes
- 3) Algae
- 4) Gymnosperms

Correct Answer: Algae

QID : 136 - Animals like annelids and arthropods etc where the body can be divided into identical left and right halves in only one plane, exhibit _____ symmetry.

Options:

- 1) Coelenterata
- 2) Radial
- 3) Ctenophora
- 4) Bilateral

Correct Answer: Bilateral

QID : 137 - If the orbit of a planet is an ellipse then what is the point at which the Sun is located called?

Options:

- 1) Centre
- 2) Circumcentre
- 3) Incentre
- 4) Focus

Correct Answer: Focus

QID : 138 - The sliding friction is _____ than the static friction.

Options:

- 1) double
- 2) same
- 3) greater
- 4) smaller

Correct Answer: smaller

QID : 139 - _____ optical data storage is a technology where data is stored in multiple layers in the optical disc.

Options:

- 1) 3D
- 2) 30D
- 3) 300D
- 4) 3000D

Correct Answer: 3D

QID : 140 - Kelvin (K) is the unit of measurement of _____.

Options:

- 1) Density
- 2) Pressure
- 3) Mass
- 4) Temperature

Correct Answer: Temperature

QID : 141 - What is the process of rust forming on iron called?

Options:

- 1) Rusting
- 2) Crystallisation
- 3) Shovel
- 4) Spade

Correct Answer: Rusting

QID : 142 - _____ acts as a shield absorbing ultraviolet radiation from the sun.

Options:

- 1) Chlorofluorocarbons
- 2) Stratosphere
- 3) Ozone hole
- 4) Greenhouse

Correct Answer: Stratosphere

QID : 143 - _____ scheme launched by the Central Government aims to spur social, economic and infrastructure development in rural areas by developing a cluster of 300 Smart Villages.

Options:

- 1) Soil Health Card
- 2) Shyama Prasad Mukherji Rurban Mission
- 3) Pradhan Mantri Fasal Bima Yojana
- 4) Pradhanmantri rojgar yojna

Correct Answer: Shyama Prasad Mukherji Rurban Mission

QID : 144 - Who invented the electrocardiogram (ECG)?

Options:

- 1) Willem Einthoven
- 2) Edward Jenner
- 3) Antonio de Ulloa and Charles Wood
- 4) Karl Benz

Correct Answer: Willem Einthoven

QID : 145 - Who is the winner of 2017 Formula One Chinese Grand Prix?

Options:

- 1) Sebastian Vettel
- 2) Lewis Hamilton

- 3) Valtteri Bottas
- 4) Kimi Raikkonen

Correct Answer: Lewis Hamilton

QID : 146 - In which city of India is Charminar located?

Options:

- 1) Pune
- 2) Delhi
- 3) Aurangabad
- 4) Hyderabad

Correct Answer: Hyderabad

QID : 147 - Which of the following was the winner of the Grammy Awards 2016 "Record of the Year"?

Options:

- 1) Uptown Funk
- 2) Really Love
- 3) Thinking Out Loud
- 4) Blank Space

Correct Answer: Uptown Funk

QID : 148 - 1. The author of the novel 'Darkness at Noon' is Victor LaValle.

2. The author of the novel 'The Great Gatsby' is F. Scott Fitzgerald.
3. The author of the novel 'The Sound and the Fury' is L. Ron Hubbard.

Which of the statements given above are not correct?

Options:

- 1) 1 and 2
- 2) 2 and 3
- 3) 1 and 3
- 4) 1, 2 and 3

Correct Answer: 1 and 3

QID : 149 - What was Norway's rank in 2016 Human Development Index published by the United Nations Development Programme?

Options:

- 1) 1
- 2) 10
- 3) 100
- 4) 200

Correct Answer: 1

QID : 150 - Which country is not a member of Bay of Bengal Initiative for Multi-Sectoral Technical and Economic Cooperation (BIMSTEC)?

Options:

- 1) Thailand
- 2) Myanmar
- 3) India
- 4) Pakistan

Correct Answer: Pakistan

(Mathematics)

QID : 151 - What is the value of 9991×10009 ?

Options:

- 1) 99999099
- 2) 99999819
- 3) 99999919
- 4) 99999019

Correct Answer: 99999919

QID : 152 - A can do $\frac{1}{3}$ rd of a job in 3 days and B can do half of the job in 9 days. If they work on it together, then in how many days can they finish half of the job?

Options:

- 1) 4
- 2) 5
- 3) 6
- 4) 3

Correct Answer: 3

QID : 153 - What is the area (in sq cm) of a rhombus if the lengths of its diagonals are 25 cm and 20 cm?

Options:

- 1) 500
- 2) 250
- 3) 125
- 4) 200

Correct Answer: 250

QID : 154 - If a shopkeeper sells an item at Rs 4200 which is marked as Rs 4800, then what is the discount (in %) that he is offering?

Options:

- 1) 12.5
- 2) 14.28
- 3) 10
- 4) 15

Correct Answer: 12.5

QID : 155 - The flight fare between two cities is increased in the ratio 11:13. What is the increase (in Rs) in the fare, if the original fare was Rs 12100?

Options:

- 1) 14300
- 2) 2200
- 3) 22000
- 4) 1430

Correct Answer: 2200

QID : 156 - 3 numbers whose average is 112, the first number is $\frac{1}{6}$ th the sum of other 2. What is the first number?

Options:

- 1) 45
- 2) 30
- 3) 15
- 4) 48

Correct Answer: 48

QID : 157 - A trader buys 800 kgs of tomatoes for Rs 7200. 10% tomatoes are damaged in transportaion. At what rate (Rs/Kg) should he sell the rest to earn 30% profit?

Options:

- 1) 9
- 2) 13
- 3) 10
- 4) 12

Correct Answer: 13

QID : 158 - A student has to secure 35% marks to pass in a subject. If he gets 82 and fails by 23 marks. What is the maximum marks of the subject?

Options:

- 1) 300
- 2) 250

- 3) 350
- 4) 400

Correct Answer: 300

QID : 159 - A spaceship travels at 810 km/hr. How many metres does it travel in 1/5th of a second?

Options:

- 1) 60
- 2) 45
- 3) 75
- 4) 90

Correct Answer: 45

QID : 160 - If the amount received at the end of 2nd and 3rd year as Compound Interest on a certain Principal is Rs 2100, and Rs 2268 respectively, what is the rate (in %) of interest?

Options:

- 1) 7
- 2) 8
- 3) 9
- 4) 10

Correct Answer: 8

QID : 161 - If $5x - (1/2)(2x - 7) = 5.5$, then what is the value of x?

Options:

- 1) 3/2
- 2) 1/2
- 3) -1/2
- 4) -3/2

Correct Answer: 1/2

QID : 162 - If $a + b = 4$ and $ab = -5$, then what is the value of $a^3 + b^3$?

Options:

- 1) 34
- 2) 36
- 3) 124
- 4) 126

Correct Answer: 124

QID : 163 - The sum of a number and 4 times its reciprocal is 5. What is the number?

Options:

- 1) 4
- 2) 5
- 3) 6
- 4) 7

Correct Answer: 4

QID : 164 - The 3rd and 8th term of an arithmetic progression are -13 and 2 respectively. What is the 14th term?

Options:

- 1) 23
- 2) 17
- 3) 20
- 4) 26

Correct Answer: 20

QID : 165 - What is the reflection of the point (4 , -3) in the line $y = 1$?

Options:

- 1) (4, -5)
- 2) (4, 5)
- 3) (-4, -5)
- 4) (-4, 5)

Correct Answer: (4, 5)

QID : 166 - In what ratio does the point T(x, 0) divide the segment joining the points S(5, 1) and U(-1, -2)?

Options:

- 1) 2 : 1
- 2) 1 : 2
- 3) 3 : 1
- 4) 2 : 3

Correct Answer: 1 : 2

QID : 167 - At what point does the line $3x + 2y = 12$ cuts the Y-axis?

Options:

- 1) (0, 6)
- 2) (0, -6)
- 3) (6, 0)
- 4) (-6, 0)

Correct Answer: (0, 6)

QID : 168 - The areas of two similar triangles $\triangle ABC$ and $\triangle PQR$ are 121 sq cms and 64 sq cms respectively. If $PQ = 12$ cm, what is the length (in cm) of AB ?

Options:

- 1) 7.25
- 2) 6.25
- 3) 16.5
- 4) 5.25

Correct Answer: 16.5

QID : 169 - What is the value of $\tan 60^\circ + \operatorname{cosec} 60^\circ$?

Options:

- 1) $\frac{5}{3}$
- 2) $\frac{2}{\sqrt{3}}$
- 3) $\frac{5}{\sqrt{3}}$
- 4) $\frac{2}{3}$

Correct Answer: $\frac{5}{\sqrt{3}}$

QID : 170 - $\triangle XYZ$ is right angled at Y . If $m\angle Z = 60^\circ$, then what is the value of $(\frac{1}{\sqrt{2}}) \sec X$?

Options:

- 1) $\frac{2}{\sqrt{3}}$
- 2) $\frac{1}{\sqrt{6}}$
- 3) $\frac{1}{\sqrt{3}}$
- 4) $\frac{2}{\sqrt{6}}$

Correct Answer: $\frac{2}{\sqrt{6}}$

QID : 171 - If $\operatorname{cosec} \theta = \frac{17}{8}$, then what is the value of $\cos \theta$?

Options:

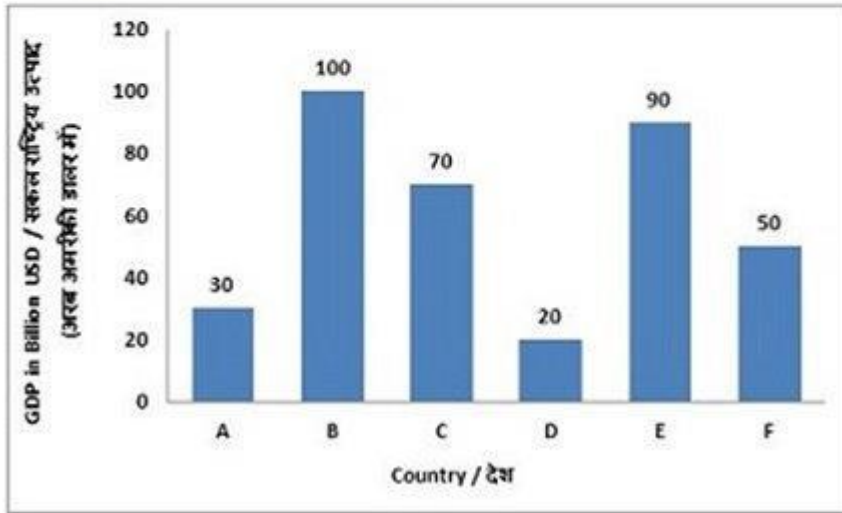
- 1) $\frac{15}{8}$
- 2) $\frac{15}{17}$
- 3) $\frac{8}{15}$
- 4) $\frac{17}{15}$

Correct Answer: $\frac{15}{17}$

QID : 172 -

The bar graph shows GDP for the year 2016 in billion USD of six countries (A, B, C, D, E, F) of a regional trade block. Study the diagram and answer the following questions.

बार ग्राफ वर्ष 2016 में एक क्षेत्रीय व्यावसायिक ब्लॉक के छह देशों (A, B, C, D, E, F) का सकल राष्ट्रीय उत्पाद (अरब अमरीकी डालर में) दर्शाता है। इस आरेख का अध्ययन करें और निम्नलिखित प्रश्नों का उत्तर दें।



Which country is the third biggest in terms of Gross Domestic Product (GDP)?

Options:

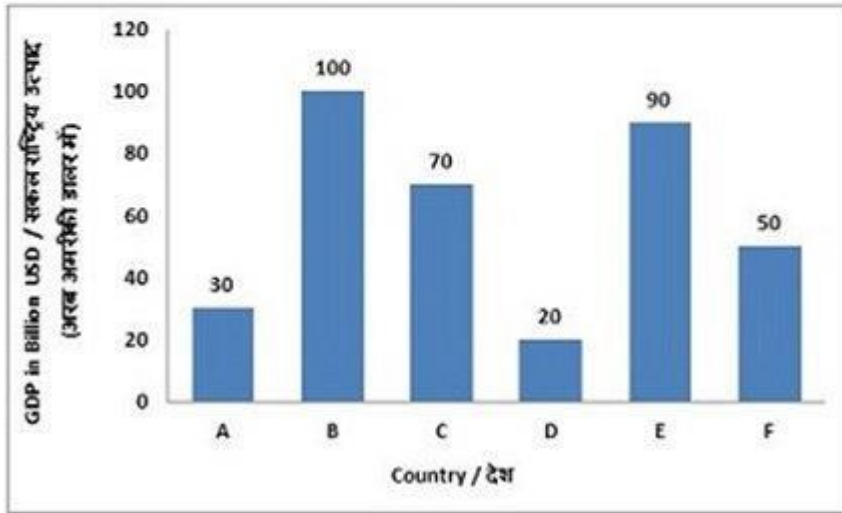
- 1) A
- 2) C
- 3) E
- 4) F

Correct Answer: C

QID : 173 -

The bar graph shows GDP for the year 2016 in billion USD of six countries (A, B, C, D, E, F) of a regional trade block. Study the diagram and answer the following questions.

बार ग्राफ वर्ष 2016 में एक क्षेत्रीय व्यावसायिक ब्लॉक के छह देशों (A, B, C, D, E, F) का सकल राष्ट्रीय उत्पाद (अरब अमरीकी डालर में) दर्शाता है। इस आरेख का अध्ययन करें और निम्नलिखित प्रश्नों का उत्तर दें।



By what amount (in billion USD) is the Gross Domestic Product (GDP) of Country A lesser than that of Country F?

Options:

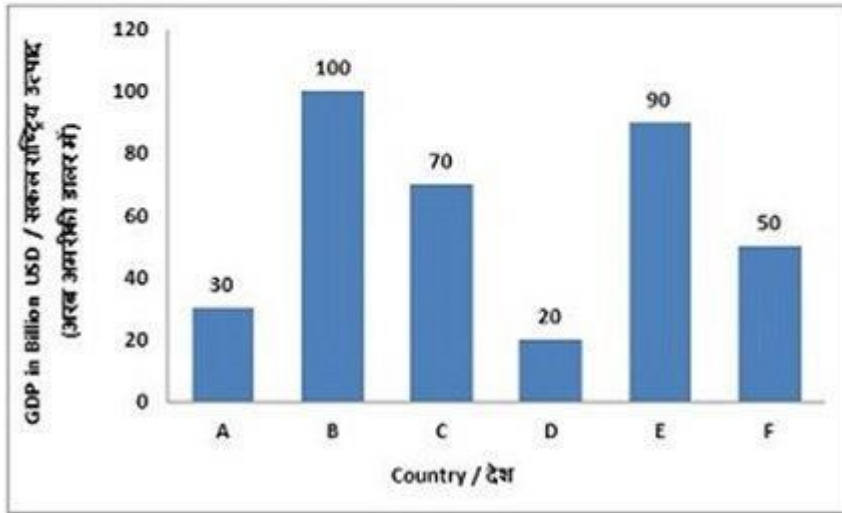
- 1) 20
- 2) 50
- 3) 25
- 4) 40

Correct Answer: 40

QID : 174 -

The bar graph shows GDP for the year 2016 in billion USD of six countries (A, B, C, D, E, F) of a regional trade block. Study the diagram and answer the following questions.

बार ग्राफ वर्ष 2016 में एक क्षेत्रीय व्यावसायिक ब्लॉक के छह देशों (A, B, C, D, E, F) का सकल राष्ट्रीय उत्पाद (अरब अमरीकी डालर में) दर्शाता है। इस आरेख का अध्ययन करें और निम्नलिखित प्रश्नों का उत्तर दें।



What is the ratio of Gross Domestic Product (GDP) of Country E to Total of GDPs of countries A, C and F taken together?

Options:

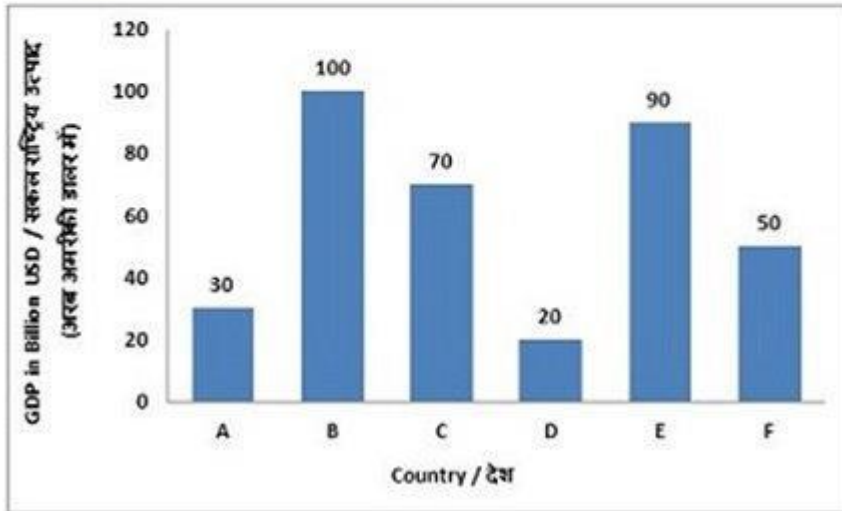
- 1) 3 : 5
- 2) 5 : 3
- 3) 9 : 5
- 4) 5 : 9

Correct Answer: 3 : 5

QID : 175 -

The bar graph shows GDP for the year 2016 in billion USD of six countries (A, B, C, D, E, F) of a regional trade block. Study the diagram and answer the following questions.

बार ग्राफ वर्ष 2016 में एक क्षेत्रीय व्यावसायिक ब्लॉक के छह देशों (A, B, C, D, E, F) का सकल राष्ट्रीय उत्पाद (अरब अमरीकी डालर में) दर्शाता है। इस आरेख का अध्ययन करें और निम्नलिखित प्रश्नों का उत्तर दें।



If the combined GDP of the six countries has grown by 50% in the last decade, then what was their combined annual Gross Domestic Product (in billion USD) before 10 years?

Options:

- 1) 540
- 2) 180
- 3) 240
- 4) 200

Correct Answer: 240

(English Comprehension)

QID : 176 - In the following question, some part of the sentence may have errors. Find out which part of the sentence has an error and select the appropriate option. If a sentence is free from error, select 'No Error'.

Water was dripping (1)/ of the trees, and (2)/ the grass was wet. (3)/No Error (4)

Options:

- 1) 1
- 2) 2
- 3) 3
- 4) 4

Correct Answer: 2

QID : 177 - In the following question, some part of the sentence may have errors. Find out which part of the sentence has an error and select the appropriate option. If a sentence is free from error, select 'No Error'.

Pravin sat up on the (1)/ sofa, with his legs (2)/ tucked down him. (3)/No Error (4)

Options:

- 1) 1
- 2) 2
- 3) 3
- 4) 4

Correct Answer: 3

QID : 178 - In the following question, the sentence given with blank to be filled in with an appropriate word. Select the correct alternative out of the four and indicate it by selecting the appropriate option.

At night, the hungry orphan would sneak into the kitchen and _____ tiny amounts of food

Options:

- 1) prefer
- 2) lifter
- 3) differ
- 4) pilfer

Correct Answer: pilfer

QID : 179 - In the following question, the sentence given with blank to be filled in with an appropriate word. Select the correct alternative out of the four and indicate it by selecting the appropriate option.

As the only _____ person in the wacky family, the sensible girl felt like the odd woman out.

Options:

- 1) insane
- 2) vain
- 3) sane
- 4) main

Correct Answer: sane

QID : 180 - In the following question, out of the four alternatives, select the word similar in meaning to the word given.

Piquancy

Options:

- 1) Bland
- 2) Flavouring

- 3) Insipid
- 4) Tedious

Correct Answer: Flavouring

QID : 181 - In the following question, out of the four alternatives, select the word similar in meaning to the word given.

To Confront

Options:

- 1) To Avoid
- 2) To Dodge
- 3) To Yield
- 4) To Accost

Correct Answer: To Accost

QID : 182 - In the following question, out of the four alternatives, select the word opposite in meaning to the word given.

Savant

Options:

- 1) Amateur
- 2) Academic
- 3) Pundit
- 4) Egghead

Correct Answer: Amateur

QID : 183 - In the following question, out of the four alternatives, select the word opposite in meaning to the word given.

To Indict

Options:

- 1) To Arraign
- 2) To Censure
- 3) To Exonerate
- 4) To Impeach

Correct Answer: To Exonerate

QID : 184 - In the following question, out of the four alternatives, select the alternative which best expresses the meaning of the idiom/phrase.

To Have bitten off more than you can chew

Options:

- 1) To eat voraciously and then fall sick
- 2) To behave disrespectfully towards elders and then repent the act
- 3) To have tried to do something which is too difficult
- 4) To have missed a golden opportunity and after that willing to put twice the effort to recover the loss

Correct Answer: To have tried to do something which is too difficult

QID : 185 - In the following question, out of the four alternatives, select the alternative which best expresses the meaning of the idiom/phrase.

Out of print

Options:

- 1) Not able to print due to being short on paper
- 2) A book no longer available from the publisher
- 3) Intentionally not mention some items in the article or book
- 4) All publishers refuse to publish your book

Correct Answer: A book no longer available from the publisher

QID : 186 - In the following question, out of the four alternatives, select the alternative which will improve the bracketed part of the sentence. In case no improvement is needed, select "no improvement".

I'm (having to) too much fun.

Options:

- 1) having
- 2) had
- 3) has
- 4) no improvement

Correct Answer: having

QID : 187 - In the following question, out of the four alternatives, select the alternative which will improve the bracketed part of the sentence. In case no improvement is needed, select "no improvement".

What would the cavalry (doing) out here?

Options:

- 1) be doing
- 2) be done
- 3) done
- 4) no improvement

Correct Answer: be doing

QID : 188 - In the following question, out of the four alternatives, select the alternative which is the best substitute of the words/sentence.

In exactly the same words as were used originally

Options:

- 1) Verbatim
- 2) Offbeat
- 3) Divergent
- 4) Contrary

Correct Answer: Verbatim

QID : 189 - In the following question, out of the four alternatives, select the alternative which is the best substitute of the words/sentence.

A person inclined to question or doubt accepted opinions

Options:

- 1) Adherent
- 2) Sceptic
- 3) Zealot
- 4) Disciple

Correct Answer: Sceptic

QID : 190 - In the following question, four words are given out of which one word is correctly spelt. Select the correctly spelt word.

Options:

- 1) Ditheering
- 2) Dethering
- 3) Dithering
- 4) Detheering

Correct Answer: Dithering

QID : 191 - In the following question, four words are given out of which one word is correctly spelt. Select the correctly spelt word.

Options:

- 1) Throtled
- 2) Throttlede
- 3) Throtlede
- 4) Throttled

Correct Answer: Throttled

QID : 192 - The question below consists of a set of labelled sentences. Out of the four options given, select the most logical order of the sentences to form a coherent paragraph.

Children are sensitive

X-to what happens around them and are
Y-enthusiastic about working on
Z-plays that reflect their lives

Options:

- 1) ZYX
- 2) XYZ
- 3) ZXY
- 4) YZX

Correct Answer: XYZ

QID : 193 - The question below consists of a set of labelled sentences. Out of the four options given, select the most logical order of the sentences to form a coherent paragraph.

But this does not mean

X-phenomena to the body
Y-is a meaningless expression
Z-that the reference of mental

Options:

- 1) YZX
- 2) ZXY
- 3) YXZ
- 4) XZY

Correct Answer: ZXY

QID : 194 - In the following question, a sentence has been given in Active/Passive voice. Out of the four alternatives suggested, select the one which best expresses the same sentence in Passive/Active voice.

The travel agent is making all the reservations.

Options:

- 1) All the reservations is made by the travel agent.
- 2) All the reserving will be made by the travel agent.
- 3) All the reservations are being made by the travel agent.
- 4) All the reserving is made by the travel agent.

Correct Answer: All the reservations are being made by the travel agent.

QID : 195 - In the following question, a sentence has been given in Direct/Indirect speech. Out of the four alternatives suggested, select the one which best expresses the same sentence in Indirect/Direct speech.

He said to the dentist, "I have a toothache."

Options:

- 1) He told the dentist that I have a toothache.
- 2) He told the dentist that he had gotten a toothache.
- 3) He told the dentist that he had a toothache.
- 4) He told the dentist that I have a gotten toothache.

Correct Answer: He told the dentist that he had a toothache.

QID : 196 - In the following passage, some of the words have been left out. Read the passage carefully and select the correct answer for the given blank out of the four alternatives.

The Trikonasana, or triangle pose, stimulates the function of the entire body and _____ a lateral (side) stretch to the spine. It helps reduce blood pressure, stress, and anxiety. Practise this asana every day and you'll _____ strength in the ankles, thighs, knees, hips, calves and hamstrings. All standing poses _____ the cardiovascular system, so the more you do it, the _____ your stamina will become. The aim is never to overdo it, but to engage regularly, _____ that you get stronger and more stable over time.

function of the entire body and _____ a lateral (side) stretch

Options:

- 1) given
- 2) gave
- 3) to give
- 4) gives

Correct Answer: gives

QID : 197 - In the following passage, some of the words have been left out. Read the passage carefully and select the correct answer for the given blank out of the four alternatives.

The Trikonasana, or triangle pose, stimulates the function of the entire body and _____ a lateral (side) stretch to the spine. It helps reduce blood pressure, stress, and anxiety. Practise this asana every day and you'll _____ strength in the ankles, thighs, knees, hips, calves and hamstrings. All standing poses _____ the cardiovascular system, so the more you do it, the _____ your stamina will become. The aim is never to overdo it, but to engage regularly, _____ that you get stronger and more stable over time.

you'll _____ strength in the ankles, thighs, knees, hips

Options:

- 1) gaining
- 2) gain
- 3) gained
- 4) to gain

Correct Answer: gain

QID : 198 - In the following passage, some of the words have been left out. Read the passage carefully and select the correct answer for the given blank out of the four alternatives.

The Trikonasana, or triangle pose, stimulates the function of the entire body and _____ a lateral (side) stretch to the spine. It helps reduce blood pressure, stress, and anxiety. Practise this asana every day and you'll _____ strength in the ankles, thighs, knees, hips, calves and hamstrings. All standing poses _____ the cardiovascular system, so the more you do it, the _____ your stamina will become. The aim is never to overdo it, but to engage regularly, _____ that you get stronger and more stable over time.

All standing poses _____ the cardiovascular system

Options:

- 1) built
- 2) build
- 3) building
- 4) to build

Correct Answer: build

QID : 199 - In the following passage, some of the words have been left out. Read the passage carefully and select the correct answer for the given blank out of the four alternatives.

The Trikonasana, or triangle pose, stimulates the function of the entire body and _____ a lateral (side) stretch to the spine. It helps reduce blood pressure, stress, and anxiety. Practise this asana every day and you'll _____ strength in the ankles, thighs, knees, hips, calves and hamstrings. All standing poses _____ the cardiovascular system, so the more you do it, the _____ your stamina will become. The aim is never to overdo it, but to engage regularly, _____ that you get stronger and more stable over time.

so the more you do it, the _____ your stamina.

Options:

- 1) best
- 2) better
- 3) good
- 4) too good

Correct Answer: better

QID : 200 - In the following passage, some of the words have been left out. Read the passage carefully and select the correct answer for the given blank out of the four alternatives.

The Trikonasana, or triangle pose, stimulates the function of the entire body and _____ a lateral (side) stretch to the spine. It helps reduce blood pressure, stress, and anxiety. Practise this asana every day and you'll _____ strength in the ankles, thighs, knees, hips, calves and hamstrings. All standing poses _____ the cardiovascular system, so the more you do it, the _____ your stamina will become. The aim is never to overdo it, but to engage regularly, _____ that you get stronger and more stable over time.

to engage regularly, _____ that you get stronger and more stable

Options:

- 1) if
- 2) of
- 3) so
- 4) to

Correct Answer: so

PACE ACADEMY