

SSC CGL 2017 EXAM PAPER : Held on 16-AUG-2017 Shift-2

(Reasoning)

QID : 101 - In the following question, select the related word from the given alternatives.

Banana : Fruit :: Ginger : ?

Options:

- 1) Root
- 2) Fruit
- 3) Flower
- 4) Stem

Correct Answer: Stem

QID : 102 - In the following question, select the related letters from the given alternatives.

JPSW : LQUX :: MRFT : ?

Options:

- 1) OTVG
- 2) OGTU
- 3) OSHU
- 4) OPQR

Correct Answer: OSHU

QID : 103 - In the following question, select the related number from the given alternatives.

65 : 82 :: 145 : ?

Options:

- 1) 165
- 2) 168
- 3) 169
- 4) 170

Correct Answer: 170

QID : 104 - In the following question, select the odd word from the given alternatives.

Options:

- 1) Trees
- 2) Leaves
- 3) Flower
- 4) Stem

Correct Answer: Trees

QID : 105 - In the following question, select the odd letters from the given alternatives.

Options:

- 1) CEF
- 2) LNO
- 3) RTU
- 4) GIK

Correct Answer: GIK

QID : 106 - In the following question, select the odd number pair from the given alternatives.

Options:

- 1) 49 – 64
- 2) 576 – 729
- 3) 441 – 484
- 4) 100 – 121

Correct Answer: 576 – 729

QID : 107 - Arrange the given words in the sequence in which they occur in the dictionary.

1. Waste
2. Wrong
3. Witty
4. Worcester
5. Warlike

Options:

- 1) 51324
- 2) 13452
- 3) 51342
- 4) 15342

Correct Answer: 51342

QID : 108 - A series is given with one term missing. Select the correct alternative from the given ones that will complete the series.

A, C, F, H, K, ?

Options:

- 1) M
- 2) N
- 3) L
- 4) O

Correct Answer: M

QID : 109 - In the following question, select the missing number from the given series.

1, 3, 6, 10, 15, ?

Options:

- 1) 20
- 2) 21
- 3) 22
- 4) 24

Correct Answer: 21

QID : 110 - In a row of people Manu is 7th from bottom end of row. Shrey is 10 ranks above Manu. If Shrey is 8th from top end, then how many people are there in this row?

Options:

- 1) 25
- 2) 26
- 3) 24
- 4) 23

Correct Answer: 24

QID : 111 - Seven years ago, the age of Sahil was equal to the present age of Nihal. Sum of Sahil's age 5 year ago and Nihal's age 6 years later is 58 years. If Ruchi is 4 years elder to Sahil, then what will be Ruchi's age (in years) after 10 years?

Options:

- 1) 38
- 2) 46
- 3) 42
- 4) 36

Correct Answer: 46

QID : 112 - In the following question, from the given alternative words, select the word which cannot be formed using the letters of the given word.

Representation

Options:

- 1) Paint
- 2) Senator
- 3) Trees
- 4) Strict

Correct Answer: Strict

QID : 113 - In a certain code language, "TROUPE" is written as "GILFKV" and "ERUPTION" is written as "VIFKGRLM". How is "GENIUS" written in that code language?

Options:

- 1) TVMRFH
- 2) TVMRGH
- 3) VIKRGH
- 4) TUVHRH

Correct Answer: TVMRFH

QID : 114 - If " α " denotes "subtracted from", " β " denotes "multiplied by", " θ " denotes "added to" and " δ " denotes "divided by", then

$$10 \theta 8 \beta 4 \delta 8 \alpha 9 = ?$$

Options:

- 1) 7
- 2) 5
- 3) 9
- 4) 11

Correct Answer: 5

QID : 115 - If $9^2 A 4^2 B 3^2 = 56$ and $7^2 A 2^2 B 1^2 = 44$, then

$$11^2 A 5^2 B 7^2 = ?$$

Options:

- 1) 29
- 2) 32
- 3) 47
- 4) 24

Correct Answer: 47

QID : 116 -

In the following question, select the number which can be placed at the sign of question mark (?) from the given alternatives.

निम्नलिखित प्रश्न में दिए गए विकल्पों में से प्रश्न चिन्ह (?) के स्थान पर आने वाली संख्या को चुनिए।

1	7	6	56
1	4	8	45
2	3	6	?

Options:

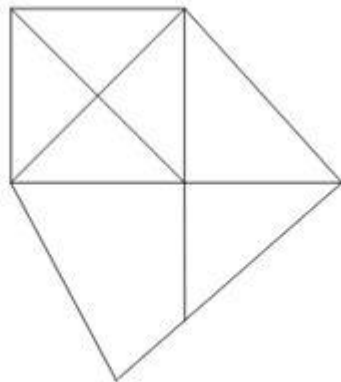
- 1) 32
- 2) 35
- 3) 46
- 4) 47

Correct Answer: 47

QID : 117 -

How many quadrilaterals are there in the given figure?

दी गई आकृति में कितने चतुर्भुज हैं?



Options:

- 1) 3
- 2) 4
- 3) 7
- 4) 6

Correct Answer: 7

QID : 118 - In each of the following question below are given some statements followed by some conclusions. Taking the given statements to be true even if they seem to be at variance from commonly known facts, read all the conclusions and then decide which of the given conclusion logically follows the given statements.

Statements:

- I. Some girls are clever.
- II. All clever are hardworking.

Conclusions:

- I. Some girls are not hardworking.
- II. Some girls are hardworking.
- III. Some hardworking are not girls.

Options:

- 1) Only conclusion (I) and (II) follow.
- 2) Only conclusion (II) follows.
- 3) Only conclusion (I) and (III) follow.
- 4) All conclusions follow.

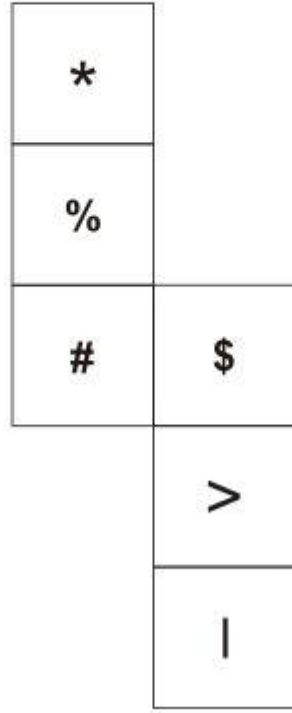
Correct Answer: Only conclusion (II) follows.

PACE ACADEMY

QID : 119 -

From the given options, which answer figure can be formed by folding the figure given in the question?

निम्नलिखित विकल्पों में से कौन सी उत्तर आकृति प्रश्न में दी गई आकृति को मोड़कर बनाई जा सकती है?

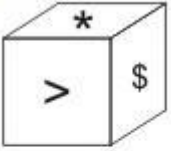


EMMY

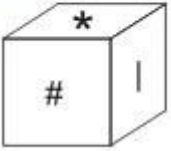
PACE

Options:

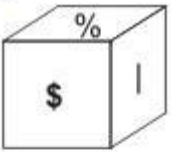
1)



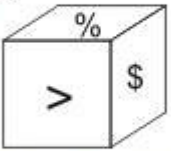
2)



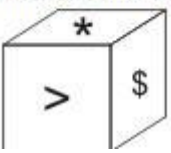
3)



4)



Correct Answer:

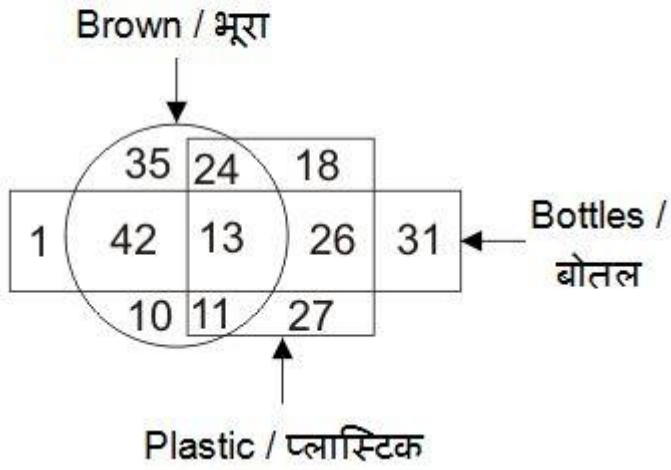


PACE ACADEMY

QID : 120 -

In the given figure, how many bottles are not brown?

दी गई आकृति में, कितनी बोतलें भूरी नहीं हैं?



Options:

1)



2)



3)



4)



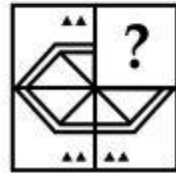
Correct Answer:



QID : 121 -

Which answer figure will complete the pattern in the question figure?

कौन सी उत्तर आकृति प्रश्न आकृति के प्रतिरूप को पूरा करेगी?



Options:

1)



2)



3)



4)



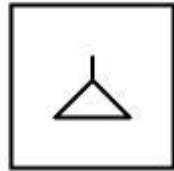
Correct Answer:



QID : 122 -

From the given answer figures, select the one in which the question figure is hidden/embedded.

दी गई उत्तर आकृतियों में से उस उत्तर आकृति को चुनिए जिस में प्रश्न आकृति निहित है।



Options:

1)



2)



3)



4)



Correct Answer:



QID : 123 -

A piece of paper is folded and punched as shown below in the question figures. From the given answer figures, indicate how it will appear when opened?

नीचे के प्रश्न आकृतियों में दिखाए अनुसार कागज को मोड़कर छेदने तथा खोलने के बाद वह किस उत्तर आकृति जैसा दिखाई देगा?



Options:

1)



2)



3)



4)



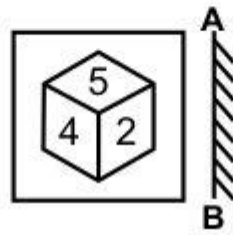
Correct Answer:



QID : 124 -

If a mirror is placed on the line AB, then which of the answer figures is the right image of the given figure?

यदि एक दर्पण को AB रेखा पर रखा जाए, तो दी गई उत्तर आकृतियों में से कौन सी आकृति प्रश्न आकृति की सही प्रतिबिम्ब होगी?



Options:

1)



2)



3)



4)



Correct Answer:



QID : 125 -

A word is represented by only one set of numbers as given in any one of the alternatives. The sets of numbers given in the alternatives are represented by two classes of alphabets as shown in the given two matrices. The columns and rows of **Matrix-I** are numbered from 0 to 4 and that of **Matrix-II** are numbered from 5 to 9. A letter from these matrices can be represented first by its row and next by its column, for example, 'E' can be represented by 21, 44, etc., and 'T' can be represented by 65, 87, etc. Similarly, you have to identify the set for the word "FATE".

एक शब्द केवल एक संख्या-समूह द्वारा दर्शाया गया है, जैसा कि विकल्पों में से किसी एक में दिया गया है। विकल्पों में दिए गए संख्या-समूह अक्षरों के दो वर्गों द्वारा दर्शाए गए हैं, जैसा कि दिए गए दो आव्यूहों में है। आव्यूह-I के स्तम्भ और पंक्ति की संख्या 0 से 4 है और आव्यूह-II की 5 से 9। इन आव्यूहों से एक अक्षर को पहले उसकी पंक्ति और बाद में स्तम्भ संख्या द्वारा दर्शाया जा सकता है। उदाहरण के लिए 'E' को 21, 44, आदि द्वारा दर्शाया जा सकता है तथा 'T' को 65, 87, आदि द्वारा दर्शाया जा सकता है। इसी तरह से आपको प्रश्न में दिए शब्द "FATE" के लिए समूह को पहचानना है।

Matrix-I
आव्यूह-I

	0	1	2	3	4
0	A	U	O	E	I
1	E	I	A	U	O
2	O	E	I	A	U
3	U	O	E	I	A
4	I	A	U	O	E

Matrix-II
आव्यूह-II

	5	6	7	8	9
5	B	F	K	N	T
6	T	B	F	K	N
7	N	T	B	F	K
8	K	N	T	B	F
9	F	K	N	T	B

Options:

- 1) 56, 00, 87, 11
- 2) 96, 41, 59, 44
- 3) 88, 12, 76, 33
- 4) 78, 34, 98, 21

Correct Answer: 78, 34, 98, 21

(General Awareness)

QID : 126 - After which five year plan, 'The Rolling Plan' was implemented?

Options:

- 1) Third Plan
- 2) Fifth Plan
- 3) Seventh Plan
- 4) Ninth Plan

Correct Answer: Fifth Plan

QID : 127 - Which tax causes a burden on the poorer section of the society?

Options:

- 1) Direct Tax
- 2) Indirect Tax
- 3) Both Direct and Indirect Tax
- 4) None of these

Correct Answer: Indirect Tax

QID : 128 - Which article was referred to as the 'the heart and soul' of the constitution by Dr. B. R. Ambedkar?

Options:

- 1) Article 4
- 2) Article 32
- 3) Article 28
- 4) Article 30

Correct Answer: Article 32

QID : 129 - Which of the following provision needs a special majority in Parliament?

Options:

- 1) Change in Fundamental Rights
- 2) Creation of New States
- 3) Abolition of Legislative Councils in State
- 4) Rules and Procedures in Parliament

Correct Answer: Change in Fundamental Rights

QID : 130 - Which act ended the "Trade Monopoly" of the East India Company?

Options:

- 1) Regulating Act of 1773
- 2) Pitt's India Act of 1784
- 3) The Charter Act of 1833
- 4) The Charter Act of 1813

Correct Answer: The Charter Act of 1813

QID : 131 -

Match the following.

निम्नलिखित का मिलान कीजिए।

Battles / युद्ध	Year / वर्ष
1. Battle of Buxar बक्सर का युद्ध	a. 1576
2. Battle of Plassey प्लासी का युद्ध	b. 1764
3. Battle of Haldighati हल्दीघाटी का युद्ध	c. 1757

Options

- 1) 1-c, 2-b, 3-a
- 2) 1-b, 2-c, 3-a
- 3) 1-b, 2-a, 3-c
- 4) 1-c, 2-a, 3-b

Correct Answer: 1-b, 2-c, 3-a

QID : 132 - Which of the following state receives rainfall due to western disturbances?

Options:

- 1) Punjab
- 2) West Bengal
- 3) Kerala
- 4) Gujarat

Correct Answer: Punjab

QID : 133 - Why does Western Ghats and Eastern Ghats both receive sufficient rainfall but Deccan Plateau receives scanty rainfall?

Options:

- 1) It is a rain shadow area
- 2) It is located parallel to wind direction
- 3) It is away from the coast
- 4) Rain bearing clouds are absent

Correct Answer: It is a rain shadow area

QID : 134 - In which of the following part of the cell does the pyruvic acid is broken down into carbon dioxide, water and energy?

Options:

- 1) Cytoplasm
- 2) Nucleus
- 3) Mitochondria
- 4) Chloroplast

Correct Answer: Mitochondria

QID : 135 - What is plant cell wall mainly composed of?

Options:

- 1) Lipids
- 2) Vitamin
- 3) Cellulose
- 4) Protein

Correct Answer: Lipids

QID : 136 - What is the SI unit of Power?

Options:

- 1) Boyle
- 2) Watt
- 3) Newton
- 4) Pascal

Correct Answer: Watt

QID : 137 - Which one of the following is not a type of coal?

Options:

- 1) Anthracite
- 2) Lignite
- 3) Peat
- 4) Siderite

Correct Answer: Siderite

QID : 138 - Which of the following pair is INCORRECT?

- I. Parsec - Distance
- II. Barrel - Liquid
- III. Light year - Time

Options:

- 1) Only III
- 2) Only I and III
- 3) Only II
- 4) All are correct

Correct Answer: Only III

QID : 139 - What is the name of the first Super Computer of the world?

Options:

- 1) CDC 6600
- 2) USENET
- 3) COMODOR VIC/20
- 4) PARAM-10000

Correct Answer: CDC 6600

QID : 140 - Fog, clouds, mist are examples of _____.

Options:

- 1) Aerosol
- 2) Solid sol
- 3) Foam
- 4) Gel

Correct Answer: Aerosol

QID : 141 - Which of the following is a chemical formula of quicklime?

Options:

- 1) Ca_2O
- 2) Ca_2CO_3
- 3) CaO_2
- 4) CaO

Correct Answer: CaO

QID : 142 - Who was the pioneer of Chipko movement of 1973?

Options:

- 1) Sambaji
- 2) Baba Amte
- 3) Sunderlal Bahuguna
- 4) Medha Patkar

Correct Answer: Sunderlal Bahuguna

QID : 143 - 'Pradhan Mantri Digital Saksharta Abhiyan' is launched to digitally literate 6 crore rural households by _____.

Options:

- 1) March, 2019
- 2) March, 2020
- 3) April, 2021
- 4) March, 2022

Correct Answer: March, 2019

QID : 144 - Edward Jenner discovered vaccine for which of the following disease?

Options:

- 1) Polio
- 2) Tuberculosis
- 3) Small Pox
- 4) Rabies

Correct Answer: Small Pox

QID : 145 - In 2017 Australian Open, Serena Williams defeated her sister Venus Williams to win the _____ Grand Slam Singles title of her career.

Options:

- 1) 23rd
- 2) 18th
- 3) 26th
- 4) 20th

Correct Answer: 23rd

QID : 146 - Which Indian state hosted the 3 days long 'International Yoga Fest' held from 8th to 10th March, 2017?

Options:

- 1) Uttar Pradesh
- 2) Madhya Pradesh
- 3) Maharashtra
- 4) Delhi

Correct Answer: Delhi

QID : 147 - Who was awarded with the Filmfare Lifetime Achievement Award for the year 2017?

Options:

- 1) Yash Chopra
- 2) Kamini Kaushal
- 3) Shatrughan Sinha
- 4) Moushumi Chatterjee

Correct Answer: Shatrughan Sinha

QID : 148 - Who is the author of 'The Windfall'?

Options:

- 1) Manmohan Singh
- 2) Amitav Ghosh
- 3) Diksha Basu
- 4) Arundhati Roy

Correct Answer: Diksha Basu

QID : 149 - Which country will host the 9th BRICS Summit in the year 2017?

Options:

- 1) Brazil
- 2) Russia
- 3) India
- 4) China

Correct Answer: China

QID : 150 - With which country has India signed an agreement for assistance in green and sustainable construction of infrastructure in the Himalayan Kingdom in December, 2016?

Options:

- 1) Nepal
- 2) Afghanistan
- 3) Bhutan
- 4) Pakistan

Correct Answer: Bhutan

(Mathematics)

QID : 151 - For what value of X, $211X$ will be a perfect square?

Options:

- 1) 4
- 2) 5
- 3) 6
- 4) 9

Correct Answer: 6

QID : 152 - 2 men or 3 women can complete a job in 96 days. Then 6 men and 7 women will complete the same job in how many days?

Options:

- 1) 18
- 2) 27
- 3) 20
- 4) 24

Correct Answer: 18

QID : 153 - If the radius of the cylinder is decreased by 20%, then by how much percent the height must be increased, so that the volume of the cylinder remains same?

Options:

- 1) 20
- 2) 36.25
- 3) 56.25
- 4) 65

Correct Answer: 56.25

QID : 154 - The marked price of an article is 40% more than its cost price. If 15% discount is given on the marked price, then what will be the profit percentage?

Options:

- 1) 25
- 2) 15
- 3) 21
- 4) 19

Correct Answer: 19

QID : 155 - Three partners A, B and C share profit such that three times the share of A is equal to two times the share of B and equal to 12 times the share of C. What is the ratio of the profits of A, B and C respectively

Options:

- 1) 3 : 2 : 12
- 2) 12 : 2 : 3
- 3) 4 : 6 : 1
- 4) 1 : 6 : 4

Correct Answer: 4 : 6 : 1

QID : 156 - The average of 8 consecutive natural numbers is 38.5. What is the largest of these 8 numbers?

Options:

- 1) 41
- 2) 39
- 3) 42
- 4) 45

Correct Answer: 42

QID : 157 - If the cost price of 48 articles is equal to the selling price of 32 articles, then what is the profit percentage?

Options:

- 1) 20
- 2) 25
- 3) 50
- 4) 75

Correct Answer: 50

QID : 158 - After deducting 12% from a certain sum and then deducting 25% from the remainder, 2508 is left, then what is the initial sum?

Options:

- 1) 3500
- 2) 3450
- 3) 3970
- 4) 3800

Correct Answer: 3800

QID : 159 - Two trains are moving in the opposite direction at speed of 30 km/hr and 45 km/hr respectively, whose lengths are 450 m and 550 m respectively. What is the time taken (in seconds) by slower train to cross the faster train?

Options:

- 1) 48
- 2) 54
- 3) 62
- 4) 72

Correct Answer: 48

QID : 160 - A person lent certain sum of money at 10% per annum simple interest. In 20 years the interest amounted to Rs 500 more than the sum lent. What was the sum lent (in Rs)?

Options:

- 1) 200
- 2) 500
- 3) 1000
- 4) 250

Correct Answer: 500

QID : 161 - If $a = 73$, $b = 74$ and $c = 75$, then what is the value of $a^3 + b^3 + c^3 - 3abc$?

Options:

- 1) 365
- 2) 444
- 3) 666
- 4) 999

Correct Answer: 666

QID : 162 - If $x^2 + (1/x^2) = 31/9$ and $x > 0$, then what is the value of $x^3 + (1/x^3)$?

Options:

- 1) 70/9
- 2) 154/27
- 3) 349/27
- 4) 349/7

Correct Answer: 154/27

QID : 163 -

What is the value of $\frac{(x^2 - 5x + 6)}{(x^2 - 3x + 2)} \div \frac{(x^2 - 7x + 12)}{(x^2 - 5x + 4)}$?

$\frac{(x^2 - 5x + 6)}{(x^2 - 3x + 2)} \div \frac{(x^2 - 7x + 12)}{(x^2 - 5x + 4)}$ का मान क्या है?

Options:

- 1) 1
- 2) 2
- 3) $(x - 2)/(x - 1)$
- 4) $(x + 3)/(x + 1)$

Correct Answer: 1

QID : 164 - If $x - (1/x) = 3$, then what is the value of $(2x^4 + 3x^3 + 13x^2 - 3x + 2) / (3x^4 + 3)$?

Options:

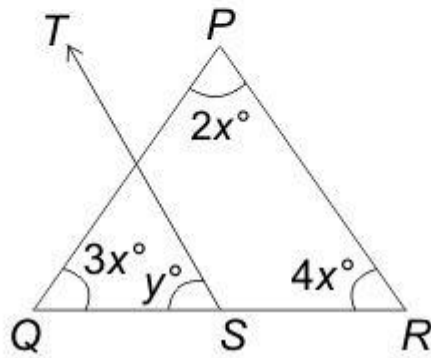
- 1) 1/3
- 2) 2/3
- 3) 4/3
- 4) 5/3

Correct Answer: 4/3

QID : 165 -

In the given figure $ST \parallel RP$, then what is the value (in degrees) of supplementary angle of y ?

दी गई आकृति में $ST \parallel RP$, तो y के संपूरक कोण का मान (डिग्री में) क्या है?



Options:

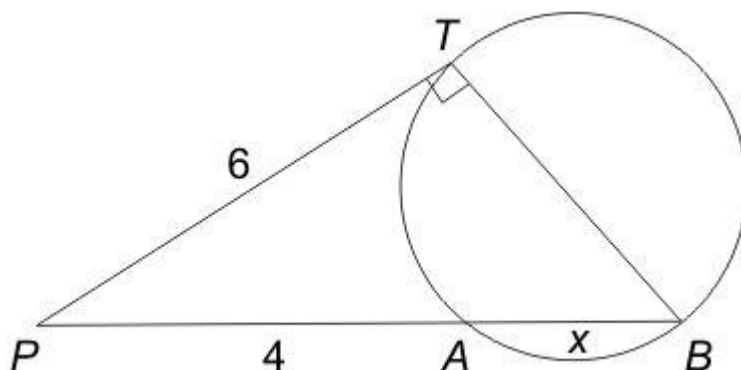
- 1) 10
- 2) 60
- 3) 100
- 4) 170

Correct Answer: 100

QID : 166 -

In the given figure, TB passes through centre O . What is the radius of the circle?

दी गई आकृति में, TB केंद्र O से गुजरती है। वृत्त की त्रिज्या क्या है?



Options:

- 1) $(2\sqrt{5})/3$
- 2) $(3\sqrt{2})/5$
- 3) $(3\sqrt{5})/2$
- 4) $(2\sqrt{3})/5$

Correct Answer: $(3\sqrt{5})/2$

QID : 167 - ΔPQR has sides PQ and PR measuring 983 and 893 units respectively. How many such triangles are possible with all integral sides?

Options:

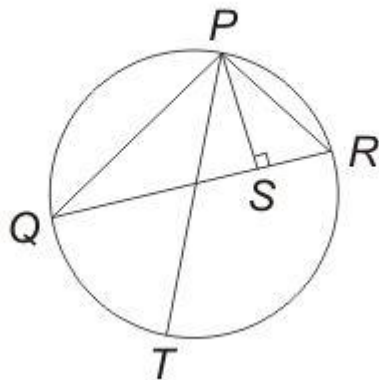
- 1) 1876
- 2) 90
- 3) 1785
- 4) 1786

Correct Answer: 1785

QID : 168 -

In the given figure, PQR is a triangle in which, $PQ = 24$ cm, $PR = 12$ cm and altitude $PS = 8$ cm. If PT is the diameter of the circum-circle, then what is the length (in cm) of circum-radius?

दी गई आकृति में, PQR एक त्रिभुज है जिसमें $PQ = 24$ से.मी., $PR = 12$ से.मी. तथा शीर्षलम्ब $PS = 8$ से.मी. है। यदि PT बाह्य वृत्त का व्यास है, तो बाह्य त्रिज्या की लम्बाई (से.मी. में) क्या है?



Options:

- 1) 15
- 2) 18
- 3) 20
- 4) 21

Correct Answer: 18

QID : 169 - What is the simplified value of $\sec^6 A - \tan^6 A - 3 \sec^2 A \tan^2 A$?

Options:

- 1) -1
- 2) 0
- 3) 1
- 4) $\sec A \tan A$

Correct Answer: 1

QID : 170 - What is the simplified value of $(\operatorname{cosec} A - \sin A)(\sec A - \cos A)(\tan A + \cot A)$?

Options:

- 1) -1
- 2) 0
- 3) 1
- 4) 2

Correct Answer: 1

QID : 171 - What is the simplified value of $(\cos^4 A - \sin^4 A)$?

Options:


- 1) 0
- 2) $2 \cos^2 A$
- 3) $\cos 2A$
- 4) 1

Correct Answer: $\cos 2A$

QID : 172 -

The pie chart given below shows the runs scored by a player against 6 different countries. The total runs scored by the player against these countries are 1600.

नीचे दिए गए वृत्त चित्र में एक खिलाड़ी के द्वारा 6 विभिन्न देशों के विरुद्ध बनाए गए रनों को दर्शाया गया है। खिलाड़ी के द्वारा इन देशों के विरुद्ध बनाए गए कुल रन 1600 हैं।



How many runs has the player scored against Pakistan?

Options:


- 1) 272
- 2) 192
- 3) 256
- 4) 144

Correct Answer: 192

QID : 173 -

The pie chart given below shows the runs scored by a player against 6 different countries. The total runs scored by the player against these countries are 1600.

नीचे दिए गए वृत्त चित्र में एक खिलाड़ी के द्वारा 6 विभिन्न देशों के विरुद्ध बनाए गए रनों को दर्शाया गया है। खिलाड़ी के द्वारा इन देशों के विरुद्ध बनाए गए कुल रन 1600 हैं।



The difference between the runs scored against England and Pakistan is same as the difference between which of the following two countries?

Options:


- 1) South Africa and Sri Lanka
- 2) South Africa and New Zealand
- 3) Australia and Sri Lanka
- 4) Australia and New Zealand

Correct Answer: Australia and New Zealand

QID : 174 -

The pie chart given below shows the runs scored by a player against 6 different countries. The total runs scored by the player against these countries are 1600.

नीचे दिए गए वृत्त चित्र में एक खिलाड़ी के द्वारा 6 विभिन्न देशों के विरुद्ध बनाए गए रनों को दर्शाया गया है। खिलाड़ी के द्वारा इन देशों के विरुद्ध बनाए गए कुल रन 1600 हैं।



What is the difference in runs scored by the player against Australia and Sri Lanka?

Options:


- 1) 256
- 2) 128
- 3) 114
- 4) 80

Correct Answer: 256

QID : 175 -

The pie chart given below shows the runs scored by a player against 6 different countries. The total runs scored by the player against these countries are 1600.

नीचे दिए गए वृत्त चित्र में एक खिलाड़ी के द्वारा 6 विभिन्न देशों के विरुद्ध बनाए गए रनों को दर्शाया गया है। खिलाड़ी के द्वारा इन देशों के विरुद्ध बनाए गए कुल रन 1600 हैं।



Difference between the total runs scored against Australia and New Zealand and the total runs scored against Sri Lanka and Pakistan make what sectorial angle (in degrees) in the pie chart?

Options:

- 1) 90
- 2) 144
- 3) 36
- 4) 72

Correct Answer: 72

(English Comprehension)

QID : 176 - In the following question, some part of the sentence may have errors. Find out which part of the sentence has an error and select the appropriate option. If a sentence is free from error, select 'No Error'.

The CEO only discussed (1)/ the new venture (2)/ with his manager. (3)/ No Error (4)

Options:

- 1) 1
- 2) 2
- 3) 3
- 4) 4

Correct Answer: 1

QID : 177 - In the following question, some part of the sentence may have errors. Find out which part of the sentence has an error and select the appropriate option. If a sentence is free from error, select 'No Error'.

If she was marrying Mr. Gupta (1)/ she would have been (2)/ recognized as Mrs. Gupta. (3)/ No Error (4)

Options:

- 1) 1
- 2) 2
- 3) 3
- 4) 4

Correct Answer: 2

QID : 178 - In the following question, the sentence given with blank to be filled in with an appropriate word. Select the correct alternative out of the four and indicate it by selecting the appropriate option.

Ankita is disgusted _____ the habit of her brother.

Options:

- 1) at
- 2) on
- 3) of
- 4) with

Correct Answer: at

QID : 179 - In the following question, the sentence given with blank to be filled in with an appropriate word. Select the correct alternative out of the four and indicate it by selecting the appropriate option.

Due to the security reasons we were _____ from entering into the cockpit of the plane.

Options:

- 1) denied
- 2) rejected
- 3) stopped
- 4) warned

Correct Answer: stopped

QID : 180 - In the following question, out of the four alternatives, select the word similar in meaning to the word given.

Exorbitant

Options:

- 1) Clear
- 2) Dull
- 3) High
- 4) Rare

Correct Answer: High

QID : 181 - In the following question, out of the four alternatives, select the word similar in meaning to the word given.

Jeopardy

Options:

- 1) Angry
- 2) Injure
- 3) Risk
- 4) Serene

Correct Answer: Risk

QID : 182 - In the following question, out of the four alternatives, select the word opposite in meaning to the word given.

Churlish

Options:

- 1) Belittle
- 2) Courteous
- 3) Fervent
- 4) Uncouth

Correct Answer: Courteous

QID : 183 - In the following question, out of the four alternatives, select the word opposite in meaning to the word given.

Phlegmatic

Options:

- 1) Ardent
- 2) Indifferent

- 3) Prohibit
- 4) Merciless

Correct Answer: Ardent

QID : 184 - In the following question, out of the four alternatives, select the alternative which best expresses the meaning of the idiom/phrase.

Damp squib

Options:

- 1) Complete failure
- 2) Complete knowledge
- 3) To motivate
- 4) To squander money

Correct Answer: Complete failure

QID : 185 - In the following question, out of the four alternatives, select the alternative which best expresses the meaning of the idiom/phrase.

Rise like a phoenix

Options:

- 1) Something memorable
- 2) Time to answer for one's action
- 3) To become successful again
- 4) To make people happy

Correct Answer: To become successful again

QID : 186 - Improve the bracketed part of the sentence.

The mobile phones have made digital cameras a little (superfluous) in today's world.

Options:

- 1) extinct
- 2) obsolete
- 3) redundant
- 4) No improvement

Correct Answer: obsolete

QID : 187 - Improve the bracketed part of the sentence.

If (you will approach) her sincerely, she will listen to your problem definitely.

Options:

- 1) you approach
- 2) you are approaching
- 3) you will be approaching
- 4) No improvement

Correct Answer: you approach

QID : 188 - In the following question, out of the four alternatives, select the alternative which is the best substitute of the phrase.

That which is away from centre

Options:

- 1) Eccentric
- 2) Eclectic
- 3) Ellipsis
- 4) Equine

Correct Answer: Eccentric

QID : 189 - In the following question, out of the four alternatives, select the alternative which is the best substitute of the phrase.

One who values practicality

Options:

- 1) Apotheosis
- 2) Pliable
- 3) Pragmatist
- 4) Realist

Correct Answer: Pragmatist

QID : 190 - In the following question, four words are given out of which one word is incorrectly spelt. Select the incorrectly spelt word.

Options:

- 1) Pedestrain
- 2) Plaintiff
- 3) Potatoes
- 4) Potassium

Correct Answer: Pedestrain

QID : 191 - In the following question, four words are given out of which one word is incorrectly spelt. Select the incorrectly spelt word.

Options:

- 1) Fabulous
- 2) Gorgeous
- 3) Heterogeneous
- 4) Inocuous

Correct Answer: Inocuous

QID : 192 - The question below consists of a set of labelled sentences. Out of the four options given, select the most logical order of the sentences to form a coherent paragraph.

P- A sensitive mind easily absorbs the vibrations emanating from the thought of the people it associates with.

Q- We often say that a person is known by the company he keeps.

R- The violent can be made calm by exuding thought of love and compassion.

S- Visits to holy places are considered good because the good thoughts of the holy people gathered there and the ensuing vibrations definitely affect one in a positive fashion.

Options:

- 1) RQPS
- 2) QRSP
- 3) PQRS
- 4) SRQP

Correct Answer: RQPS

QID : 193 - The question below consists of a set of labelled sentences. Out of the four options given, select the most logical order of the sentences to form a coherent paragraph.

P- Epistemological idealists (such as Kant) might insist that the only things which can be directly known for certain are ideas.

Q- The approach to idealism by Western philosophers has been different to that of Eastern thinkers.

R- In much of Western thought (though not in such major Western thinkers as Plato and Hegel) the ideal relates to direct knowledge of subjective mental ideas, or images.

S- It is then usually juxtaposed with realism in which the real is said to have absolute existence prior to and independent of our knowledge.

Options:

- 1) RQPS
- 2) PQSR
- 3) PRQS
- 4) QRSP

Correct Answer: QRSP

QID : 194 - In the following question, a sentence has been given in Active/Passive voice. Out of the four alternatives suggested, select the one which best expresses the same sentence in Passive/Active voice.

Karnataka grows coffee

Options:

- 1) Coffee is being grown in Karnataka.
- 2) Coffee grown in Karnataka.
- 3) Coffee is grown in Karnataka.
- 4) Let the coffee be grown in Karnataka.

Correct Answer: Coffee is grown in Karnataka.

QID : 195 - In the following question, a sentence has been given in Direct/Indirect speech. Out of the four alternatives suggested, select the one which best expresses the same sentence in Indirect/Direct speech.

Gopal's mother reminded him to take his wallet.

Options:

- 1) "Are you going to take your wallet or not?" said Gopal to his mother.
- 2) "Don't forget to take your wallet, Gopal" said his mother.
- 3) Gopal's mother said, "Remember your wallet, Gopal?"
- 4) "Here is your wallet Gopal" said his mother.

Correct Answer: "Don't forget to take your wallet, Gopal" said his mother.

QID : 196 - In the following questions, the sentence given with blank to be filled in with an appropriate word. Select the correct alternative out of the four and indicate it by selecting the appropriate option.

Organization are institutions in which members compete for status and _____. They _____ for the resources of the organization, for example, _____ to expand their own departments, for _____ advancement and for power to _____ the activities of others.

Organization are institutions in which members compete for status and _____.

Options:

- 1) growth
- 2) money
- 3) power
- 4) success

Correct Answer: power

QID : 197 - In the following questions, the sentence given with blank to be filled in with an appropriate word. Select the correct alternative out of the four and indicate it by selecting the appropriate option.

Organization are institutions in which members compete for status and _____. They _____ for the resources of the organization, for example, _____ to expand their own departments, for _____ advancement and for power to _____ the activities of others.

They _____ for the resources

Options:

- 1) compete
- 2) expand
- 3) rely
- 4) run

Correct Answer: compete

QID : 198 - In the following questions, the sentence given with blank to be filled in with an appropriate word. Select the correct alternative out of the four and indicate it by selecting the appropriate option.

Organization are institutions in which members compete for status and _____. They _____ for the resources of the organization, for example, _____ to expand their own departments, for _____ advancement and for power to _____ the activities of others.

of the organization, for example, _____ to expand

Options:

- 1) finance
- 2) infrastructure
- 3) resources
- 4) source

Correct Answer: finance

QID : 199 - In the following questions, the sentence given with blank to be filled in with an appropriate word. Select the correct alternative out of the four and indicate it by selecting the appropriate option.

Organization are institutions in which members compete for status and _____. They _____ for the resources of the organization, for example, _____ to expand their own departments, for _____ advancement and for power to _____ the activities of others.

their own departments, for _____ advancement and

Options:

- 1) career
- 2) financial
- 3) regional
- 4) technological

Correct Answer: career

QID : 200 - In the following questions, the sentence given with blank to be filled in with an appropriate word. Select the correct alternative out of the four and indicate it by selecting the appropriate option.

Organization are institutions in which members compete for status and _____. They _____ for the resources of the organization, for example, _____ to expand their own departments, for _____ advancement and for power to _____ the activities of others.

for power to _____ the activities of others.

Options:

- 1) affect
- 2) control
- 3) curb
- 4) pursue

Correct Answer: control

PACE ACADEMY