

SSC CGL 2017 EXAM PAPER : Held on 16-AUG-2017 Shift-1

(Reasoning)

QID : 1 - In the following question, select the related word from the given alternatives.

Sheep : Lamb :: Cow : ?

Options:

- 1) Kitten
- 2) Cub
- 3) Calf
- 4) Caterpillar

Correct Answer: Calf

QID : 2 - In the following question, select the related letters from the given alternatives.

PRAG : QTDK :: STOP : ?

Options:

- 1) LMNP
- 2) BDFE
- 3) TVRT
- 4) QSTG

Correct Answer: TVRT

QID : 3 - In the following question, select the related number from the given alternatives.

562 : 30 :: 663 : ?

Options:

- 1) 44
- 2) 49
- 3) 54
- 4) 58

Correct Answer: 54

QID : 4 - In the following question, select the odd word from the given alternatives.

Options:

- 1) Cricket
- 2) Carrom
- 3) Table Tennis
- 4) Chess

Correct Answer: Cricket

QID : 5 - In the following question, select the odd letters from the given alternatives.

Options:

- 1) IMX
- 2) DHS
- 3) GWK
- 4) KOZ

Correct Answer: GWK

QID : 6 - In the following question, select the odd number pair from the given alternatives.

Options:

- 1) 122 – 1331
- 2) 173 – 2197
- 3) 197 – 2744
- 4) 290 – 4913

Correct Answer: 173 – 2197

QID : 7 - Arrange the given words in the sequence in which they occur in the dictionary.

1. Xenons
2. Xylyls
3. Xanthic
4. Xenians
5. Xyst

Options:

- 1) 34125
- 2) 34521
- 3) 43251
- 4) 51342

Correct Answer: 34125

QID : 8 - A series is given with one term missing. Select the correct alternative from the given ones that will complete the series.

LOQ, SVX, ZCE, ?

Options:

- 1) GJL
- 2) GLJ
- 3) GTL
- 4) JLG

Correct Answer: GJL

QID : 9 - In the following question, select the missing number from the given series.

13, 27, 56, 115, ?

Options:

- 1) 224
- 2) 231
- 3) 233
- 4) 234

Correct Answer: 234

QID : 10 - Sumitra remembers that her mother's birthday is after 13th February but before 16th February but her brother remembers that his mother's birthday is after 14th February but before 17th February. On which date Sumitra's mother's birthday will be celebrated?

Options:

- 1) 13th February
- 2) 14th February
- 3) 15th February
- 4) 17th February

Correct Answer: 15th February

QID : 11 - There are five energy drinks - Red, Moto, Energy, Lion and Bull containing different range of sugar content. Moto having sugar content more than all other drinks. Energy having the sugar content only more than the Lion. Bull is not having sugar content more than the Red. Which of the following drink having the second most sugar content?

Options:

- 1) Bull
- 2) Energy
- 3) Red
- 4) Moto

Correct Answer: Red

QID : 12 - In the following question, from the given alternative words, select the word which cannot be formed using the letters of the given word.

CALCULATING

Options:

- 1) GAIN
- 2) TANING
- 3) TAIL
- 4) CULT

Correct Answer: TANING

QID : 13 - In a certain code language, "WILDHORN" is written as "1133" and "RAPTURE" is written as "1089". How is "PORTLOUIS" written in that code language?

Options:

- 1) 1395
- 2) 1485
- 3) 1584
- 4) 1595

Correct Answer: 1595

QID : 14 - If "A" denotes "subtracted from", "B" denotes "added to", "C" denotes "divided by", "D" denotes "multiplied by", then which of the following statement is correct?

Options:

- 1) 3 A 12 B 16 D 17 C 1 = 163
- 2) 5 C 7 A 9 D 8 B 2 = 294
- 3) 13 C 13 A 13 B 13 D 13 = 157
- 4) 18 C 16 D 49 A 27 B 9 = 200

Correct Answer: 13 C 13 A 13 B 13 D 13 = 157

QID : 15 - If $9 * 2 * 5 = 23$ and $1 * 4 * 8 = 29$, then

$1 * 6 * 3 = ?$

Options:

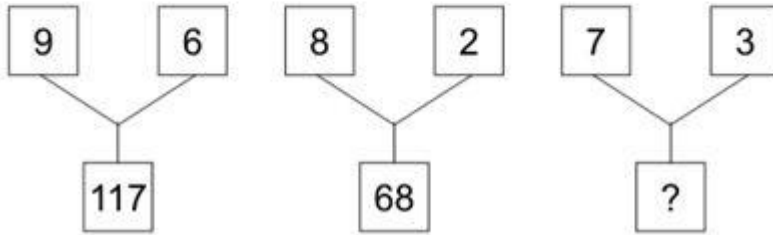
- 1) 19
- 2) 21
- 3) 31
- 4) 39

Correct Answer: 19

QID : 16 -

In the following question, select the number which can be placed at the sign of question mark (?) from the given alternatives.

निम्नलिखित प्रश्न में दिए गए विकल्पों में से प्रश्न चिह्न (?) के स्थान पर आने वाली संख्या को चुनिए।



Options:

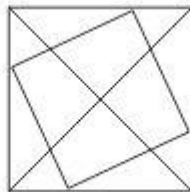
- 1) 48
- 2) 52
- 3) 55
- 4) 58

Correct Answer: 58

QID : 17 -

How many triangles are there in the given figure?

दी गई आकृति में कितने त्रिभुज हैं?



Options:

- 1) 20
- 2) 23
- 3) 24
- 4) 26

Correct Answer: 20

QID : 18 - In the following question below are given some statements followed by some conclusions. Taking the given statements to be true even if they seem to be at variance from commonly known

facts, read all the conclusions and then decide which of the given conclusion logically follows the given statements.

Statements:

- I. All LED are bulb.
- II. Some bulbs are not tube light.

Conclusions:

- I. Some tube lights are LED.
- II. All LED are tube lights.

Options:

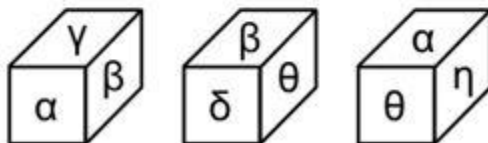
- 1) Only conclusion (I) follows.
- 2) Only conclusion (II) follows.
- 3) Neither conclusion (I) nor conclusion (II) follows.
- 4) Both conclusions follow.

Correct Answer: Neither conclusion (I) nor conclusion (II) follows.

QID : 19 -

Three positions of a cube are shown below. What will come opposite to face containing 'α'?

नीचे एक घन की तीन अवस्थाएँ दर्शायी गयी हैं। प्रतीक चिह्न 'α' के विपरीत फलक पर कौन सा प्रतीक चिह्न आयेगा?



Options:

- 1) β
- 2) δ
- 3) η
- 4) θ

Correct Answer: δ

QID : 20 - Identify the diagram that best represents the relationship among the given classes.


Pet animals, Dog, Cat

Options:

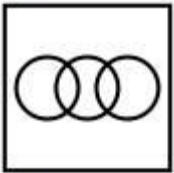
1)



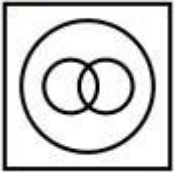
2)



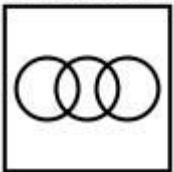
3)



4)



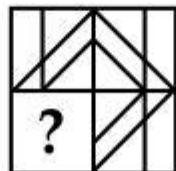
Correct Answer:



QID : 21 -

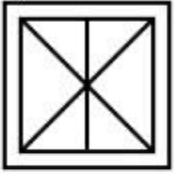
Which answer figure will complete the pattern in the question figure?

कौन सी उत्तर आकृति प्रश्न आकृति के प्रतिरूप को पूरा करेगी?



Options:

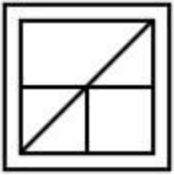
1)



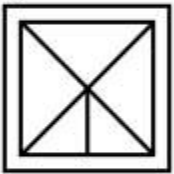
2)



3)



4)



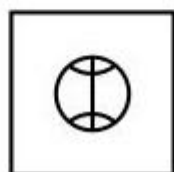
Correct Answer:



QID : 22 -

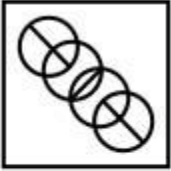
From the given answer figures, select the one in which the question figure is hidden/embedded.

दी गई उत्तर आकृतियों में से उस आकृति को चुनिए जिस में प्रश्न आकृति निहित है।



Options:

1)



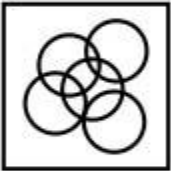
2)



3)



4)



Correct Answer:

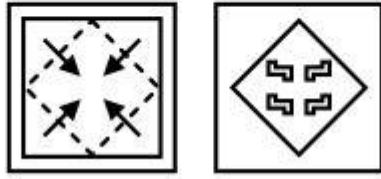


PACE ACADEMY

QID : 23 -

A piece of paper is folded and punched as shown below in the question figures. From the given answer figures, indicate how it will appear when opened?


नीचे के प्रश्न आकृतियों में दिखाए अनुसार कागज को मोड़कर छेदने तथा खोलने के बाद वह किस उत्तर आकृति जैसा दिखाई देगा?



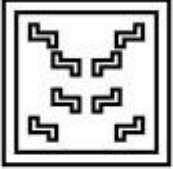
PACE ACADEMY

Options:

1)



2)



3)



4)



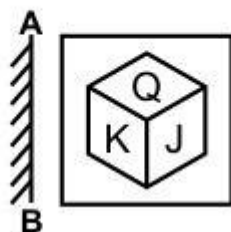
Correct Answer:



QID : 24 -

If a mirror is placed on the line AB, then which of the answer figure is the right image of the given figure?

यदि एक दर्पण को AB रेखा पर रखा जाए, तो दी गई उत्तर आकृतियों में से कौन सी आकृति प्रश्न आकृति की सही प्रतिबिम्ब होगी?



Options:

1)



2)



3)



4)



Correct Answer:



PACE ACADEMY

QID : 25 -

A word is represented by only one set of numbers as given in any one of the alternatives. The sets of numbers given in the alternatives are represented by two classes of alphabets as shown in the given two matrices. The columns and rows of **Matrix-I** are numbered from 0 to 4 and that of **Matrix-II** are numbered from 5 to 9. A letter from these matrices can be represented first by its row and next by its column, for example, 'Z' can be represented by 87, 99, etc., and 'T' can be represented by 69, 95, etc. Similarly, you have to identify the set for the word "MAZE".

एक शब्द केवल एक संख्या-समूह द्वारा दर्शाया गया है, जैसा कि विकल्पों में से किसी एक में दिया गया है। विकल्पों में दिए गए संख्या-समूह अक्षरों के दो वर्गों द्वारा दर्शाए गए हैं, जैसा कि नीचे दिए गए दो आव्यूहों में है। आव्यूह-I के स्तम्भ और पंक्ति की संख्या 0 से 4 दी गई है, और आव्यूह-II की 5 से 9। इन आव्यूहों से एक अक्षर को पहले उसकी पंक्ति और बाद में स्तम्भ संख्या द्वारा दर्शाया गया है। उदाहरण के लिए 'Z' को 87, 99, आदि द्वारा दर्शाया जा सकता है तथा 'T' को 69, 95, आदि द्वारा दर्शाया जा सकता है। इसी तरह से आपको प्रश्न में दिए गए शब्द "MAZE" के लिए समूह को पहचानना है।

Matrix-I

आव्यूह-I

	0	1	2	3	4
0	M	O	G	A	C
1	A	C	M	O	G
2	O	G	A	C	M
3	C	M	O	G	A
4	G	A	C	M	O

Matrix-II

आव्यूह-II

	5	6	7	8	9
5	J	Z	T	E	U
6	E	U	J	Z	T
7	Z	T	E	U	J
8	U	J	Z	T	E
9	T	E	U	J	Z

Options:

- 1) 00, 41, 99, 96
- 2) 12, 04, 56, 58
- 3) 24, 22, 88, 65
- 4) 43, 10, 69, 77

Correct Answer: 00, 41, 99, 96

(General Awareness)

QID : 26 - What does indifference curve represent?**Options:**

- 1) Levels of Income and Capital
- 2) Satisfaction derived from two goods
- 3) Income from two businesses
- 4) Relationship between expenditure and savings

Correct Answer: Satisfaction derived from two goods

QID : 27 -

Options:

- 1) 1-c, 2-b, 3-a
- 2) 1-b, 2-c, 3-a
- 3) 1-a, 2-b, 3-c
- 4) 1-a, 2-c, 3-b

Correct Answer: 1-b, 2-c, 3-a

QID : 28 - India has taken the concept of 'Judicial Review' from which country's constitution?

Options:

- 1) United States
- 2) United Kingdom
- 3) Canada
- 4) Ireland

Correct Answer: United States

QID : 29 - How many times a person can be elected as the President of India?

Options:

- 1) One time
- 2) Two times
- 3) Three times
- 4) No bar

Correct Answer: No bar

QID : 30 - Who shot dead John Saunders on 17th December 1927?

Options:

- 1) Bhagat Singh
- 2) Mangal Panday
- 3) Sukhdev
- 4) Bipin Chandra Pal Singh

Correct Answer: Bhagat Singh

QID : 31 - Sardar Vallabhbhai Patel was the leader of _____.

Options:

- 1) Bhoodan Movement
- 2) Rowlatt Satyagraha
- 3) Bardoli Satyagraha
- 4) Swadeshi Movement

Correct Answer: Bardoli Satyagraha

QID : 32 - Which type of forests majorly comprises of lichens and mosses?

Options:

- 1) Taiga forests
- 2) Tundra forests
- 3) Temperate mixed forests
- 4) Tropical ever green forests

Correct Answer: Tundra forests

QID : 33 - Which of the following has maximum diurnal temperature difference?

Options:

- 1) Desert
- 2) Mountains
- 3) Plateau
- 4) Ocean

Correct Answer: Desert

QID : 34 - Night Blindness is caused by deficiency of which of the following Vitamin?

Options:

- 1) Vitamin B
- 2) Vitamin C
- 3) Vitamin K
- 4) Vitamin A

Correct Answer: Vitamin A

QID : 35 - The right portion of human heart receives _____ blood.

Options:

- 1) pure
- 2) impure
- 3) mixed
- 4) None of these

Correct Answer: impure

QID : 36 - Which of the following is the largest gland in human body?

Options:

- 1) Thyroid
- 2) Liver

- 3) Kidney
- 4) Pancreas

Correct Answer: Liver

QID : 37 - On which principle does the hydraulic lift works?

Options:

- 1) Newton's law
- 2) Pascal's law
- 3) Archimedes's law
- 4) Joule's law

Correct Answer: Pascal's law

QID : 38 - At what temperature (in degree celsius), the numerical values on Celsius and Fahrenheit scales become equal?

Options:

- 1) -40
- 2) 40
- 3) 273
- 4) -273

Correct Answer: -40

QID : 39 - In MICR, what does 'I' stands for?

Options:

- 1) Interactive
- 2) Information
- 3) Ink
- 4) Instruction

Correct Answer: Ink

QID : 40 - What is the process of conversion of solid state directly to gaseous state called?

Options:

- 1) Evaporation
- 2) Condensation
- 3) Sublimation
- 4) Distillation

Correct Answer: Sublimation

QID : 41 - What are the main components of Bronze Alloy?

Options:

- 1) Copper and Zinc
- 2) Copper and Tin
- 3) Zinc and Nickel
- 4) Aluminium and Nickel

Correct Answer: Copper and Tin

QID : 42 - Which of the following causes fly ash?

Options:

- 1) Hydroelectric Power Station
- 2) Coal Combustion Power Plant
- 3) Nuclear Power Plant
- 4) Tidal Power Plant

Correct Answer: Coal Combustion Power Plant

QID : 43 - "Dulari Kanya", a scheme to bring down infant mortality in the state is launched by which Indian State?

Options:

- 1) Arunachal Pradesh
- 2) Rajasthan
- 3) Uttar Pradesh
- 4) Madhya Pradesh

Correct Answer: Arunachal Pradesh

QID : 44 - Who developed the theory of relativity?

Options:

- 1) Issac Newton
- 2) Charles Darwin
- 3) Marie Curie
- 4) Albert Einstein

Correct Answer: Albert Einstein

QID : 45 - 'Queensbury rules' is code of rules that directly influences which of the following sport?

Options:

- 1) Tennis
- 2) Boxing
- 3) Polo
- 4) Billiards

Correct Answer: Boxing

QID : 46 - Who amidst the following is a distinguished painter?

Options:

- 1) Uday Shankar
- 2) Sonal Mansingh
- 3) Amrita Shergill
- 4) Yamini Kirshnamurthy

Correct Answer: Amrita Shergill

QID : 47 - Who among the following was awarded with Padma Shri 2017 in the field of 'Sports - Hockey'?

Options:

- 1) Sardar Singh
- 2) P. R. Shreejesh
- 3) Ramandeep Singh
- 4) Yuvraj Walmiki

Correct Answer: P. R. Shreejesh

QID : 48 - "Hema Malini : Beyond the Dream Girl" is authored by which author?

Options:

- 1) Meena Iyer
- 2) Hema Malini
- 3) Ram Kamal Mukherjee
- 4) Vijay Kumar

Correct Answer: Ram Kamal Mukherjee

QID : 49 - A 7500 mile direct rail link was launched on 10 April 2017 between China and _____.

Options:

- 1) Pakistan
- 2) Kazakhstan
- 3) Great Britain
- 4) France

Correct Answer: Great Britain

QID : 50 - 19th SAARC Summit was planned to be held in November 2016 but it got postponed. Which country was its host?

Options:

- 1) Nepal
- 2) Bhutan
- 3) India
- 4) Pakistan

Correct Answer: Pakistan

(Mathematics)

QID : 51 - Product of three consecutive odd numbers is 1287. What is the largest of the three numbers?

Options:

- 1) 9
- 2) 11
- 3) 13
- 4) 17

Correct Answer: 13

QID : 52 - 45 men or 60 boys can do a piece of work in 20 days. How many days will 15 men and 20 boys take to complete the work?

Options:

- 1) 23
- 2) 45
- 3) 30
- 4) 25

Correct Answer: 30

QID : 53 - How many spherical balls of radius 1 cm can be made by melting a hemisphere of radius 6 cm?

Options:

- 1) 112
- 2) 108
- 3) 116
- 4) 104

Correct Answer: 108

QID : 54 - The marked price of a shirt is Rs 1280. If the shirt is being sold for Rs 900, then what is the discount percentage?

Options:

- 1) 31.31
- 2) 25.57
- 3) 29.68
- 4) 34.36

Correct Answer: 29.68

QID : 55 - The ratio of number of cans of orange, pineapple and mixed fruit juices kept in a store is 8 : 9 : 15. If the store sells 25%, 33.33% and 20% of orange, pineapple and mixed fruit juices cans respectively, then what is the ratio of number of cans of these juices in the remaining stock?

Options:

- 1) 1 : 1 : 2
- 2) 6 : 6 : 13
- 3) 12 : 15 : 19
- 4) 4 : 9 : 13

Correct Answer: 1 : 1 : 2

QID : 56 - The ratio of number of boys and girls in a class is 2 : 3. The average weight of boys and girls in the class is 18 kg and 21 kg respectively. What is the average weight (in kgs) of all the boys and girls together

Options:

- 1) 99/5
- 2) 101/5
- 3) 109/6
- 4) 96/5

Correct Answer: 99/5

QID : 57 - A milk merchant buys 50 litres of milk at the rate of Rs 40 per litre and mixes 5 litres of water in it. If he sells this mixture at the rate of Rs 42 per litre, then what is the profit percentage for the dealer?

Options:

- 1) 17.2
- 2) 14.4
- 3) 16.6
- 4) 15.5

Correct Answer: 15.5

QID : 58 - If A is 6 times more than B, then by what percentage is B is less than A?

Options:

- 1) 64.82
- 2) 83.33
- 3) 28.56
- 4) 85.71

Correct Answer: 85.71

QID : 59 - A runner starts running from a point at 6:00 am with a speed of 8 km/hr. Another racer starts from the same point at 8:30 am in the same direction with a speed of 10 km/hr. At what time of the day (in p.m.) will the second racer will overtake the other runner?

Options:

- 1) 8:00
- 2) 4:00
- 3) 6:30
- 4) 5:30

Correct Answer: 6:30

QID : 60 - A sum amounts to Rs 7727.104 at the rate of 12% per annum compounded annually after three years. What is the value of principal (in Rs)?

Options:

- 1) 5000
- 2) 5200
- 3) 5350
- 4) 5500

Correct Answer: 5500

QID : 61 - When $[x + (1/x)] = 5$, then what is the value of $[x - (1/x)]$?

Options:

- 1) 11
- 2) $\pm \sqrt{22}$
- 3) 21
- 4) $\pm \sqrt{21}$

Correct Answer: $\pm \sqrt{21}$

QID : 62 - If $x = (\sqrt{2} + 1)/(\sqrt{2} - 1)$, then what is the value of $(x^5 + x^4 + x^2 + x)/x^3$?

Options:

- 1) 40
- 2) 37.5
- 3) 38
- 4) $20\sqrt{2}$

Correct Answer: 40

QID : 63 - If $x = 5 - 2\sqrt{6}$, then what is the value of $\sqrt{x} + (1/\sqrt{x})$?

Options:

- 1) 5
- 2) 2
- 3) $2\sqrt{3}$
- 4) $2\sqrt{2}$

Correct Answer: $2\sqrt{3}$

QID : 64 - If $27x + 27[x - (1/3)] = 972$, then what is the value of x ?

Options:

- 1) 2
- 2) 3
- 3) 4
- 4) 5

Correct Answer: 2

QID : 65 - The inradius of an equilateral triangle is 10 cm. What is the circum-radius (in cm) of the same triangle?

Options:

- 1) 5
- 2) $10\sqrt{3}$
- 3) 20
- 4) $20\sqrt{3}$

Correct Answer: 20

QID : 66 - The point of intersection of all the angle bisectors of a triangle is _____ of the triangle.

Options:

- 1) Incenter
- 2) Circumcenter
- 3) Centroid
- 4) Orthocenter

Correct Answer: Incenter

QID : 67 - ABC is an equilateral triangle and P is the orthocenter of the triangle, then what is the value (in degrees) of $\angle BPC$?

Options:

- 1) 90
- 2) 120
- 3) 135
- 4) 145

Correct Answer: 120

QID : 68 - In a triangle ABC, AD is an angle bisector of $\angle A$ and $AB : AC = 3 : 4$. If the area of triangle ABC is 350 cm^2 , then what is the area (in cm^2) of triangle ABD?

Options:

- 1) 150
- 2) 200

- 3) 210
- 4) 240

Correct Answer: 150

QID : 69 - A boat is sailing towards a lighthouse of height $20\sqrt{3}$ m at a certain speed. The angle of elevation of the top of the lighthouse changes from 30° to 60° in 10 seconds. What is the time taken (in seconds) by the boat to reach the lighthouse from its initial position?

Options:

- 1) 10
- 2) 15
- 3) 20
- 4) 60

Correct Answer: 15

QID : 70 - What is the value of $[\sec \theta / (\sec \theta - 1)] + [\sec \theta / (\sec \theta + 1)]$?

Options:

- 1) $2 \sin^2 \theta$
- 2) $2(1 + \tan^2 \theta)$
- 3) $2 \operatorname{cosec}^2 \theta$
- 4) $\sin^2 \theta$


Correct Answer: $2 \operatorname{cosec}^2 \theta$

PACE ACADEMY

QID : 71 -

The pie chart given below shows the runs scored by Pujara against team of different countries.

नीचे दिए गए वृत्त चित्र में पुजारा के द्वारा विभिन्न देशों की क्रिकेट टीमों के विरुद्ध बनाए गए रनों को दर्शाया गया है।



Options:


- 1) $3x$
- 2) x
- 3) $4x$
- 4) $2x$ or $1/(2x)$

Correct Answer: $2x$ or $1/(2x)$

QID : 72 -

The pie chart given below shows the runs scored by Pujara against team of different countries.

नीचे दिए गए वृत्त चित्र में पुजारा के द्वारा विभिन्न देशों की क्रिकेट टीमों के विरुद्ध बनाए गए रनों को दर्शाया गया है।



The runs scored by Pujara against South Africa is more than runs scored against Bangladesh by what percentage?

Options:


- 1) 100
- 2) 150
- 3) 200
- 4) 250

Correct Answer: 200

QID : 73 -

The pie chart given below shows the runs scored by Pujara against team of different countries.

नीचे दिए गए वृत्त चित्र में पुजारा के द्वारा विभिन्न देशों की क्रिकेट टीमों के विरुद्ध बनाए गए रनों को दर्शाया गया है।



If Pujara has scored 1875 runs in total, then what is the difference in runs scored by Pujara against South Africa and New Zealand?

Options:


- 1) 150
- 2) 175
- 3) 200
- 4) 250

Correct Answer: 150

QID : 74 -

The pie chart given below shows the runs scored by Pujara against team of different countries.

नीचे दिए गए वृत्त चित्र में पुजारा के द्वारा विभिन्न देशों की क्रिकेट टीमों के विरुद्ध बनाए गए रनों को दर्शाया गया है।



What is the sectorial angle (in degrees) made by the runs scored against Australia in the given pie chart?

Options:


- 1) 106.8
- 2) 109.6
- 3) 112.4
- 4) 115.2

Correct Answer: 115.2

QID : 75 -

The pie chart given below shows the runs scored by Pujara against team of different countries.

नीचे दिए गए वृत्त चित्र में पुजारा के द्वारा विभिन्न देशों की क्रिकेट टीमों के विरुद्ध बनाए गए रनों को दर्शाया गया है।



What should be the least number of runs that Pujara must have scored in total (runs can only be integers)?

Options:

- 1) 25
- 2) 225
- 3) 375
- 4) 625

Correct Answer: 25

(English Comprehension)

QID : 76 - In the following question, some part of the sentence may have errors. Find out which part of the sentence has an error and select the appropriate option. If a sentence is free from error, select 'No error'.

I am vexed at him (1)/ for what all he has (2)/ done for him till date. (3)/ No Error (4)

Options:

- 1) 1
- 2) 2
- 3) 3
- 4) 4

Correct Answer: 1

QID : 77 - In the following question, some part of the sentence may have errors. Find out which part of the sentence has an error and select the appropriate option. If a sentence is free from error, select 'No error'.

The Manager warned his team members (1)/ that if they persist in their (2)/ obstructionist attitude they would be punished. (3)/ No Error (4)

Options:

- 1) 1
- 2) 2
- 3) 3
- 4) 4

Correct Answer: 2

QID : 78 - In the following question, the sentence given with blank to be filled in with an appropriate word. Select the correct alternative out of the four and indicate it by selecting the appropriate option.

Both taciturn and _____ , Daniel seldom spoke and never spent money.

Options:

- 1) wary
- 2) cheap
- 3) discreet
- 4) miserly

Correct Answer: miserly

QID : 79 - In the following question, the sentence given with blank to be filled in with an appropriate word. Select the correct alternative out of the four and indicate it by selecting the appropriate option.

He was too _____ to make a statement before the Boss.

Options:

- 1) shy
- 2) tired
- 3) timid
- 4) coward

Correct Answer: timid

QID : 80 - In the following question, out of the four alternatives, select the word similar in meaning to the word given.

Reiterate

Options:

- 1) Abuse
- 2) Pretend
- 3) Detest
- 4) Repeat

Correct Answer: Repeat

QID : 81 - In the following question, out of the four alternatives, select the word similar in meaning to the word given.

Nincompoop

Options:

- 1) Wise
- 2) Fool
- 3) Lover
- 4) Companion

Correct Answer: Fool

QID : 82 - In the following question, out of the four alternatives, select the word opposite in meaning to the word given.

Pellucid

Options:

- 1) Torpid
- 2) Explicit
- 3) Murky
- 4) Limpid

Correct Answer: Murky

QID : 83 - In the following question, out of the four alternatives, select the word opposite in meaning to the word given.

Adamant

Options:

- 1) Rigid
- 2) Flexible
- 3) Fixed
- 4) Unshakable

Correct Answer: Flexible

QID : 84 - In the following question, out of the four alternatives, select the alternative which best expresses the meaning of the idiom/Phrase.

To wrangle over an ass's shadow

Options:

- 1) To waste money over trifles
- 2) To punish a person severely for his arrogance
- 3) To quarrel over trifles
- 4) To keep away from extreme poverty

Correct Answer: To quarrel over trifles

QID : 85 - In the following question, out of the four alternatives, select the alternative which best expresses the meaning of the idiom/Phrase.

Make one's flesh creep

Options:

- 1) To confuse someone
- 2) To flatter someone
- 3) To abuse someone
- 4) To frighten someone

Correct Answer: To frighten someone

QID : 86 - Improve the bracketed part of the sentence.

Father (would have been appreciated) your efforts if you had informed him.

Options:

- 1) would be appreciated
- 2) would have appreciated
- 3) should have been appreciated
- 4) No improvement

Correct Answer: would have appreciated

QID : 87 - Improve the bracketed part of the sentence.

Neha was (surprised by) her result.

Options:

- 1) surprised to
- 2) surprised from
- 3) surprised at
- 4) No improvement

Correct Answer: surprised at

QID : 88 - In the following question, out of the four alternatives, select the alternative which is the best substitute of the phrase.

Study of tumors

Options:

- 1) Oenology
- 2) Oncology
- 3) Phrenology
- 4) Upology

Correct Answer: Oncology

QID : 89 - In the following question, out of the four alternatives, select the alternative which is the best substitute of the phrase.

The highest point

Options:

- 1) Tempest
- 2) Outpost
- 3) Archive
- 4) Zenith

Correct Answer: Zenith

QID : 90 - In the following question, four words are given out of which one word is incorrectly spelt. Find the incorrectly spelt word.

Options:

- 1) Literary
- 2) Leakeage
- 3) Laudable
- 4) Loafer

Correct Answer: Leakeage

QID : 91 - In the following question, four words are given out of which one word is incorrectly spelt. Find the incorrectly spelt word.

Options:

- 1) Anasthetic
- 2) Obliterate
- 3) Concurrence
- 4) Blithesome

Correct Answer: Anasthetic

QID : 92 - The question below consists of a set of labelled sentences. Out of the four options given, select the most logical order of the sentences to form a coherent paragraph.

P: Yet making loans to poor people is hardly a Poverty cure.

Q: Segmenting the industry, might be worth while if it allows more of the poor to get access to credit.

R: Multinational corporations could take the top microfinance institutions to the next level, and the remainder could take the responsibility of development groups and regional banks.

S: Property rights and the role of law matter too.

Options:

- 1) PRQS
- 2) QRPS
- 3) SPQR
- 4) RSPQ

Correct Answer: QRPS

QID : 93 - The question below consists of a set of labelled sentences. Out of the four options given, select the most logical order of the sentences to form a coherent paragraph.

P: But the scenario has quite changed now-a-days by allocating a special budget of funds for security.

Q: In the last ten years, budget towards the development of military forces is higher when compared to others.

R: India earlier days gave more importance to the development of industry and less importance to other departments.

S: This is because of the frightening increase in terrorism all around the world especially emerging after the 9/11 terror attack in U.S.

Options:

- 1) PRQS
- 2) SPQR
- 3) QSPR
- 4) RPSQ

Correct Answer: RPSQ

QID : 94 - In the following question, a sentence has been given in Active/Passive voice. Out of four alternatives suggested, select the one which best expresses the same sentence in Passive/Active voice.

One should keep one's word.

Options:

- 1) A word should be kept.
- 2) A word should be keeping.
- 3) One's word has to be kept.
- 4) One's word should be kept by us.

Correct Answer: A word should be kept.

QID : 95 - In the following question, a sentence has been given in Direct/Indirect speech. Out of the four alternatives suggested, select the one which best expresses the same sentence in Indirect/Direct speech.

The old man said, "Thanks I shall never forget this kindness, Ankit."

Options:

- 1) The old man applauded Ankit for his kindness and he shall never forget Ankit.
- 2) The old man thanked Ankit and assured him that he would never forget his kindness.
- 3) Ankit was being thanked by the old man for his kindness towards an old man.
- 4) The old man said thank you to Ankit for his kindness.

Correct Answer: The old man thanked Ankit and assured him that he would never forget his kindness.

QID : 96 - In the following passage some of the words have been left out. Read the passage carefully and select the correct answer for the given blank out of the four alternatives.

National integration means _____ all the people of the nation into a single whole. It is a _____ that binds together all people in one _____ bond no matter what their religion, caste, language or history may be. It is a _____ cementing force whereby all kinds of people live _____ peacefully and can identify themselves as a part and parcel of a nation.

National integration means _____ all the people of the nation into a single whole.

Options:

- 1) segregating
- 2) combining
- 3) residing
- 4) complying

Correct Answer: combining

QID : 97 - In the following passage some of the words have been left out. Read the passage carefully and select the correct answer for the given blank out of the four alternatives.

National integration means _____ all the people of the nation into a single whole. It is a _____ that binds together all people in one _____ bond no matter what their religion, caste, language or history may be. It is a _____ cementing force whereby all kinds of people live _____ peacefully and can identify themselves as a part and parcel of a nation.

It is a _____ that binds together

Options:

- 1) sentiment
- 2) resources
- 3) essentials
- 4) finances

Correct Answer: sentiment

QID : 98 - In the following passage some of the words have been left out. Read the passage carefully and select the correct answer for the given blank out of the four alternatives.

National integration means _____ all the people of the nation into a single whole. It is a _____ that bends together all people in one _____ bond no matter what their religion, caste, language or history may be. It is a _____ cementing force whereby all kinds of people live _____ peacefully and can identify themselves as a part and parcel of a nation.

all people in one _____ bond no matter what their religion, caste, language or history

Options:

- 1) real
- 2) common
- 3) nominal
- 4) similar

Correct Answer: common

QID : 99 - In the following passage some of the words have been left out. Read the passage carefully and select the correct answer for the given blank out of the four alternatives.

National integration means _____ all the people of the nation into a single whole. It is a _____ that bends together all people in one _____ bond no matter what their religion, caste, language or history may be. It is a _____ cementing force whereby all kinds of people live _____ peacefully and can identify themselves as a part and parcel of a nation.

It is a _____ cementing force whereby all kinds of people

Options:

- 1) weakening
- 2) natural
- 3) strong
- 4) settled

Correct Answer: strong

QID : 100 - In the following passage some of the words have been left out. Read the passage carefully and select the correct answer for the given blank out of the four alternatives.

National integration means _____ all the people of the nation into a single whole. It is a _____ that bends together all people in one _____ bond no matter what their religion, caste, language or history may be. It is a _____ cementing force whereby all kinds of people live _____ peacefully and can identify themselves as a part and parcel of a nation.

live _____ peacefully and can identify themselves as a part and parcel of a nation.

Options:

- 1) separately
- 2) jointly

- 3) happily
- 4) together

Correct Answer: together

PACE ACADEMY