

SSC CGL 2017 EXAM PAPER : Held on 10-AUG-2017 Shift-3

(Reasoning)

QID : 201 - In the following question, select the related word pair from the given alternatives.

Fire : Burn :: ? : ?

Options:

- 1) Water : Drink
- 2) Wood : Trees
- 3) Ice : Freeze
- 4) Flower : Rose

Correct Answer: Ice : Freeze

QID : 202 - In the following question, select the related letters from the given alternatives.

KLMN : IJKL :: TUVW : ?

Options:

- 1) RSUT
- 2) VWXY
- 3) STUV
- 4) RSTU

Correct Answer: RSTU

QID : 203 - In the following question, select the related number from the given alternatives.

3 : 27 :: 4 : ?

Options:

- 1) 63
- 2) 64
- 3) 65
- 4) 15

Correct Answer: 64

QID : 204 - In the following question, select the odd word from the given alternatives.

Options:

- 1) Ludo
- 2) Chess
- 3) Polo
- 4) Carrom

Correct Answer: Polo

QID : 205 - In the following question, select the odd letters from the given alternatives.

Options:

1) DGJ

2) KNQ

3) RUX

4) ILN

Correct Answer: ILN

QID : 206 - In the following question, select the odd number from the given alternatives.

Options:

1) 31

2) 37

3) 43

4) 49

Correct Answer: 49

QID : 207 - Arrange the given words in the sequence in which they occur in the dictionary.

1. Storm

2. Strap

3. Strangle

4. Stamped

5. Satire

Options:

1) 51432

2) 51342

3) 54132

4) 53412

Correct Answer: 54132

QID : 208 - A series is given with one term missing. Select the correct alternative from the given ones that will complete the series.

BT, DR, FP, ?

Options:

1) HO

2) HN

3) NH

4) OH

Correct Answer: HN

QID : 209 - In the following question, select the missing number from the given series.

3, 8, 5, 27, 8, 64, 12, 125, 17, ?

Options:

1) 216

2) 361

3) 625

4) 441

Correct Answer: 216

QID : 210 - The ratio of present ages of P and Q is 5 : 8. Three years later their ages will be in ratio 8 : 11. What is the present age (in years) of Q?

Options:

1) 5

2) 11

3) 14

4) 8

Correct Answer: 8

QID : 211 - Pointing to a lady, Diwakar said, "Her mother's only grandson is my son." How is that lady related to Diwakar?

Options:

1) Aunty

2) Sister

3) Mother

4) Wife

Correct Answer: Sister

QID : 212 - In the following question, from the given alternative words, select the word which cannot be formed using the letters of the given word.

Biological

Options:

1) Logic

2) Globe

3) Bail

4) Bill

Correct Answer: Globe

QID : 213 - In a certain code language, "who are you" is written as "432", "they is you" is written as "485" and "they are dangerous" is written as "295". How is "dangerous" written in that code language?

Options:

1) 2

2) 4

3) 5

4) 9

Correct Answer: 9

QID : 214 - If "P" denotes "multiplied by", "R" denotes "subtracted from", "S" denotes "added to" and "Q" denotes "divided by", then which of the following equation is true?

Options:

1) $18 R 60 Q 15 S 2 = 8$

2) $15 S 16 Q 2 P 4 = 47$

3) $3 P 5 R 18 Q 3 = 6$

4) $15 S 28 Q 4 P 2 = 27$

Correct Answer: $15 S 16 Q 2 P 4 = 47$

QID : 215 - If $4 * 7 * 2 = 361$ and $5 * 9 * 1 = 480$, then

$2 * 1 * 3 = ?$

Options:

1) 312

2) 324

3) 210

4) 102

Correct Answer: 102

QID : 216 -

In the following question, select the number which can be placed at the sign of question mark (?) from the given alternatives.

निम्नलिखित प्रश्न में दिए गए विकल्पों में से प्रश्न चिन्ह (?) के स्थान पर आने वाली संख्या को चुनिए।

3	10	6	186
9	5	3	138
5	7	1	36
3	2	5	?

Options:

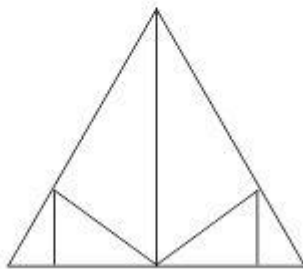
- 1) 35
- 2) 42
- 3) 45
- 4) 95

Correct Answer: 35

QID : 217 -

How many triangles are there in the given figure?

दी गई आकृति में कितने त्रिभुज हैं?



Options:

- 1) 10
- 2) 11
- 3) 12

4) 13

Correct Answer: 11

QID : 218 - In each of the following question below are given some statements followed by some conclusions. Taking the given statements to be true even if they seem to be at variance from commonly known facts, read all the conclusions and then decide which of the given conclusion logically follows the given statements.

Statements:

- I. All cups are vegetable.
- II. All vegetable are pens.

Conclusions:

- I. Some pens are vegetable.
- II. Some pens are cups.

Options:

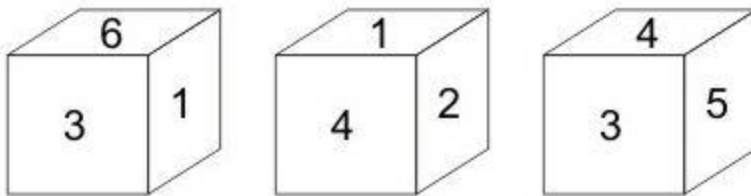
- 1) Only conclusion (I) follows.
- 2) Only conclusion (II) follows.
- 3) Both conclusion follow.
- 4) Neither conclusion (I) nor conclusion (II) follows.

Correct Answer: Both conclusion follow.

QID : 219 -

Three positions of a cube are shown below. What will come opposite to face containing '5'?

नीचे एक घन की तीन अवस्थाएँ दर्शायी गयी है। अंक '5' के विपरीत फलक पर कौन सा अंक आयेगा?



Options:

- 1) 6
- 2) 1
- 3) 3

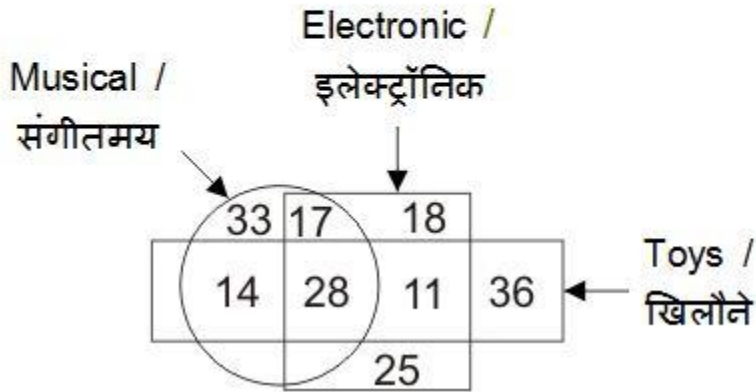
4) 2

Correct Answer: 1

QID : 220 -

In the given figure, how many are musical toys?

दी गई आकृति में, कितने संगीतमय खिलौने हैं?



Options:

1) 53

2) 61

3) 42

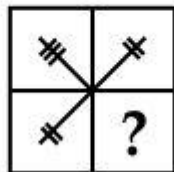
4) 45

Correct Answer: 42

QID : 221 -


Which answer figure will complete the pattern in the question figure?

कौन सी उत्तर आकृति प्रश्न आकृति के प्रतिरूप को पूरा करेगी?

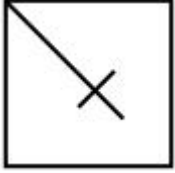


Options:

1)

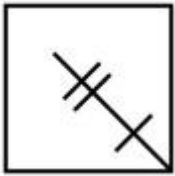


2)



3)

4)

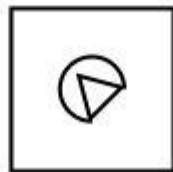


Correct Answer:

QID : 222 -

From the given answer figures, select the one in which the question figure is hidden/embedded.

दी गई उत्तर आकृतियों में से उस उत्तर आकृति को चुनिए जिस में प्रश्न आकृति निहित है।



Options:

1)



2)



3)



4)

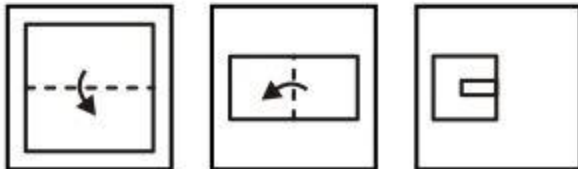


Correct Answer:

QID : 223 -

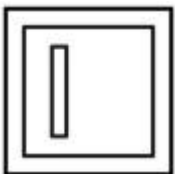
A piece of paper is folded and punched as shown below in the question figures. From the given answer figures, indicate how it will appear when opened?

नीचे के प्रश्न आकृतियों में दिखाए अनुसार कागज को मोड़कर छेदने तथा खोलने के बाद वह किस उत्तर आकृति जैसा दिखाई देगा?



Options:

1)



2)



3)



4)

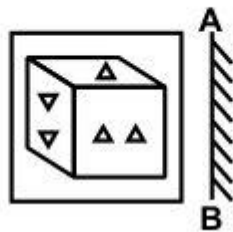


Correct Answer:

QID : 224 -

If a mirror is placed on the line AB, then which of the answer figures is the right image of the given figure?

यदि एक दर्पण को AB रेखा पर रखा जाए, तो दी गई उत्तर आकृतियों में से कौन सी आकृति प्रश्न आकृति की सही प्रतिबिम्ब होगी?



Options:

1)



2)



3)



4)



Correct Answer:

QID : 225 -

PACE ACADEMY

A word is represented by only one set of numbers as given in any one of the alternatives. The sets of numbers given in the alternatives are represented by two classes of alphabets as shown in the given two matrices. The columns and rows of **Matrix-I** are numbered from 0 to 4 and that of **Matrix-II** are numbered from 5 to 9. A letter from these matrices can be represented first by its row and next by its column, for example, 'S' can be represented by 21, 43, etc., and 'O' can be represented by 65, 88, etc. Similarly, you have to identify the set for the word "SPEAK".

एक शब्द केवल एक संख्या-समूह द्वारा दर्शाया गया है, जैसा कि विकल्पों में से किसी एक में दिया गया है। विकल्पों में दिए गए संख्या-समूह अक्षरों के दो वर्गों द्वारा दर्शाए गए हैं, जैसा कि दिए गए दो आव्यूहों में है। आव्यूह-I के स्तम्भ और पंक्ति की संख्या 0 से 4 है और आव्यूह-II की 5 से 9। इन आव्यूहों से एक अक्षर को पहले उसकी पंक्ति और बाद में स्तम्भ संख्या द्वारा दर्शाया जा सकता है। उदाहरण के लिए 'S' को 21, 43, आदि द्वारा दर्शाया जा सकता है तथा 'O' को 65, 88, आदि द्वारा दर्शाया जा सकता है। इसी तरह से आपको प्रश्न में दिए शब्द "SPEAK" के लिए समूह को पहचानना है।

Matrix-I
आव्यूह-I

	0	1	2	3	4
0	I	C	E	P	S
1	S	E	P	I	C
2	E	S	I	C	P
3	C	P	S	E	I
4	P	I	C	S	E

Matrix-II
आव्यूह-II

	5	6	7	8	9
5	R	O	A	K	B
6	O	A	K	B	R
7	A	K	B	R	O
8	K	B	R	O	A
9	B	R	O	A	K

Options:

- 1) 10, 12, 11, 66, 58
- 2) 43, 31, 33, 89, 86
- 3) 21, 40, 44, 56, 99
- 4) 32, 03, 20, 97, 66

Correct Answer: 10, 12, 11, 66, 58

(General Awareness)

QID : 226 - Which one of the following is not an instrument of credit control in India?

Options:

- 1) Rationing of credit
- 2) Direct Action
- 3) Open Market operations
- 4) Variable cost reserve ratios

Correct Answer: Variable cost reserve ratios

QID : 227 - Which among the following is an example of micro-economic variable?

Options:

- 1) National Income
- 2) Aggregate Supply
- 3) Employment
- 4) Consumer's Equilibrium

Correct Answer: Consumer's Equilibrium

QID : 228 - Fundamental duties are mentioned in which of the following part of Indian Constitution?

Options:

- 1) Part II
- 2) Part III
- 3) Part V
- 4) Part IV A

Correct Answer: Part IV A

QID : 229 - What is the minimum age for becoming a Governor of state in India?

Options:

- 1) 30 years
- 2) 25 years
- 3) 35 years
- 4) 45 years

Correct Answer: 35 years

QID : 230 - Who amongst the following was the successor of Sikh Guru Har Krishan?

Options:

- 1) Guru Angad Dev
- 2) Guru Tegh Bahadur
- 3) Guru Hargobind
- 4) Guru Amar Das

Correct Answer: Guru Tegh Bahadur

QID : 231 - Lord Cornwallis is known for _____.

Options:

- 1) permanent revenue settlement of Bengal
- 2) attacking the caste system
- 3) land revenue settlement of United States
- 4) ryotwari settlement of Madras

Correct Answer: permanent revenue settlement of Bengal

QID : 232 - 49th Parallel is the boundary line between which two countries?

Options:

- 1) USA and Canada
- 2) North and South Vietnam
- 3) Germany and France

4) Brazil and Chile

Correct Answer: USA and Canada

QID : 233 - How does La-Nina affect the Pacific Ocean?

Options:

- 1) Decreases salinity of ocean
- 2) Cools down the temperature of water
- 3) Maintains stable temperature of water
- 4) Increases salinity of ocean

Correct Answer: Cools down the temperature of water

QID : 234 - Cinnamon is obtained from which part of the plant?

Options:

- 1) Stem
- 2) Bark
- 3) Roots
- 4) Fruits

Correct Answer: Bark

QID : 235 - Insulin is a kind of _____

Options:

- 1) hormone
- 2) protein
- 3) enzyme
- 4) vitamin

Correct Answer: hormone

QID : 236 - Which among the following carries impure blood to human heart?

Options:

- 1) Aorta
- 2) Pulmonary vein
- 3) Pulmonary arteries
- 4) Vena Cava

Correct Answer: Pulmonary arteries

QID : 237 - Why does water tank appear shallower when viewed from the top?

Options:

- 1) Due to reflection
- 2) Due to refraction
- 3) Due to diffraction
- 4) Due to total internal reflection

Correct Answer: Due to refraction

QID : 238 - Which colour is formed when Red and Green are mixed?

Options:

- 1) Light blue
- 2) Yellow

3) White

4) Grey

Correct Answer: Yellow

QID : 239 - What is the full form of JPEG?

Options:

1) Joint Photographic Experts Group

2) Joint Protocol Experts Graphics.

3) Joint Programming Experts Graphics

4) Joint Project Experts Group

Correct Answer: Joint Photographic Experts Group

QID : 240 - What is an endothermic reaction?

Options:

1) Reaction in which heat is released.

2) Reaction in which heat is absorbed.

3) Reaction in which neither heat is released nor absorbed.

4) None of these

Correct Answer: Reaction in which heat is absorbed.

QID : 241 - Which of the following is an ore of Aluminium?

Options:

1) Galena

2) Cryollite

3) Cinnabar

4) Epsom Salt

Correct Answer: Cryollite

QID : 242 - Which of the following gas was released during Bhopal gas tragedy?

Options:

1) Methyl isocyanate

2) Sodium isothiocyanate

3) Nitrogen isothiocyanate

4) Potassium isothiocyanate

Correct Answer: Methyl isocyanate

QID : 243 - What is the name of the scheme for the Employees State Insurance Corporation (ESIC) beneficiaries launched in Delhi region?

Options:

1) Sakushal Humesha

2) Kahin bhi kabhi bhi

3) Jeevan Arogya

4) Shramik Kalyan

Correct Answer: Kahin bhi kabhi bhi

QID : 244 -

Match the following.

निम्नलिखित का मिलान कीजिए।

Scientist / वैज्ञानिक	Discovery / खोज
1. Joseph Thomson जॉसेफ थॉमसन	a. Optical Fiber ऑप्टिकल फाइबर (प्रकाशिक फाइबर)
2. Alexander Fleming अलेक्जेंडर फ्लेमिंग	b. Radium रेडियम
3. Narinder Kapany नरिंदर कापनी	c. Electron इलेक्ट्रॉन
4. Marie Curie मैरी क्यूरी	d. Penicillin पेनिसिलिन

Options:

1) 1-c, 2-d, 3-a, 4-b

2) 1-a, 2-d, 3-c, 4-b

3) 1-c, 2-a, 3-d, 4-b

4) 1-a, 2-d, 3-b, 4-c

Correct Answer: 1-c, 2-d, 3-a, 4-b

QID : 245 - Term ' Gambit ' is associated with which of the following sport?

Options:

1) Basketball

2) Chess

3) Boxing

4) Golf

Correct Answer: Chess

QID : 246 - Madhuri Dixit is associated with which Indian Dance form?

Options:

1) Bharatnatyam

2) Kuchipudi

3) Kathak

4) Kathakali

Correct Answer: Kathak

QID : 247 - Who among the following is a Sanjay Chopra Award recipient for 2016?

Options:

- 1) Abhinash Mishra
- 2) Arjun Singh
- 3) Aromal SM
- 4) Srawanand Saha

Correct Answer: Arjun Singh

QID : 248 - 'My Story' is an autobiography of which famous cricketer?

Options:

- 1) Kumar Sangakara
- 2) Kevin Peterson
- 3) Brendon Mccullum
- 4) Michael Clarke

Correct Answer: Michael Clarke

QID : 249 - Which country has approved more than 500 new settler homes in East Jerusalem?

Options:

- 1) USA
- 2) UAE
- 3) Israel
- 4) United Kingdom

Correct Answer: Israel

QID : 250 - Which of the following country is not a member of SAARC?

Options:

- 1) Nepal
- 2) Maldives
- 3) China
- 4) Afghanistan

Correct Answer: China

(Mathematics)

QID : 251 - By which least number should 5000 be divided so that it becomes a perfect square?

Options:

- 1) 2
- 2) 5
- 3) 10
- 4) 25

Correct Answer: 2

QID : 252 - A can do a work in 8 days, B can do the same work in 10 days and C can do the same work in 12 days. If all three of them do the same work together and they are paid Rs 7400, then what is the share (in Rs) of B?

Options:

- 1) 2600

- 2) 3000
- 3) 2400
- 4) 2000

Correct Answer: 2400

QID : 253 - If the radius of the cylinder is increased by 25%, then by how much percent the height must be reduced, so that the volume of the cylinder remains same?

Options:

- 1) 36
- 2) 56
- 3) 64
- 4) 46

Correct Answer: 36

QID : 254 - The marked price of an article is 20% more than its cost price. If 5% discount is given on the marked price, then what is the profit percentage?

Options:

- 1) 5
- 2) 14
- 3) 15
- 4) 25

Correct Answer: 14

QID : 255 - If $A : B = 2 : 5$, $B : C = 4 : 3$ and $C : D = 2 : 1$, then what is value of $A : C : D$?

Options:

- 1) 6 : 5 : 2
- 2) 7 : 20 : 10
- 3) 8 : 30 : 15
- 4) 16 : 30 : 15

Correct Answer: 16 : 30 : 15

QID : 256 - The average runs conceded by a bowler in 5 matches is 45 and 15.75 in other 4 matches. What is the average runs conceded by the bowler in 9 matches?

Options:

- 1) 15
- 2) 32
- 3) 35
- 4) 53.5

Correct Answer: 32

QID : 257 - A person bought pens at 25 for a rupee and sold at 15 for a rupee. What is his profit percentage?

Options:

- 1)

$$16\frac{2}{3}$$

2)

$$33\frac{1}{3}$$

3)

$$66\frac{2}{3}$$

4) 40

Correct Answer:

QID : 258 - 80 litre mixture of milk and water contains 10% milk. How much milk (in litres) must be added to make water percentage in the mixture as 80%?

Options:

- 1) 8
- 2) 9
- 3) 10
- 4) 12

Correct Answer: 10

QID : 259 - A bus starts running with the initial speed of 21 km/hr and its speed increases every hour by 3 km/hr. How many hours will it take to cover a distance of 252 km?

Options:

- 1) 3
- 2) 5
- 3) 8
- 4) 10

Correct Answer: 8

QID : 260 - A sum of Rs 400 becomes Rs 448 at simple interest in 2 years. In how many years will the sum of Rs 550 amounts to Rs 682 at the same rate?

Options:

- 1) 2
- 2) 3
- 3) 3.5
- 4) 4

Correct Answer: 4

QID : 261 -

What is the value of $\frac{1+x}{1-x^4} \div \frac{x^2}{1+x^2} \times x(1-x)$?

$\frac{1+x}{1-x^4} \div \frac{x^2}{1+x^2} \times x(1-x)$ का मान क्या है?

Options:

- 1) $1/x$
- 2) $x^2 - 1$
- 3) $x + 1$
- 4) x

Correct Answer: $1/x$

QID : 262 -

If $x + \frac{1}{x} = 17$, then what is the value of $\frac{x^4 + \frac{1}{x^2}}{x^2 - 3x + 1}$?

यदि $x + \frac{1}{x} = 17$, तो $\frac{x^4 + \frac{1}{x^2}}{x^2 - 3x + 1}$ का मान क्या है?

Options:

- 1) $2431/7$
- 2) $3375/7$
- 3) $3375/14$
- 4) $3985/9$

Correct Answer: $2431/7$

QID : 263 -

What is the value of x in the equation

$$\sqrt{\frac{1+x}{x}} - \sqrt{\frac{x}{1+x}} = \frac{1}{\sqrt{6}} ?$$

समीकरण $\sqrt{\frac{1+x}{x}} - \sqrt{\frac{x}{1+x}} = \frac{1}{\sqrt{6}}$ में x का

मान क्या है?

Options:

- 1) -2
- 2) 3
- 3) 2
- 4) None of these

Correct Answer: 2

QID : 264 -

If $2\left[x^2 + \frac{1}{x^2}\right] - 2\left[x - \frac{1}{x}\right] - 8 = 0$, then what are the two values of $x - \frac{1}{x}$?

यदि $2\left[x^2 + \frac{1}{x^2}\right] - 2\left[x - \frac{1}{x}\right] - 8 = 0$, तो $x - \frac{1}{x}$ के दो

मान क्या हैं?

Options:

- 1) -1 or 2
- 2) 1 or -2
- 3) -1 or -2
- 4) 1 or 2

Correct Answer: -1 or 2

QID : 265 - In $\triangle ABC$, $\angle BAC = 90^\circ$ and AD is drawn perpendicular to BC . If $BD = 7$ cm and $CD = 28$ cm, then what is the length (in cm) of AD ?

Options:

- 1) 3.5
- 2) 7
- 3) 10.5
- 4) 14

Correct Answer: 14

QID : 266 - A chord of length 60 cm is at a distance of 16 cm from the centre of a circle. What is the radius (in cm) of the circle?

Options:

1) 17

2) 34

3) 51

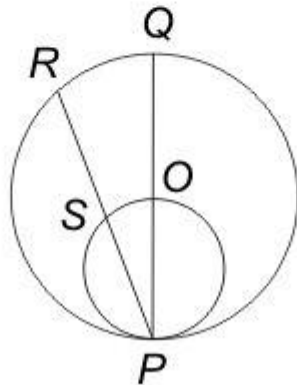
4) 68

Correct Answer: 34

QID : 267 -

In the given figure, a smaller circle touches a larger circle at P and passes through its centre O . PR is a chord of length 34 cm, then what is the length (in cm) of PS ?

दी गई आकृति में, एक छोटा वृत्त एक बड़े वृत्त को बिंदु P पर स्पर्श कर रहा है तथा उसके केंद्र O से होकर गुजरता है। PR एक जीवा है जिसकी लम्बाई 34 से.मी. है, तो PS की लम्बाई (से.मी. में) क्या है?



Options:

1) 9

2) 17

3) 21

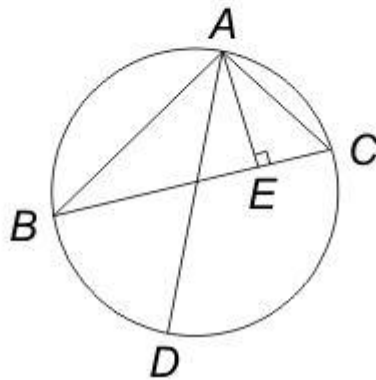
4) 25

Correct Answer: 17

QID : 268 -

In the given figure, ABC is a triangle in which, $AB = 10$ cm, $AC = 6$ cm and altitude $AE = 4$ cm. If AD is the diameter of the circum-circle, then what is the length (in cm) of circum-radius?

दी गई आकृति में, ABC एक त्रिभुज है जिसमें $AB = 10$ से.मी., $AC = 6$ से.मी. तथा शीर्षलम्ब $AE = 4$ से.मी. है। यदि AD बाह्य वृत्त का व्यास है, तो बाह्य त्रिज्या की लम्बाई (से.मी. में) क्या है?



Options:

- 1) 3
- 2) 7.5
- 3) 12
- 4) 15

Correct Answer: 7.5

QID : 269 - What is the simplified value of $\operatorname{cosec}^6 A - \cot^6 A - 3 \operatorname{cosec}^2 A \cot^2 A$?

Options:

- 1) -2
- 2) -1
- 3) 0
- 4) 1

Correct Answer: 1

QID : 270 -

What is the simplified value of $\sqrt{\frac{\sec A - 1}{\sec A + 1}}$?

$\sqrt{\frac{\sec A - 1}{\sec A + 1}}$ का सरलीकृत मान क्या है?

Options:

1) cosec A – cot A

2) sec A – tan A

3) sec² A

4) sec A cosec A

Correct Answer: cosec A – cot A

QID : 271 - If tan A = 1/2 and tan B = 1/3, then what is the value of tan (2A + B)?

Options:

1) 1

2) 3

3) 5


4) 9

Correct Answer: 3

QID : 272 -

The pie chart given below shows the percentage of time taken by different processes in making a car.

नीचे दिये गए वृत्त चित्र में एक कार बनाने की विभिन्न प्रक्रियाओं में लगने वाले समय के प्रतिशत को दर्शाया गया है।



If total time taken to make a car is 300 hours, then what is the total time (in hours) taken in paint and frame?

Options:


- 1) 99
- 2) 72
- 3) 105
- 4) 66

Correct Answer: 105

QID : 273 -

The pie chart given below shows the percentage of time taken by different processes in making a car.

नीचे दिये गए वृत्त चित्र में एक कार बनाने की विभिन्न प्रक्रियाओं में लगने वाले समय के प्रतिशत को दर्शाया गया है।



If time taken in seats is 192 hours, then what is the time taken (in hours) in glass?

Options:


- 1) 256
- 2) 352
- 3) 416
- 4) 278

Correct Answer: 256

QID : 274 -

The pie chart given below shows the percentage of time taken by different processes in making a car.

नीचे दिये गए वृत्त चित्र में एक कार बनाने की विभिन्न प्रक्रियाओं में लगने वाले समय के प्रतिशत को दर्शाया गया है।



If total time taken in engine and tyres is 127.5 hours, then what is the difference (in hours) in time taken by frame and glass respectively?

Options:


- 1) 27.5
- 2) 12.5
- 3) 40
- 4) 35

Correct Answer: 35

QID : 275 -

The pie chart given below shows the percentage of time taken by different processes in making a car.

नीचे दिये गए वृत्त चित्र में एक कार बनाने की विभिन्न प्रक्रियाओं में लगने वाले समय के प्रतिशत को दर्शाया गया है।



15% of total time is spent on quality check and this time is equally taken from all other processes. So What will be the new sectorial angle (in degrees) made by total time of seats and glass?

Options:

- 1) 28.6
- 2) 32.4
- 3) 35.8
- 4) 31.6

Correct Answer: 32.4

(English Comprehension)

QID : 276 - In the following question, some part of the sentence may have errors. Find out which part of the sentence has an error and select the appropriate option. If a sentence is free from error, select 'No Error'.

Little knowledge of playing volleyball (1)/ that she possessed proved to be (2)/helpful at the time of inaugural match. (3)/ No Error (4)

Options:

- 1) 1
- 2) 2
- 3) 3
- 4) 4

Correct Answer: 1

QID : 277 - In the following question, some part of the sentence may have errors. Find out which part of the sentence has an error and select the appropriate option. If a sentence is free from error, select 'No Error'.

I had not completed my English homework (1)/ so I thought I was done with when the (2)/ teacher asked me to hand it in. (3)/ No Error (4)

Options:

- 1) 1
- 2) 2
- 3) 3
- 4) 4

Correct Answer: 2

QID : 278 - In the following question, the sentence given with blank to be filled in with an appropriate word. Select the correct alternative out of the four and indicate it by selecting the appropriate option.

Keith has _____ with a failure in English examination thrice.

Options:

- 1) caught
- 2) gone
- 3) got
- 4) met

Correct Answer: met

QID : 279 - In the following question, the sentence given with blank to be filled in with an appropriate word. Select the correct alternative out of the four and indicate it by selecting the appropriate option.

The manager was _____ an explanation of his conduct.

Options:

- 1) called for
- 2) called off
- 3) called to
- 4) called up

Correct Answer: called for

QID : 280 - In the following question, out of the four alternatives, select the word similar in meaning to the word given.

Eloquent

Options:

- 1) Fluent
- 2) Ignorant
- 3) Rude
- 4) Significant

Correct Answer: Fluent

QID : 281 - In the following question, out of the four alternatives, select the word similar in meaning to the word given.

Nefarious

Options:

- 1) Iniquitous
- 2) Purposeful
- 3) Suspicious

4) Virtuous

Correct Answer: Iniquitous

QID : 282 - In the following question, out of the four alternatives, select the word opposite in meaning to the word given.

Ensconce

Options:

- 1) Establish
- 2) Impudence
- 3) Request
- 4) Unveil

Correct Answer: Unveil

QID : 283 - In the following question, out of the four alternatives, select the word opposite in meaning to the word given.

Lugubrious

Options:

- 1) Clumsy
- 2) Lucid
- 3) Optimistic
- 4) Sinister

Correct Answer: Optimistic

QID : 284 - In the following question, out of the four alternatives, select the alternative which best expresses the meaning of the idiom/phrase.

Ended in a fiasco

Options:

- 1) A complete failure
- 2) A successful event
- 3) Changed one completely
- 4) Twisted around

Correct Answer: A complete failure

QID : 285 - In the following question, out of the four alternatives, select the alternative which best expresses the meaning of the idiom/phrase.

Sow wild oats

Options:

- 1) To make someone fool
- 2) To make space to red
- 3) To take revenge
- 4) To waste time by doing foolish things

Correct Answer: To waste time by doing foolish things

QID : 286 - Improve the bracketed part of the sentence.

He has painted that picture so often that he can do it with his (eyes closed).

Options:

- 1) arms full
- 2) eyes opened

- 3) mind blank
- 4) No improvement

Correct Answer: No improvement

QID : 287 - Improve the bracketed part of the sentence.

If you talk to her nicely, she will probably (allow you) her notes.

Options:

- 1) allow that you have
- 2) let you have
- 3) let you to have
- 4) No improvement

Correct Answer: let you have

QID : 288 - In the following question, out of the four alternatives, select the alternative which is the best substitute of the phrase.

Easily duped or fooled

Options:

- 1) Bigot
- 2) Gullible
- 3) Ridicule
- 4) Venerable

Correct Answer: Gullible

QID : 289 - In the following question, out of the four alternatives, select the alternative which is the best substitute of the phrase.

Atonement for one's sins

Options:

- 1) Elite
- 2) Ignoramus
- 3) Incendiary
- 4) Repentance

Correct Answer: Repentance

QID : 290 - In the following question, four words are given out of which one word is incorrectly spelt. Select the incorrectly spelt word.

Options:

- 1) Usable
- 2) Defense
- 3) Inventor
- 4) Annaul

Correct Answer: Annaul

QID : 291 - In the following question, four words are given out of which one word is incorrectly spelt. Select the incorrectly spelt word.

Options:

- 1) Changeable
- 2) Inedible
- 3) Tracable
- 4) Valuable

Correct Answer: Tracable

QID : 292 - The question below consists of a set of labelled sentences. Out of the four options given, select the most logical order of the sentences to form a coherent paragraph.

P- It would be better to speak of uniformities of nature.

Q- Law of nature are not commands but statements of facts.

R- This would do away with elementary fallacy that a law implies a law given.

S- The use of the word law in this context is rather unfortunate.

Options:

1) QSRP

2) SQRP

3) QSPR

4) SQPR

Correct Answer: QSPR

QID : 293 - The question below consists of a set of labelled sentences. Out of the four options given, select the most logical order of the sentences to form a coherent paragraph.

P- When the game of life is finally over there is no second chance to correct our errors.

Q- Time is the greater equalizer of all mankind.

R- Time offers opportunity but demands a sense of regard.

S- It has taken away the best and the worst of us without regard of either.

Options:

1) QSRP

2) RSQP

3) PQRS

4) RSPQ

Correct Answer: QSRP

QID : 294 - In the following question, a sentence has been given in Active/Passive voice. Out of the four alternatives suggested, select the one which best expresses the same sentence in Passive/Active voice.

He saw him conducting the seminar on personality development.

Options:

1) He was seen by me to conduct the seminar on personality development.

2) He was seen conducting the seminar on personality development.

3) He saw the seminar on personality development being conducted by him.

4) He saw the seminar on personality development to be conducted by him.

Correct Answer: He saw the seminar on personality development being conducted by him.

QID : 295 - In the following question, a sentence has been given in Direct/Indirect speech. Out of the four alternatives suggested, select the one which best expresses the same sentence in Indirect/Direct speech.

Rashmi said to me, "Where is the telephone exchange"?

Options:

1) Rashmi asked me that where the telephone exchange was.

2) Rashmi asked me where the telephone exchange was.

3) Rashmi asked me where was the telephone exchange.

4) Rashmi wanted to know where the telephone exchange was.

Correct Answer: Rashmi asked me where the telephone exchange was.

QID : 296 - In the following questions, the sentence given with blank to be filled in with an appropriate word. Select the correct alternative out of the four and indicate it by selecting the appropriate option.

Corruption is a _____ which has been spread in the mind of wrong people of the society, community and _____. It is the mistreatment of public resources just for getting some _____ advantage to fulfil little wish. It is concerned with the unnecessary and wrong use of both power and _____ by anyone whether the government or non government organisation. It affects the growth and development of the nation in all aspects like socially, _____ and politically.

Corruption is a _____ which has been spread in the mind of wrong people

Options:

- 1) havoc
- 2) poison
- 3) pollutant
- 4) grassroot

Correct Answer: poison

QID : 297 - In the following questions, the sentence given with blank to be filled in with an appropriate word. Select the correct alternative out of the four and indicate it by selecting the appropriate option.

Corruption is a _____ which has been spread in the mind of wrong people of the society, community and _____. It is the mistreatment of public resources just for getting some _____ advantage to fulfil little wish. It is concerned with the unnecessary and wrong use of both power and _____ by anyone whether the government or non government organisation. It affects the growth and development of the nation in all aspects like socially, _____ and politically.

of the society, community and _____. It is the mistreatment

Options:

- 1) country
- 2) world
- 3) universe
- 4) company

Correct Answer: country

QID : 298 - In the following questions, the sentence given with blank to be filled in with an appropriate word. Select the correct alternative out of the four and indicate it by selecting the appropriate option.

Corruption is a _____ which has been spread in the mind of wrong people of the society, community and _____. It is the mistreatment of public resources just for getting some _____ advantage to fulfil little wish. It is concerned with the unnecessary and wrong use of both power and _____ by anyone whether the government or non government organisation. It affects the growth and development of the nation in all aspects like socially, _____ and politically.

public resources just for getting some _____ advantage to fulfil little wish.

Options:

- 1) fruitful
- 2) wishful
- 3) favourite
- 4) unfair

Correct Answer: unfair

QID : 299 - In the following questions, the sentence given with blank to be filled in with an appropriate word. Select the correct alternative out of the four and indicate it by selecting the appropriate option.

Corruption is a _____ which has been spread in the mind of wrong people of the society, community and _____. It is the mistreatment of public resources just for getting some _____ advantage to fulfil little wish. It

is concerned with the unnecessary and wrong use of both power and _____ by anyone whether the government or non government organisation. It affects the growth and development of the nation in all aspects like socially, _____ and politically.

wrong use of both power and _____ by anyone whether

Options:

- 1) position
- 2) growth
- 3) status
- 4) symbol

Correct Answer: position

QID : 300 - In the following questions, the sentence given with blank to be filled in with an appropriate word. Select the correct alternative out of the four and indicate it by selecting the appropriate option.

Corruption is a _____ which has been spread in the mind of wrong people of the society, community and _____. It is the mistreatment of public resources just for getting some _____ advantage to fulfil little wish. It is concerned with the unnecessary and wrong use of both power and _____ by anyone whether the government or non government organisation. It affects the growth and development of the nation in all aspects like socially, _____ and politically.

nation in all aspects like socially, _____ and politically.

Options:

- 1) emotionally
- 2) scientifically
- 3) manually
- 4) economically

Correct Answer: economically

PACE ACADEMY